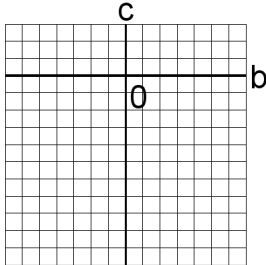


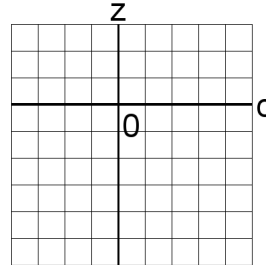
Systèmes Linéaires et Graphiques (C)

Trouvez la solution de chaque système d'équations à l'aide du graphique.

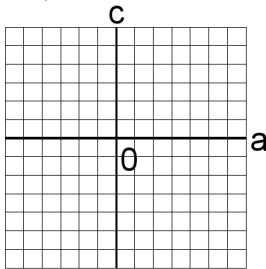
1. $-3b - 3c = -3$
 $-2b + 2c = -22$



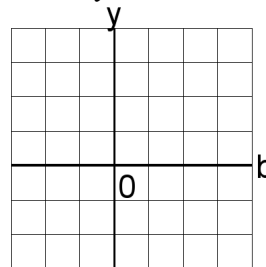
4. $-3c + 2z = -2$
 $4c + 4z = -24$



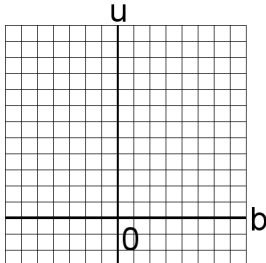
2. $4a - 3c = 21$
 $3a + 4c = 22$



5. $4b - 5y = -3$
 $2b - 5y = -9$



3. $4b + 3u = 35$
 $-4b + 5u = 5$



6. $2u - 4x = -20$
 $4u - 3x = -20$

