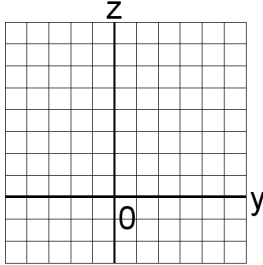


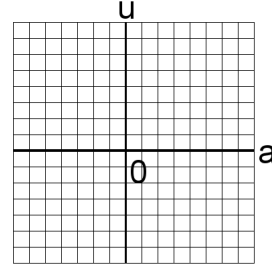
Systèmes Linéaires et Graphiques (G)

Trouvez la solution de chaque système d'équations à l'aide du graphique.

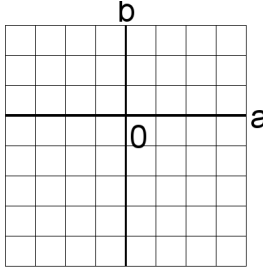
1. $b + 2u = 6$
 $2b + 5u = 14$



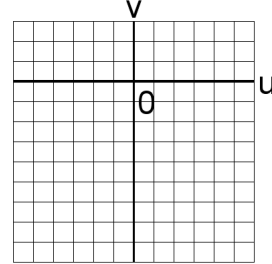
4. $6a + 4b = 10$
 $5a + 5b = 10$



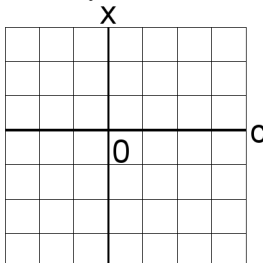
2. $3c + 2u = 5$
 $5c + 2u = 7$



5. $2x + z = 16$
 $6x + 2z = 42$



3. $4b + 6y = 44$
 $6b + 3y = 42$



6. $c + 6u = 37$
 $6c + u = 12$

