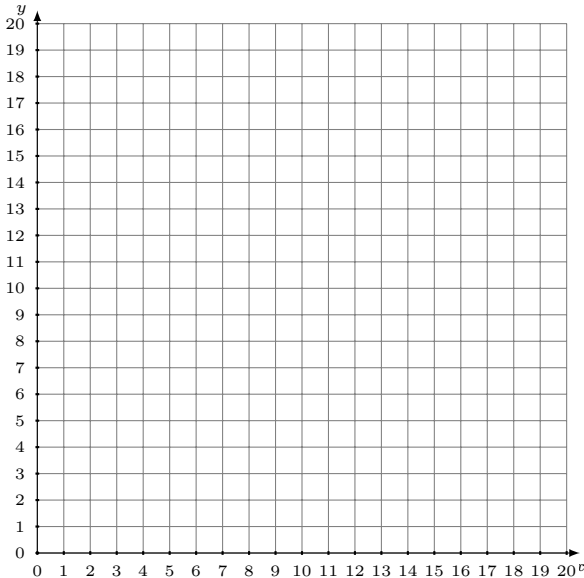


Représentation Graphique d'un Système d'Équations (E)

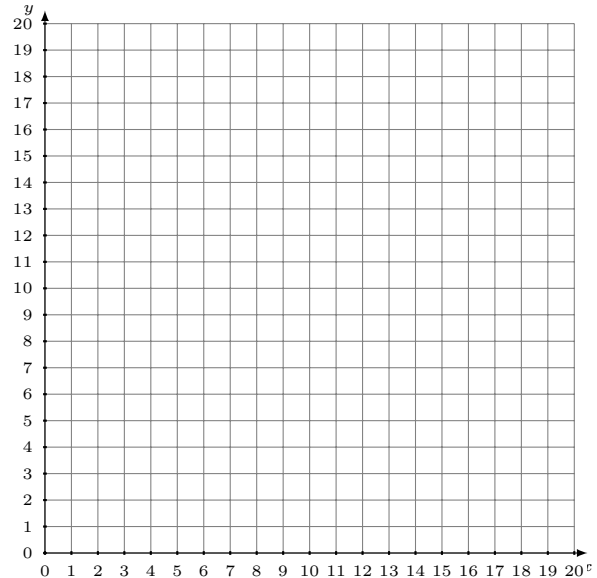
Représentez à l'aide d'un graphique chaque système et identifiez sa solution.

1.
$$y = \frac{3}{7}x + 7$$
$$y = \frac{11}{14}x + 2$$



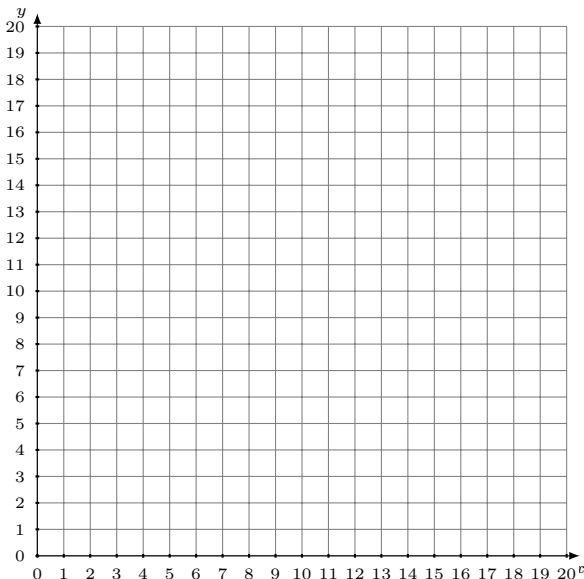
Solution: (----,----)

2.
$$y = -\frac{1}{2}x + 12$$
$$y = -\frac{5}{6}x + 18$$



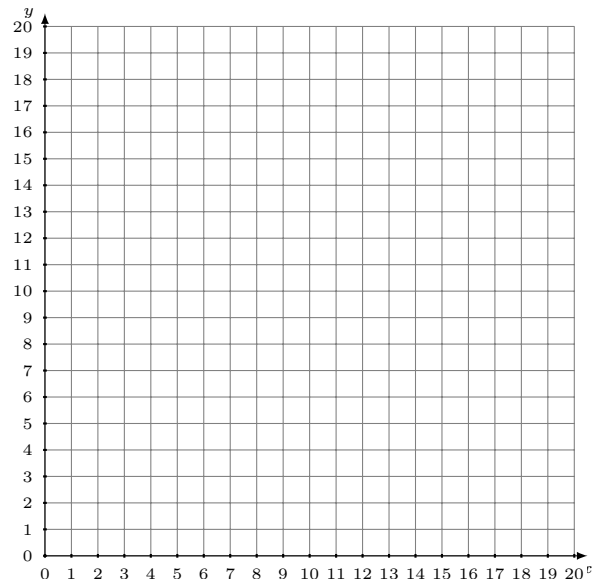
Solution: (----,----)

3.
$$y = \frac{1}{6}x + 4$$
$$y = -\frac{1}{3}x + 10$$



Solution: (----,----)

4.
$$y = \frac{3}{4}x + 8$$
$$y = \frac{7}{4}x$$



Solution: (----,----)