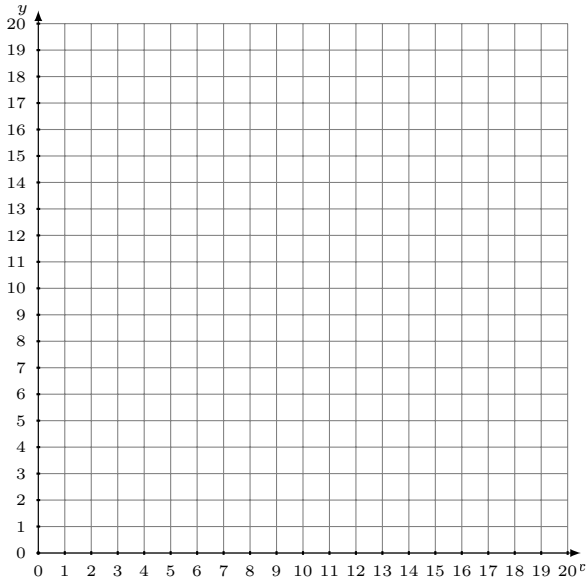


Représentation Graphique d'un Système d'Équations (H)

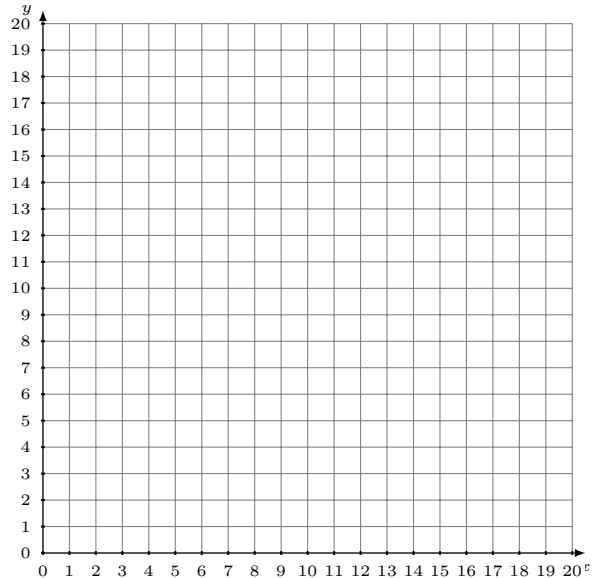
Représentez à l'aide d'un graphique chaque système et identifiez sa solution.

1.
$$y = \frac{9}{8}x + 4$$
$$y = -\frac{1}{4}x + 15$$



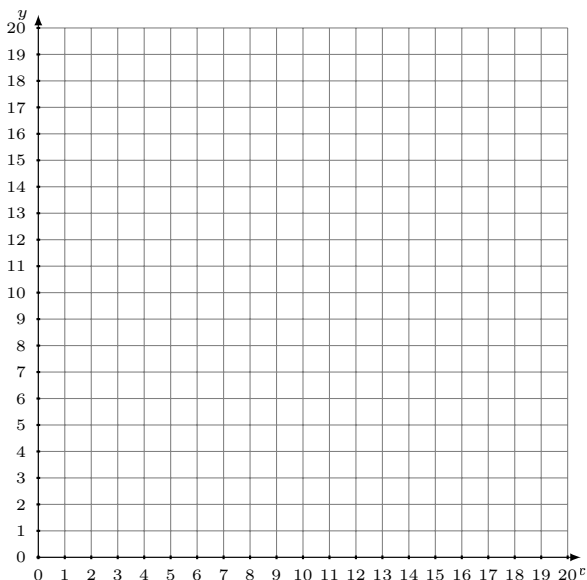
Solution: (____,____)

2.
$$y = -\frac{1}{8}x + 2$$
$$y = -\frac{13}{8}x + 14$$



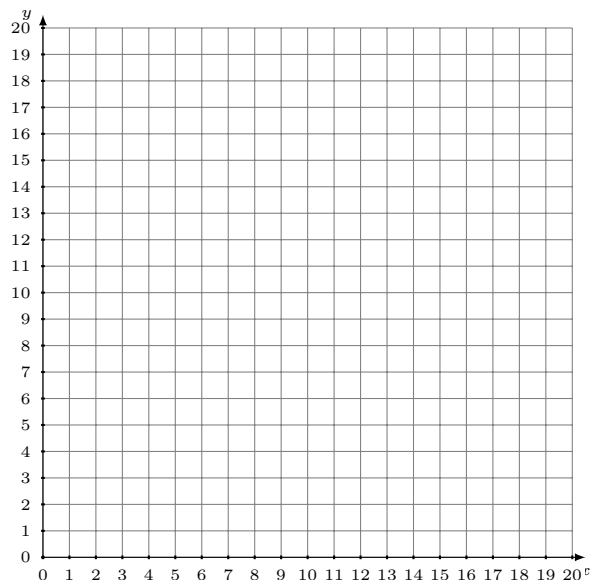
Solution: (____,____)

3.
$$2x - 5y = -60$$
$$3x - 10y = -130$$



Solution: (____,____)

4.
$$11x - 6y = -30$$
$$y = \frac{5}{3}x + 6$$



Solution: (____,____)