

La stratégie d'addition faire quatre-vingts (X)

Nom: _____

Date: _____

Faites quatre-vingts pour vous aider à calculer chaque somme.

$$75 + 7 =$$

Garder Séparer



$$75 + 5 + 2 = 82$$

Faire 80

$$74 + 9 =$$

Garder Séparer

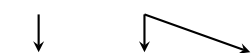


$$\underline{\quad} + \quad + \quad =$$

Faire 80

$$79 + 4 =$$

Garder Séparer

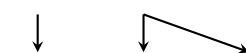


$$\underline{\quad} + \quad + \quad =$$

Faire 80

$$77 + 6 =$$

Garder Séparer

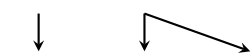


$$\underline{\quad} + \quad + \quad =$$

Faire 80

$$78 + 8 =$$

Garder Séparer

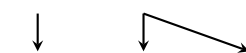


$$\underline{\quad} + \quad + \quad =$$

Faire 80

$$76 + 7 =$$

Garder Séparer

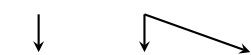


$$\underline{\quad} + \quad + \quad =$$

Faire 80

$$77 + 5 =$$

Garder Séparer



$$\underline{\quad} + \quad + \quad =$$

Faire 80

$$75 + 6 =$$

Garder Séparer

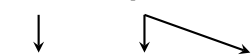


$$\underline{\quad} + \quad + \quad =$$

Faire 80

$$79 + 8 =$$

Garder Séparer

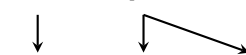


$$\underline{\quad} + \quad + \quad =$$

Faire 80

$$79 + 2 =$$

Garder Séparer



$$\underline{\quad} + \quad + \quad =$$

Faire 80