

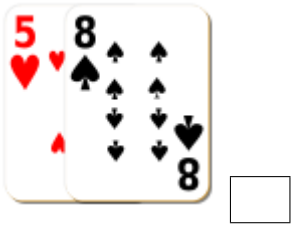


# Addition de Cartes de Jeux (G)

Calculez la somme de chaque ensemble de cartes.



# Addition de Cartes de Jeux (G) Solutions

Calculez la somme de chaque ensemble de cartes.



13



21



12



18



18



19



9



16



6



3



8



15