

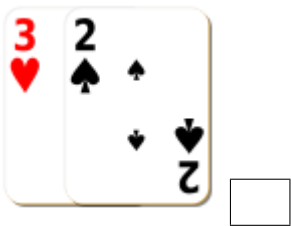



Addition de Cartes de Jeux (C)

Calculez la somme de chaque ensemble de cartes.



Addition de Cartes de Jeux (C) Solutions

Calculez la somme de chaque ensemble de cartes.



5



14



22



13



5



21



7



15



17



15



16



21