

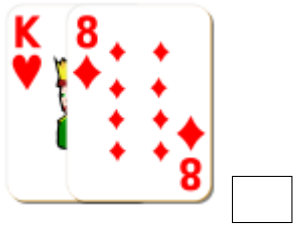
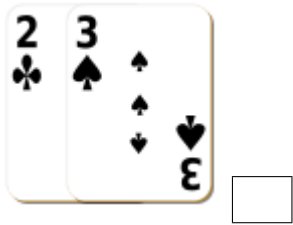


# Addition de Cartes de Jeux (A)

Calculez la somme de chaque ensemble de cartes.



# Addition de Cartes de Jeux (A) Solutions

Calculez la somme de chaque ensemble de cartes.



5



13



21



10



16



9



22



15



19



8



16



16