



Place d'Aiguilles sur Une Horloge Analogique (E)


Nom: _____


Date: _____


Placer les aiguilles de l'horloge pour qu'elles montrent le temps indiqué.


1. 
Midi Minuit
17h06m15s


2. 
Midi Minuit
12h33m30s


3. 
Minuit Midi
11h27m30s


4. 
Minuit Midi
05h30m45s


5. 
Midi Minuit
15h15m00s


6. 
Minuit Midi
03h02m30s


7. 
Midi Minuit
19h20m15s

8. 
Minuit Midi
06h53m00s

9. 
Minuit Midi
00h06m15s

10. 
Midi Minuit
23h45m45s

11. 
Midi Minuit
20h17m45s

12. 
Minuit Midi
08h41m00s

Place d'Aiguilles sur Une Horloge Analogique (E) Solutions

Nom: _____

Date: _____

Placer les aiguilles de l'horloge pour qu'elles montrent le temps indiqué.

