



Place d'Aiguilles sur Une Horloge Analogique (B)


Nom: _____


Date: _____


Placer les aiguilles de l'horloge pour qu'elles montrent le temps indiqué.


1. 
Midi Minuit
23h58m14s


2. 
Midi Minuit
15h08m21s


3. 
Minuit Midi
01h14m03s


4. 
Midi Minuit
12h25m27s


5. 
Minuit Midi
06h29m32s


6. 
Minuit Midi
09h59m05s


7. 
Midi Minuit
17h31m40s

8. 
Minuit Midi
03h23m07s

9. 
Minuit Midi
04h33m03s

10. 
Minuit Midi
10h33m04s

11. 
Midi Minuit
20h22m31s

12. 
Midi Minuit
18h09m43s