







Place d'Aiguilles sur Une Horloge Analogique (F)




Nom: _____




Date: _____




Placer les aiguilles de l'horloge pour qu'elles montrent le temps indiqué.




1. 
Minuit  5:17 AM  Midi




2. 
Midi  7:11 PM  Minuit




3. 
Midi  3:36 PM  Minuit




4. 
Midi  5:52 PM  Minuit




5. 
Minuit  3:20 AM  Midi




6. 
Midi  12:40 PM  Minuit




7. 
Midi  9:52 PM  Minuit

8. 
Midi  10:29 PM  Minuit

9. 
Minuit  11:00 AM  Midi

10. 
Minuit  1:15 AM  Midi

11. 
Minuit  9:15 AM  Midi

12. 
Minuit  6:50 AM  Midi

Place d'Aiguilles sur Une Horloge Analogique (F) Solutions

Nom: _____

Date: _____

Placer les aiguilles de l'horloge pour qu'elles montrent le temps indiqué.

