



Place d'Aiguilles sur Une Horloge Analogique (C)


Nom: _____


Date: _____


Placer les aiguilles de l'horloge pour qu'elles montrent le temps indiqué.


1. 
Midi Minuit
11:26 PM


2. 
Midi Minuit
9:56 PM


3. 
Minuit Midi
9:32 AM


4. 
Midi Minuit
7:50 PM


5. 
Midi Minuit
5:33 PM


6. 
Midi Minuit
12:48 PM


7. 
Minuit Midi
4:38 AM

8. 
Minuit Midi
3:27 AM

9. 
Minuit Midi
12:15 AM

10. 
Minuit Midi
6:47 AM

11. 
Midi Minuit
3:35 PM

12. 
Minuit Midi
10:09 AM