


Lecture d'une Horloge Analogique (D)

Nom: _____

Date: _____

Lisez chaque heure et écrivez-la dans l'espace sous l'horloge.


1.




2.



3.




4.



5.




6.




7.




8.




9.



10.



11.



12.



Lecture d'une Horloge Analogique (D) Solutions

Nom: _____

Date: _____

Lisez chaque heure et écrivez-la dans l'espace sous l'horloge.

