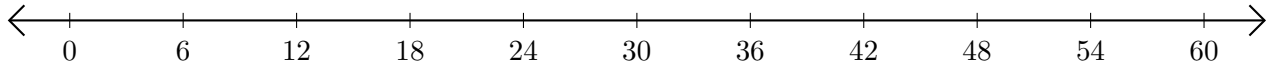


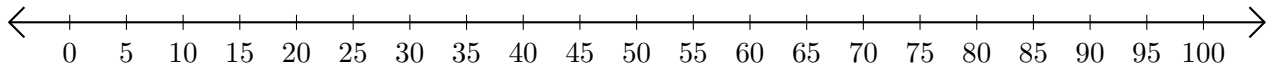
Soustraction de Nombres - Droite Graduée (I)

Utilisez la droite graduée pour calculer chaque différence.

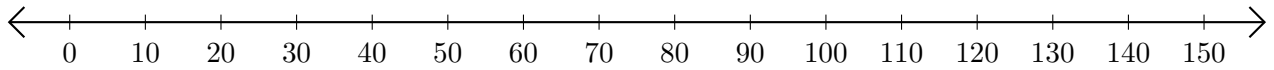
1. $36 - 24 = \underline{\quad}$



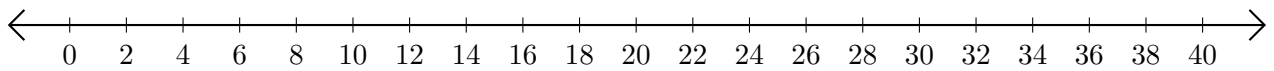
2. $75 - 70 = \underline{\quad}$



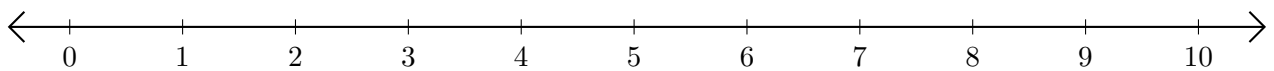
3. $100 - 80 = \underline{\quad}$



4. $34 - 30 = \underline{\quad}$



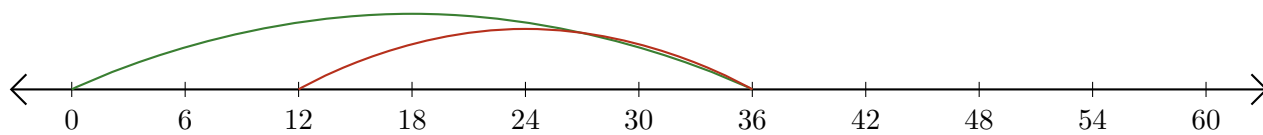
5. $9 - 2 = \underline{\quad}$



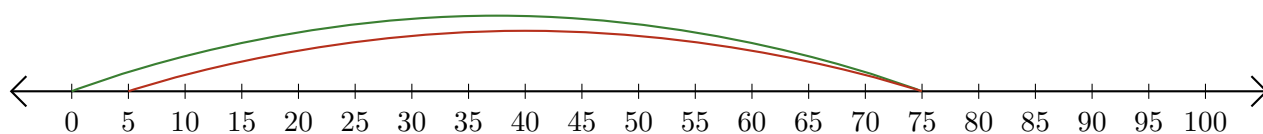
Soustraction de Nombres - Droite Graduée (I) Réponses

Utilisez la droite graduée pour calculer chaque différence.

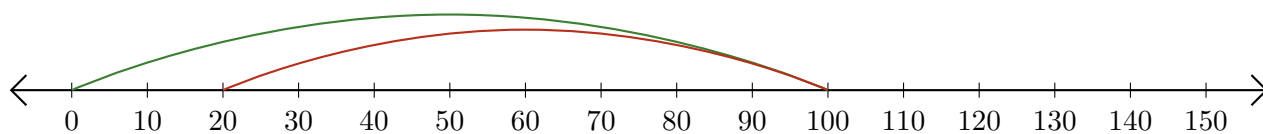
1. $36 - 24 = \underline{12}$



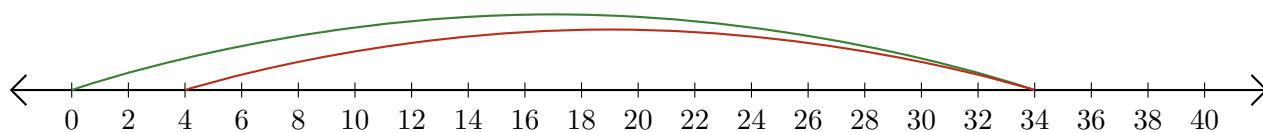
2. $75 - 70 = \underline{5}$



3. $100 - 80 = \underline{20}$



4. $34 - 30 = \underline{4}$



5. $9 - 2 = \underline{7}$

