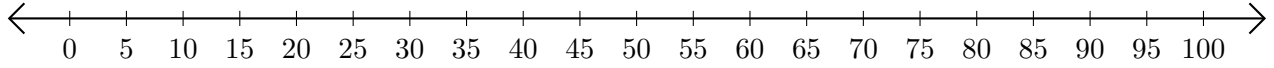


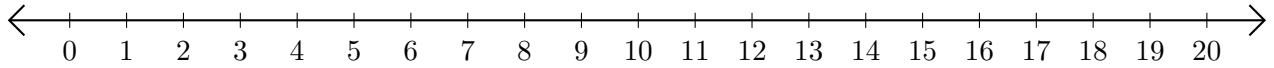
Soustraction de Nombres - Droite Graduée (H)

Utilisez la droite graduée pour calculer chaque différence.

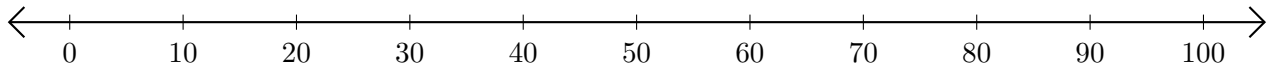
1. $70 - 40 = \underline{\quad}$



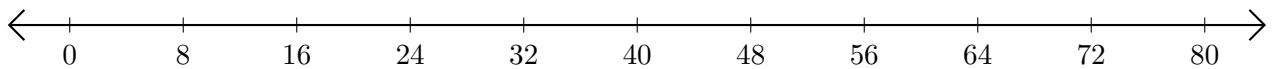
2. $8 - 3 = \underline{\quad}$



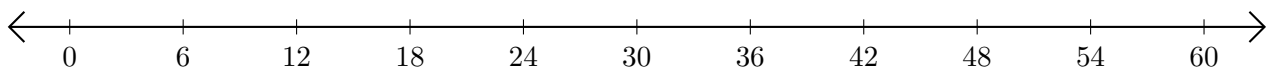
3. $100 - 90 = \underline{\quad}$



4. $72 - 32 = \underline{\quad}$



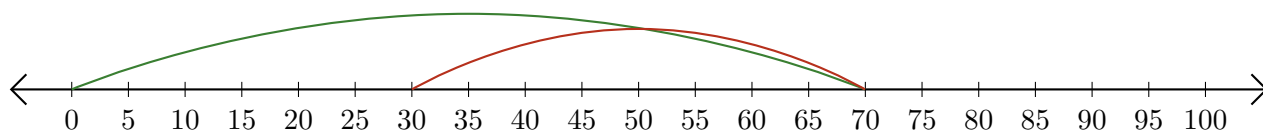
5. $60 - 42 = \underline{\quad}$




Soustraction de Nombres - Droite Graduée (H) Réponses

Utilisez la droite graduée pour calculer chaque différence.

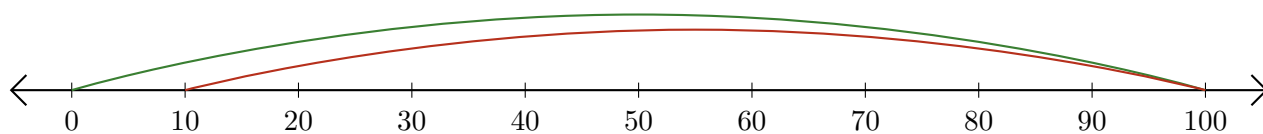
1. $70 - 40 = \underline{30}$



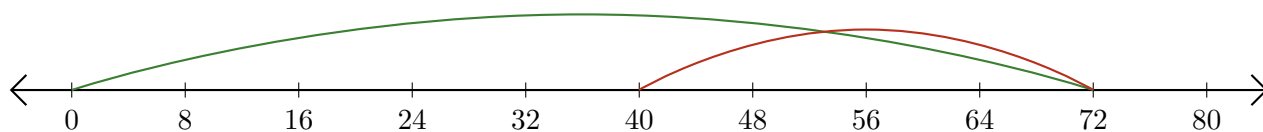
2. $8 - 3 = \underline{5}$



3. $100 - 90 = \underline{10}$



4. $72 - 32 = \underline{40}$



5. $60 - 42 = \underline{18}$

