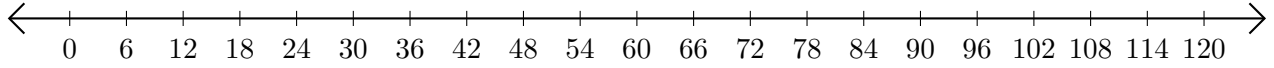


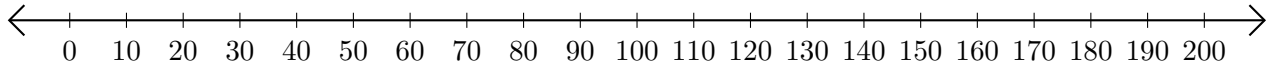
Soustraction de Nombres - Droite Graduée (C)

Utilisez la droite graduée pour calculer chaque différence.

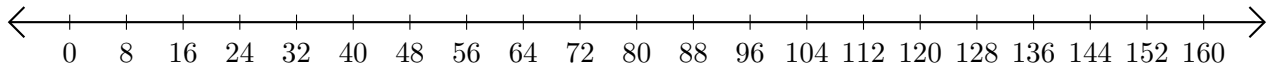
1. $120 - 66 = \underline{\quad}$



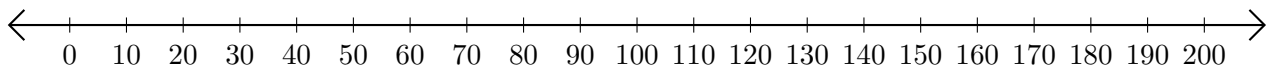
2. $170 - 160 = \underline{\quad}$



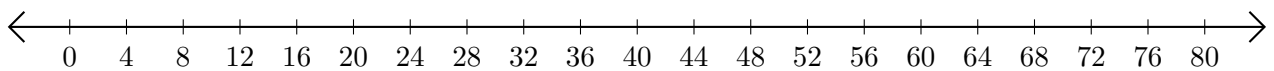
3. $64 - 8 = \underline{\quad}$



4. $110 - 80 = \underline{\quad}$



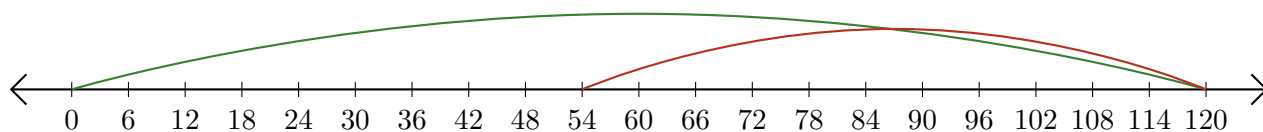
5. $68 - 52 = \underline{\quad}$



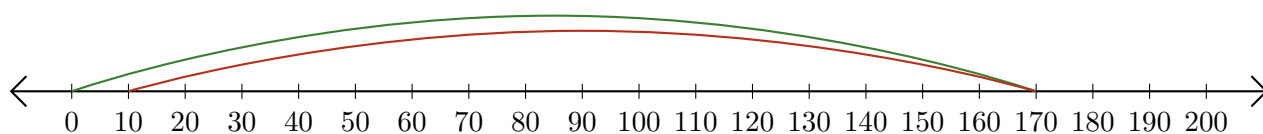
Soustraction de Nombres - Droite Graduée (C) Réponses

Utilisez la droite graduée pour calculer chaque différence.

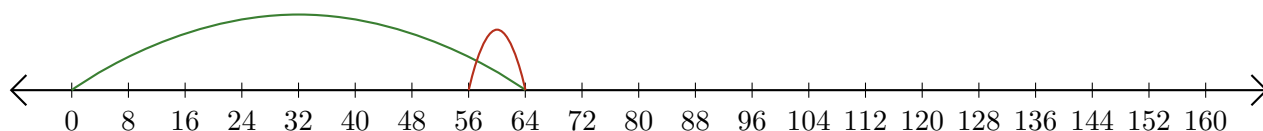
1. $120 - 66 = \underline{54}$



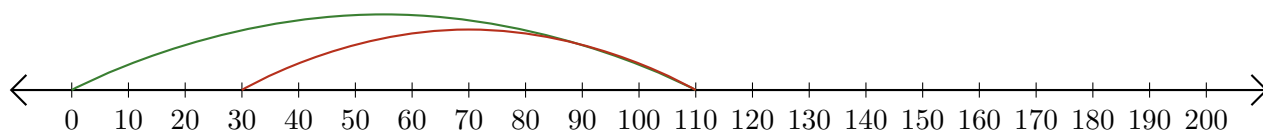
2. $170 - 160 = \underline{10}$



3. $64 - 8 = \underline{56}$



4. $110 - 80 = \underline{30}$



5. $68 - 52 = \underline{16}$

