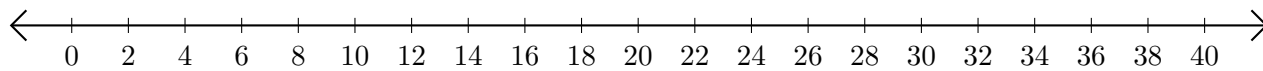


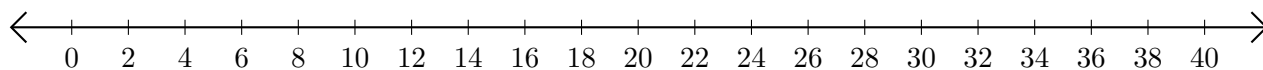
Soustraction de Nombres - Droite Graduée (I)

Utilisez la droite graduée pour calculer chaque différence.

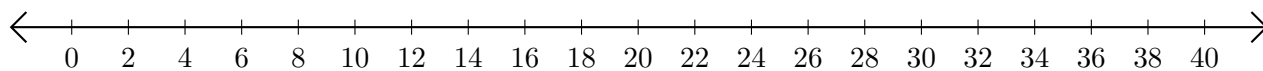
1. $18 - 16 = \underline{\quad}$



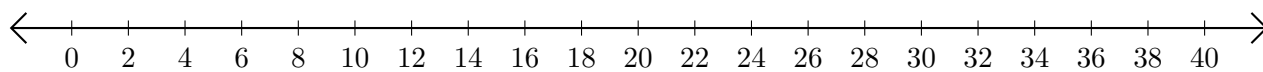
2. $24 - 2 = \underline{\quad}$



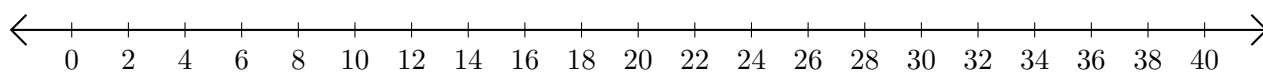
3. $40 - 30 = \underline{\quad}$



4. $28 - 24 = \underline{\quad}$



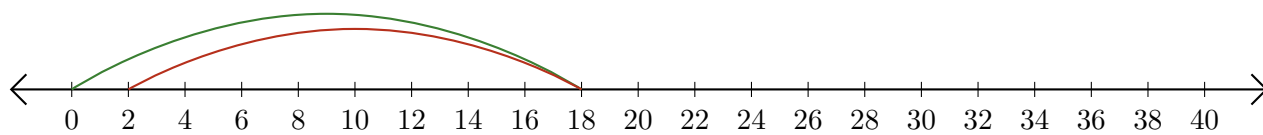
5. $32 - 18 = \underline{\quad}$



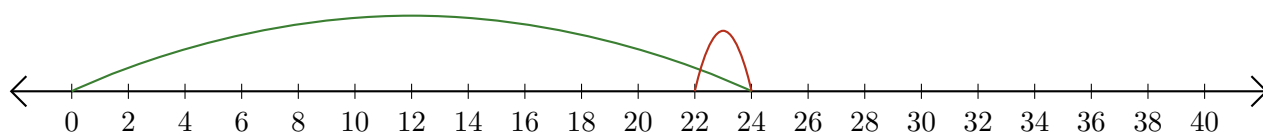
Soustraction de Nombres - Droite Graduée (I) Réponses

Utilisez la droite graduée pour calculer chaque différence.

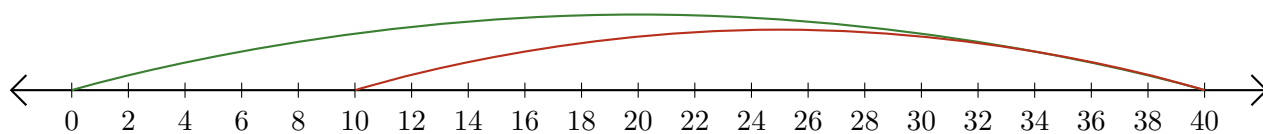
1. $18 - 16 = \underline{2}$



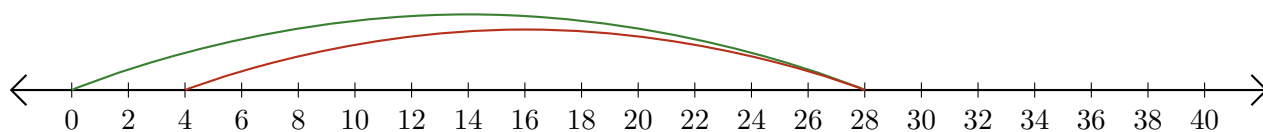
2. $24 - 2 = \underline{22}$



3. $40 - 30 = \underline{10}$



4. $28 - 24 = \underline{4}$



5. $32 - 18 = \underline{14}$

