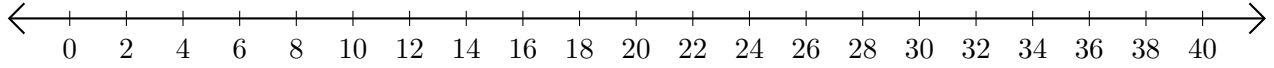


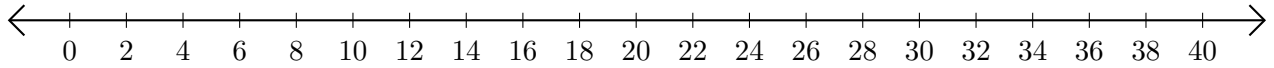
Soustraction de Nombres - Droite Graduée (D)

Utilisez la droite graduée pour calculer chaque différence.

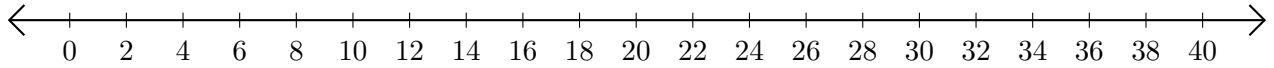
1. $34 - 8 = \underline{\quad}$



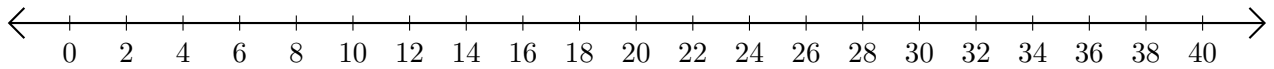
2. $22 - 10 = \underline{\quad}$



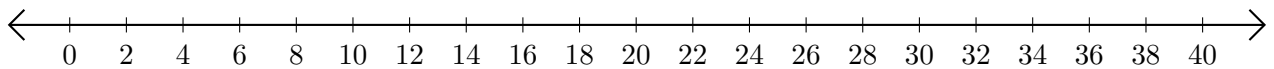
3. $40 - 38 = \underline{\quad}$



4. $40 - 28 = \underline{\quad}$



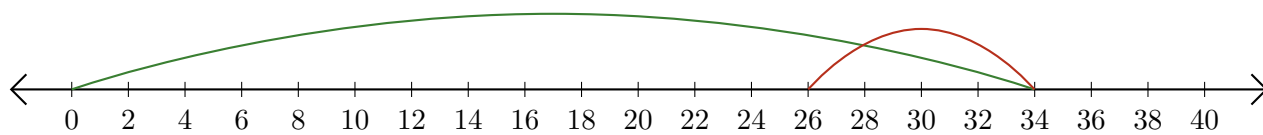
5. $40 - 20 = \underline{\quad}$



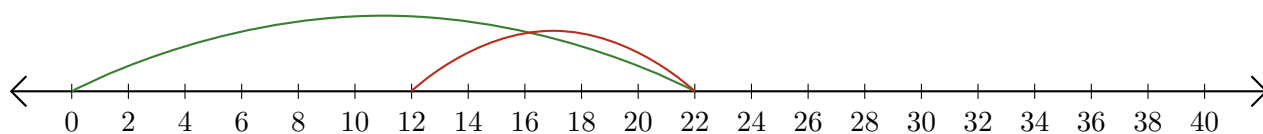
Soustraction de Nombres - Droite Graduée (D) Réponses

Utilisez la droite graduée pour calculer chaque différence.

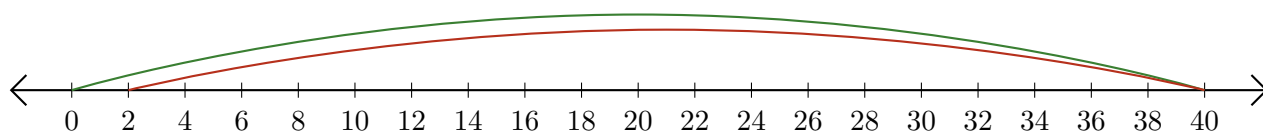
1. $34 - 8 = \underline{26}$



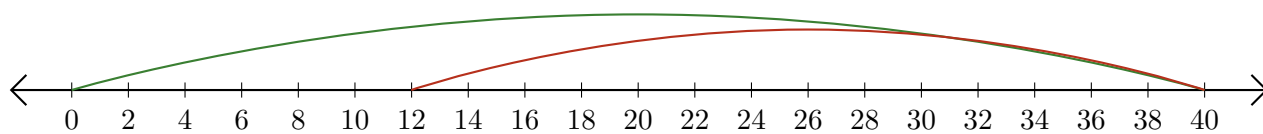
2. $22 - 10 = \underline{12}$



3. $40 - 38 = \underline{2}$



4. $40 - 28 = \underline{12}$



5. $40 - 20 = \underline{20}$

