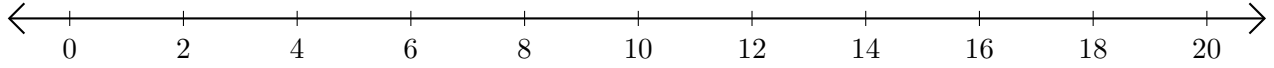


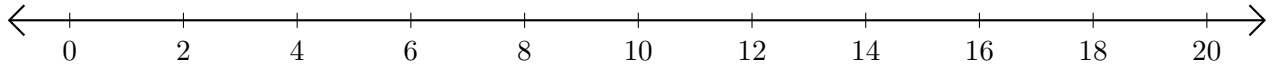
# Soustraction de Nombres - Droite Graduée (F)

Utilisez la droite graduée pour calculer chaque différence.

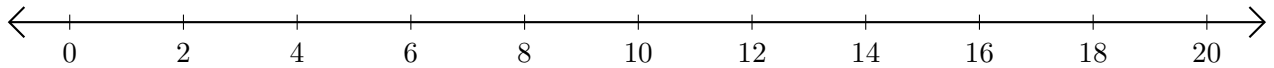
1.  $20 - 14 = \underline{\quad}$



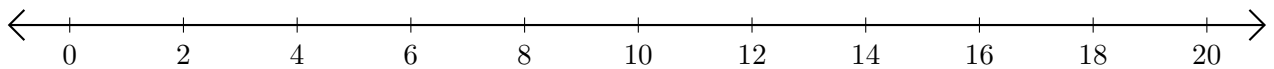
2.  $18 - 16 = \underline{\quad}$



3.  $16 - 12 = \underline{\quad}$



4.  $16 - 6 = \underline{\quad}$



5.  $8 - 4 = \underline{\quad}$

