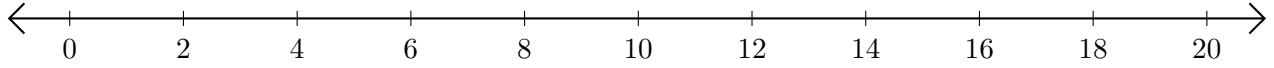


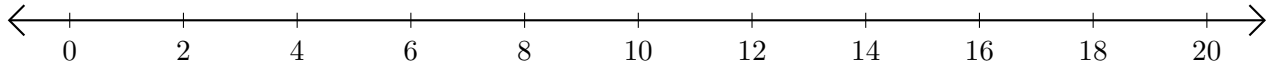
Soustraction de Nombres - Droite Graduée (E)

Utilisez la droite graduée pour calculer chaque différence.

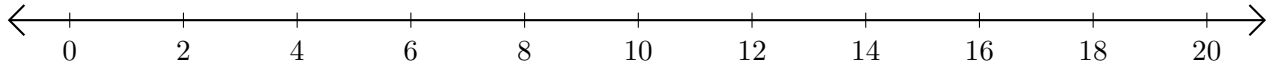
1. $16 - 14 = \underline{\quad}$



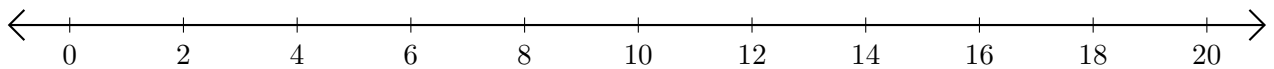
2. $12 - 6 = \underline{\quad}$



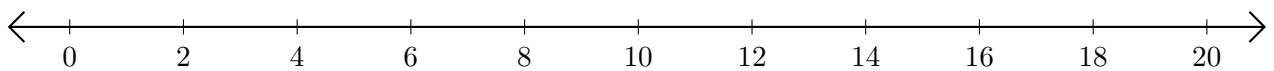
3. $18 - 12 = \underline{\quad}$



4. $18 - 10 = \underline{\quad}$



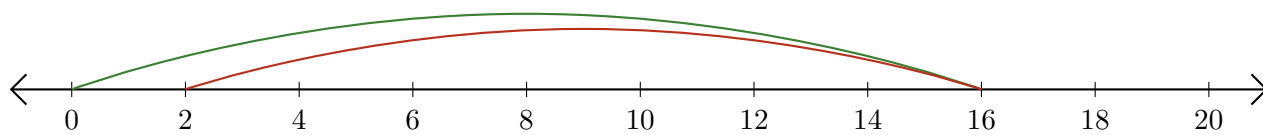
5. $16 - 8 = \underline{\quad}$



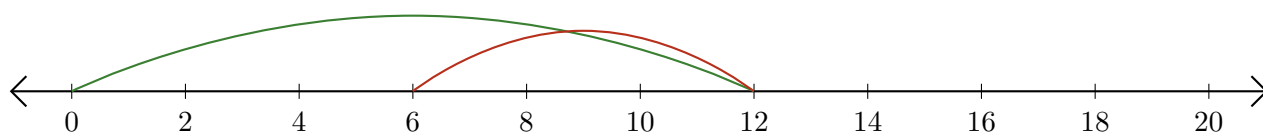
Soustraction de Nombres - Droite Graduée (E) Réponses

Utilisez la droite graduée pour calculer chaque différence.

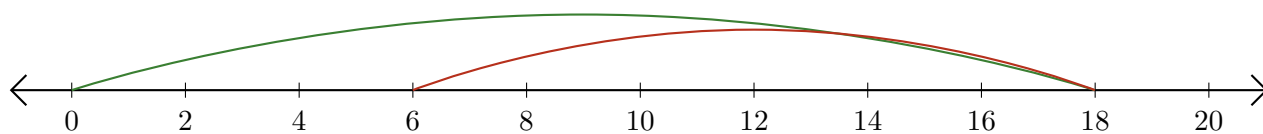
1. $16 - 14 = \underline{2}$



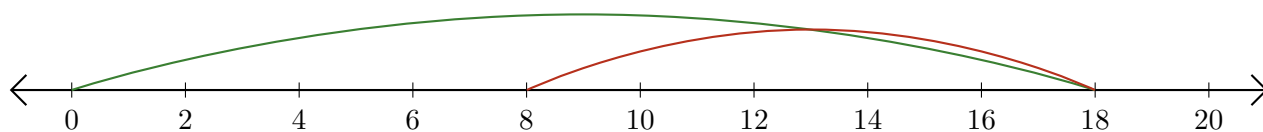
2. $12 - 6 = \underline{6}$



3. $18 - 12 = \underline{6}$



4. $18 - 10 = \underline{8}$



5. $16 - 8 = \underline{8}$

