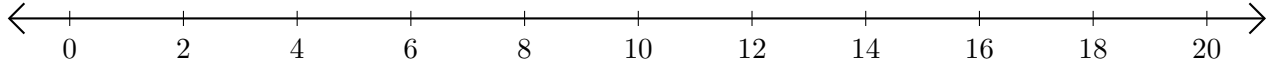


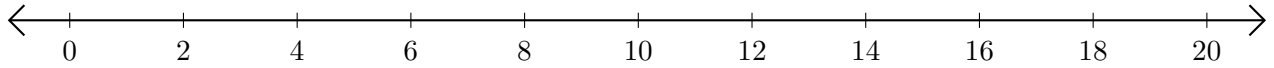
# Soustraction de Nombres - Droite Graduée (A)

Utilisez la droite graduée pour calculer chaque différence.

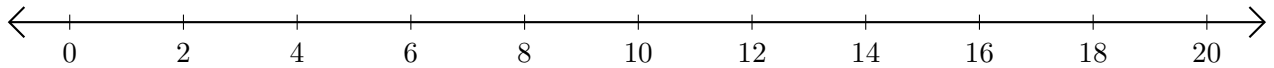
1.  $20 - 14 = \underline{\quad}$



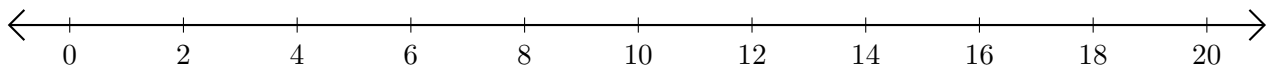
2.  $16 - 12 = \underline{\quad}$



3.  $12 - 10 = \underline{\quad}$



4.  $18 - 8 = \underline{\quad}$



5.  $20 - 6 = \underline{\quad}$

