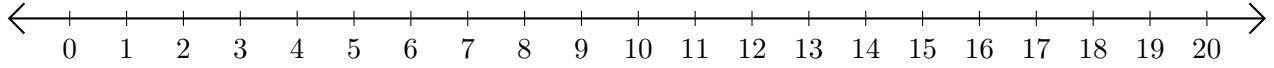


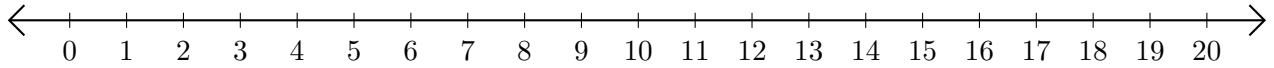
Soustraction de Nombres - Droite Graduée (I)

Utilisez la droite graduée pour calculer chaque différence.

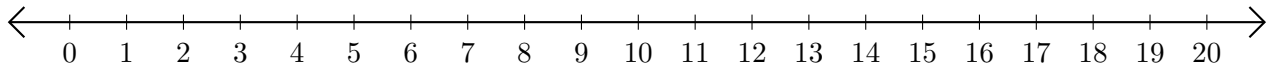
1. $16 - 15 = \underline{\quad}$



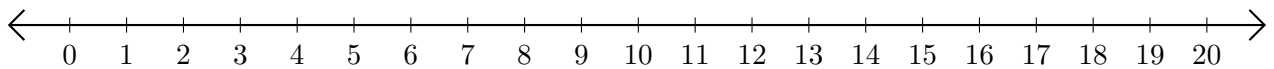
2. $19 - 18 = \underline{\quad}$



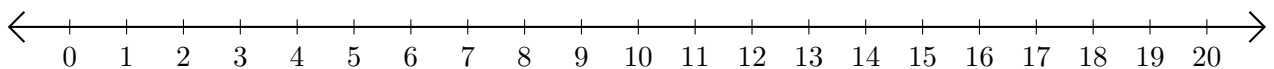
3. $11 - 6 = \underline{\quad}$



4. $15 - 3 = \underline{\quad}$



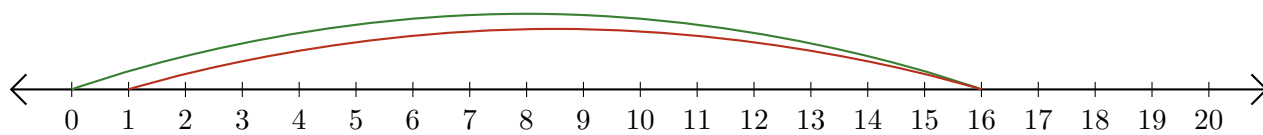
5. $3 - 2 = \underline{\quad}$



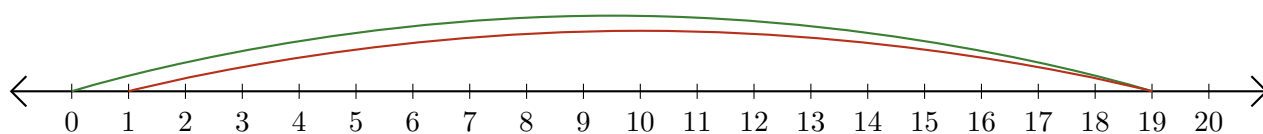
Soustraction de Nombres - Droite Graduée (I) Réponses

Utilisez la droite graduée pour calculer chaque différence.

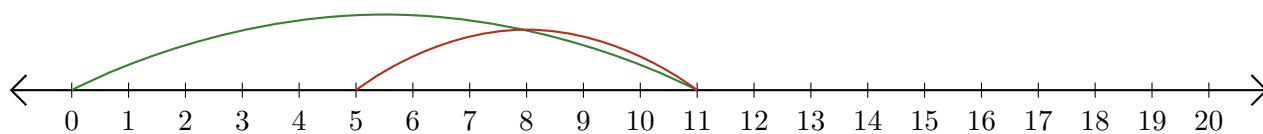
1. $16 - 15 = \underline{1}$



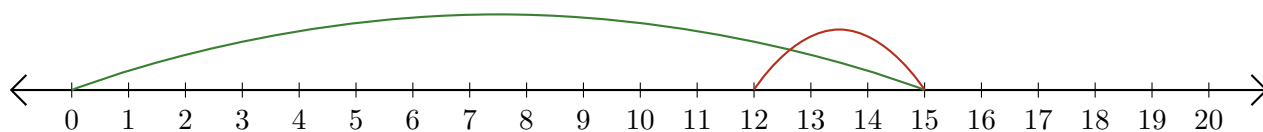
2. $19 - 18 = \underline{1}$



3. $11 - 6 = \underline{5}$



4. $15 - 3 = \underline{12}$



5. $3 - 2 = \underline{1}$

