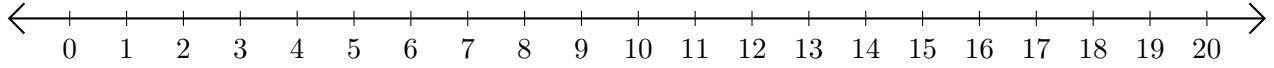


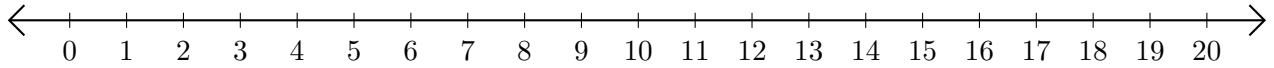
# Soustraction de Nombres - Droite Graduée (H)

Utilisez la droite graduée pour calculer chaque différence.

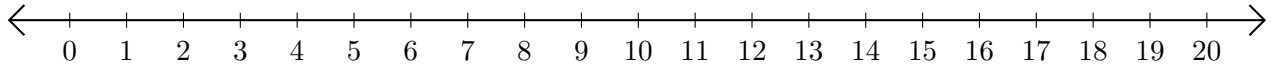
1.  $15 - 11 = \underline{\quad}$



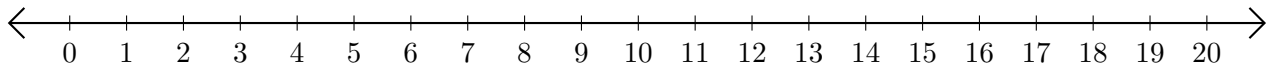
2.  $18 - 17 = \underline{\quad}$



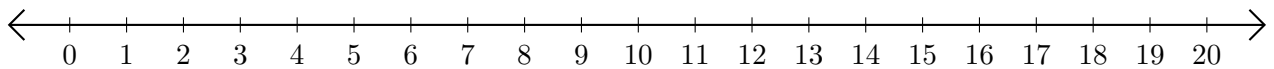
3.  $16 - 15 = \underline{\quad}$



4.  $9 - 8 = \underline{\quad}$



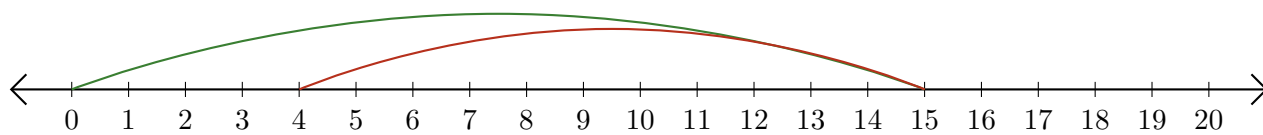
5.  $17 - 16 = \underline{\quad}$



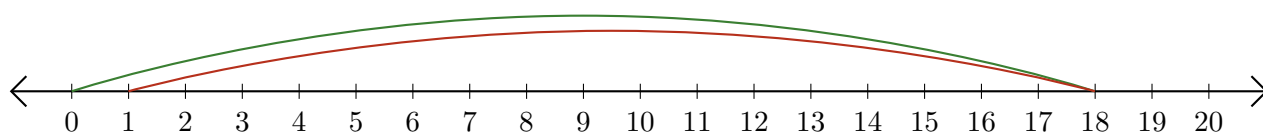
# Soustraction de Nombres - Droite Graduée (H) Réponses

Utilisez la droite graduée pour calculer chaque différence.

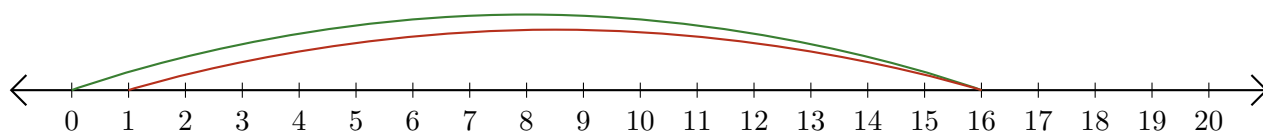
1.  $15 - 11 = \underline{4}$



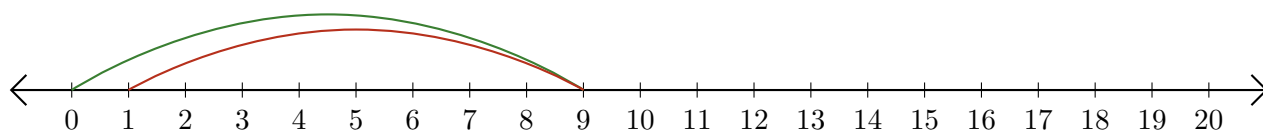
2.  $18 - 17 = \underline{1}$



3.  $16 - 15 = \underline{1}$



4.  $9 - 8 = \underline{1}$



5.  $17 - 16 = \underline{1}$

