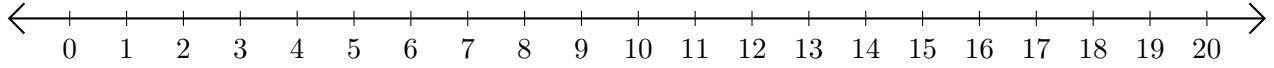


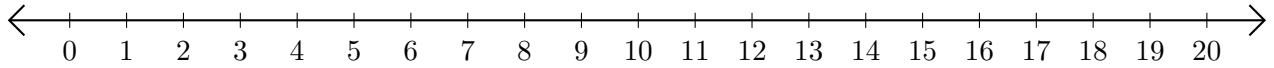
# Soustraction de Nombres - Droite Graduée (G)

Utilisez la droite graduée pour calculer chaque différence.

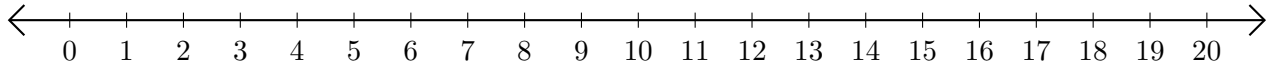
1.  $13 - 6 = \underline{\quad}$



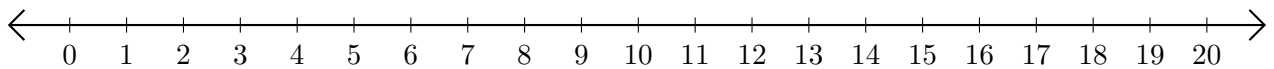
2.  $20 - 17 = \underline{\quad}$



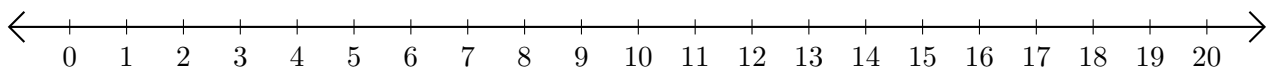
3.  $6 - 5 = \underline{\quad}$



4.  $19 - 12 = \underline{\quad}$



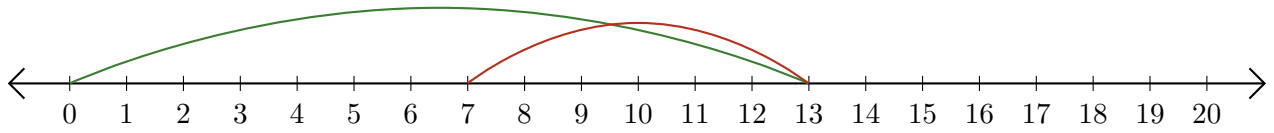
5.  $14 - 10 = \underline{\quad}$



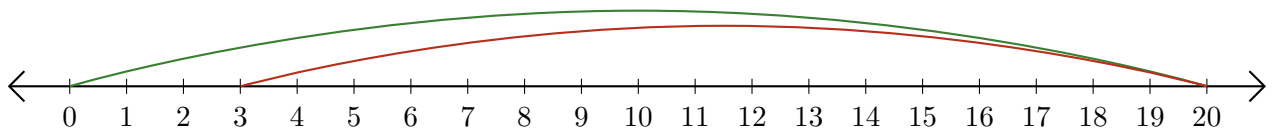
# Soustraction de Nombres - Droite Graduée (G) Réponses

Utilisez la droite graduée pour calculer chaque différence.

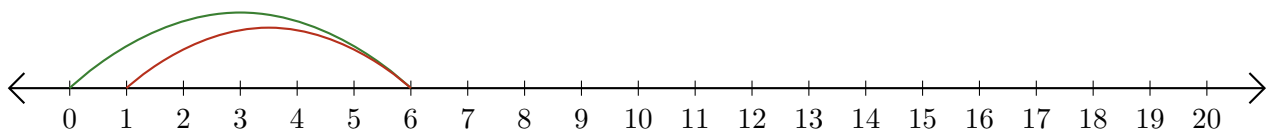
1.  $13 - 6 = \underline{7}$



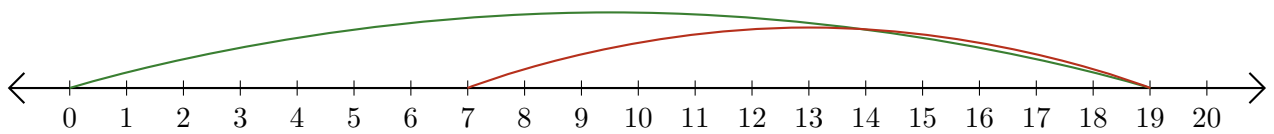
2.  $20 - 17 = \underline{3}$



3.  $6 - 5 = \underline{1}$



4.  $19 - 12 = \underline{7}$



5.  $14 - 10 = \underline{4}$

