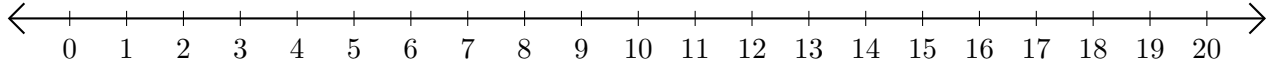


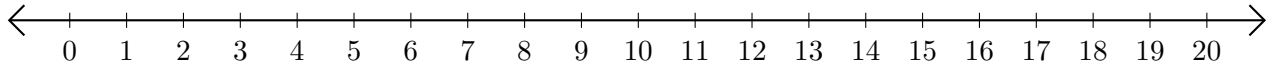
Soustraction de Nombres - Droite Graduée (D)

Utilisez la droite graduée pour calculer chaque différence.

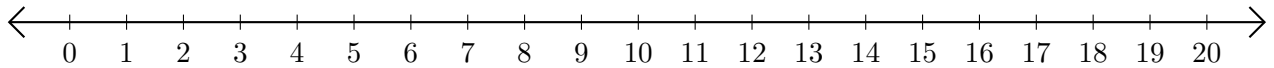
1. $20 - 6 = \underline{\quad}$



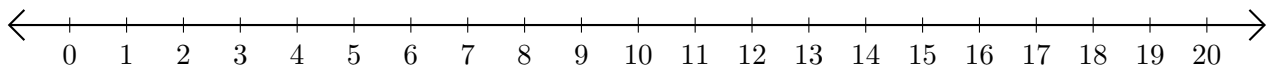
2. $17 - 16 = \underline{\quad}$



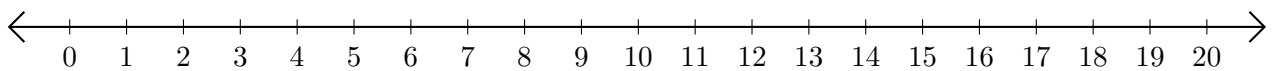
3. $7 - 2 = \underline{\quad}$



4. $18 - 14 = \underline{\quad}$



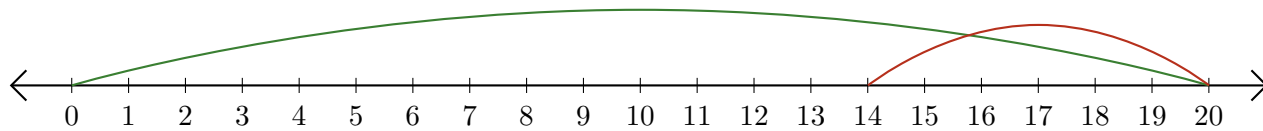
5. $18 - 4 = \underline{\quad}$



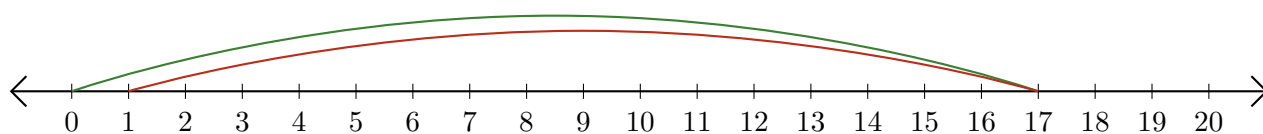
Soustraction de Nombres - Droite Graduée (D) Réponses

Utilisez la droite graduée pour calculer chaque différence.


1. $20 - 6 = \underline{14}$



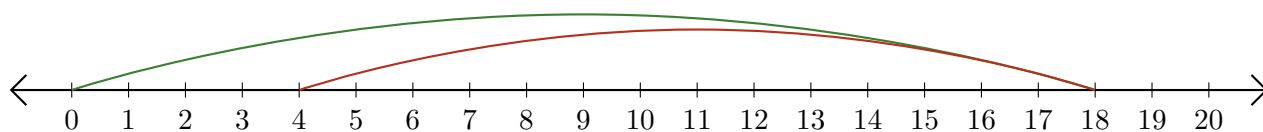
2. $17 - 16 = \underline{1}$



3. $7 - 2 = \underline{5}$



4. $18 - 14 = \underline{4}$



5. $18 - 4 = \underline{14}$

