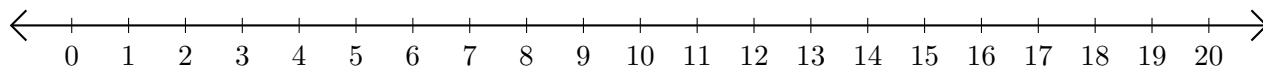


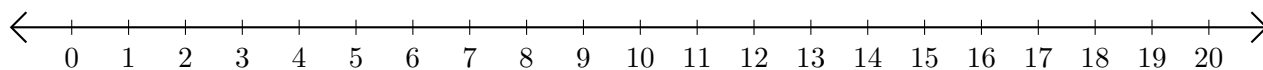
Soustraction de Nombres - Droite Graduée (C)

Utilisez la droite graduée pour calculer chaque différence.

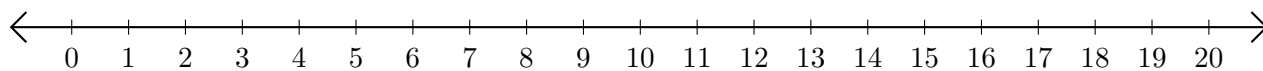
1. $13 - 3 = \underline{\quad}$



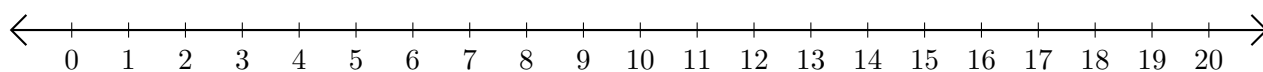
2. $14 - 10 = \underline{\quad}$



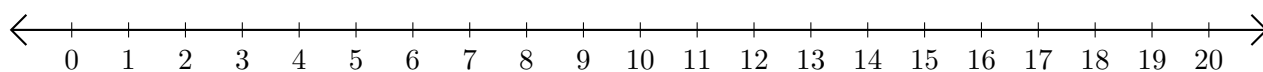
3. $19 - 11 = \underline{\quad}$



4. $19 - 14 = \underline{\quad}$



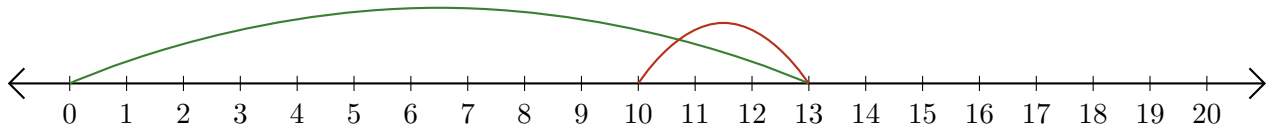
5. $19 - 18 = \underline{\quad}$



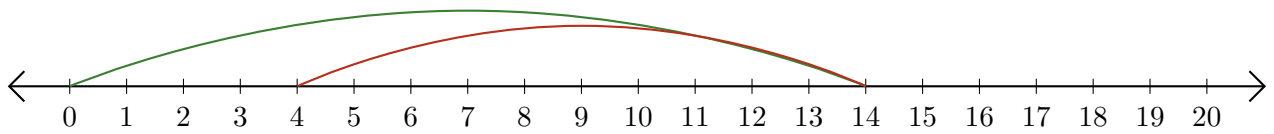
Soustraction de Nombres - Droite Graduée (C) Réponses

Utilisez la droite graduée pour calculer chaque différence.

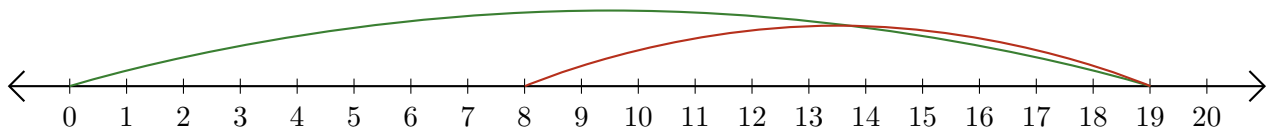
1. $13 - 3 = \underline{10}$



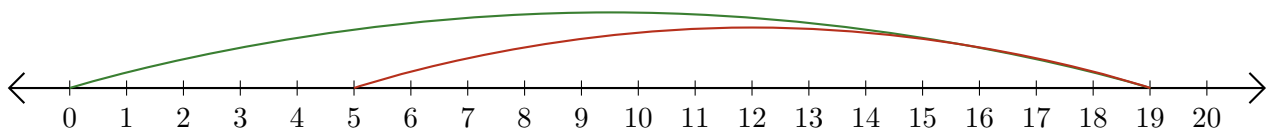
2. $14 - 10 = \underline{4}$



3. $19 - 11 = \underline{8}$



4. $19 - 14 = \underline{5}$



5. $19 - 18 = \underline{1}$

