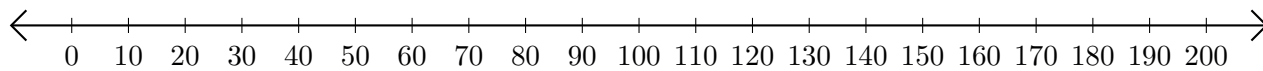


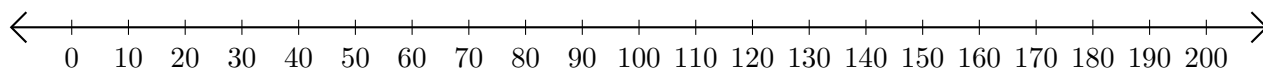
## Soustraction de Nombres - Droite Graduée (G)

Utilisez la droite graduée pour calculer chaque différence.

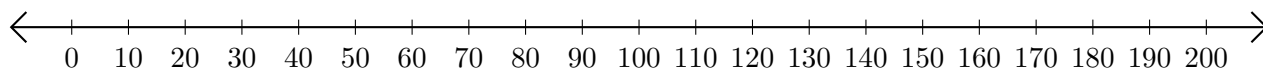
1.  $200 - 190 = \underline{\quad}$



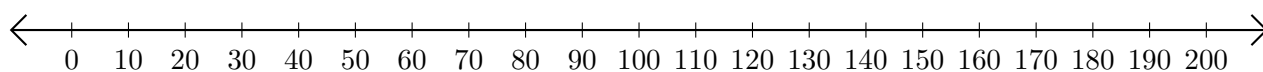
2.  $190 - 80 = \underline{\quad}$



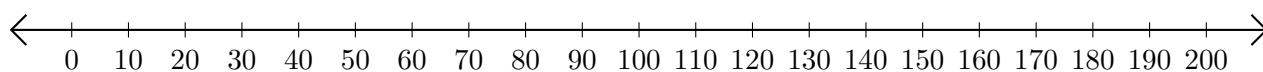
3.  $170 - 150 = \underline{\quad}$



4.  $200 - 180 = \underline{\quad}$



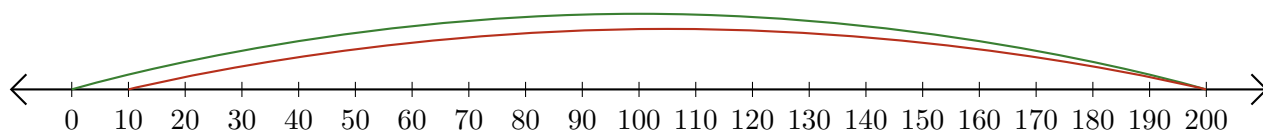
5.  $150 - 140 = \underline{\quad}$



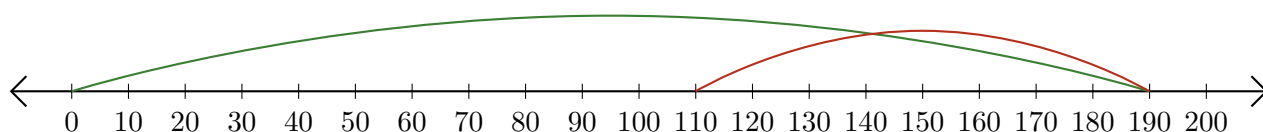
# Soustraction de Nombres - Droite Graduée (G) Réponses

Utilisez la droite graduée pour calculer chaque différence.

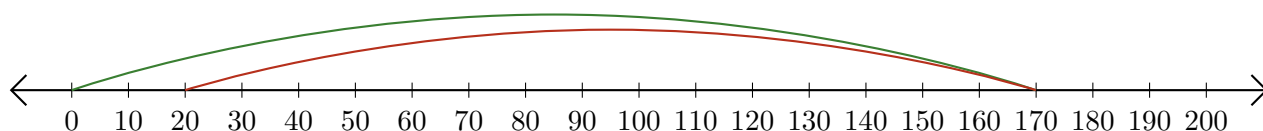
1.  $200 - 190 = \underline{10}$



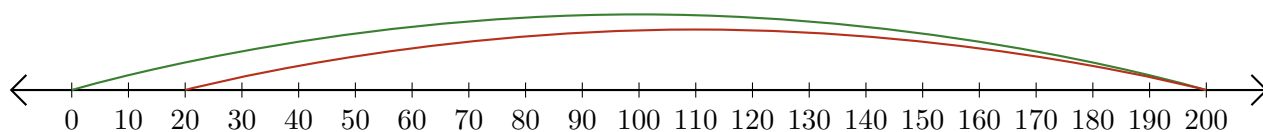
2.  $190 - 80 = \underline{110}$



3.  $170 - 150 = \underline{20}$



4.  $200 - 180 = \underline{20}$



5.  $150 - 140 = \underline{10}$

