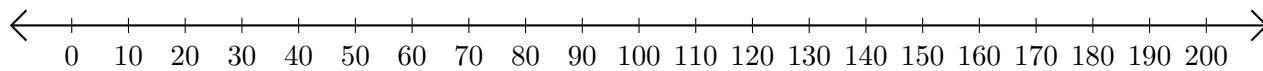


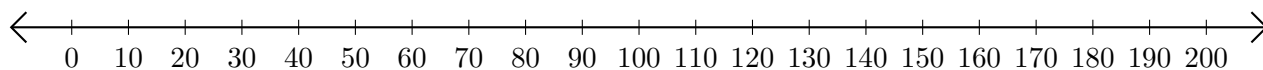
Soustraction de Nombres - Droite Graduée (E)

Utilisez la droite graduée pour calculer chaque différence.

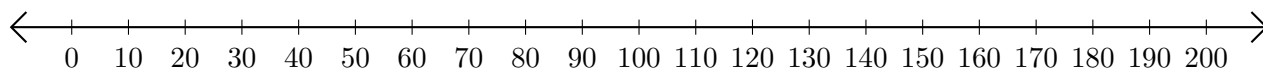
1. $70 - 20 = \underline{\quad}$



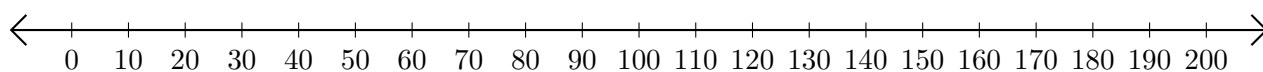
2. $140 - 120 = \underline{\quad}$



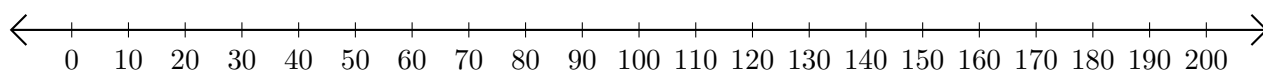
3. $190 - 160 = \underline{\quad}$



4. $130 - 10 = \underline{\quad}$



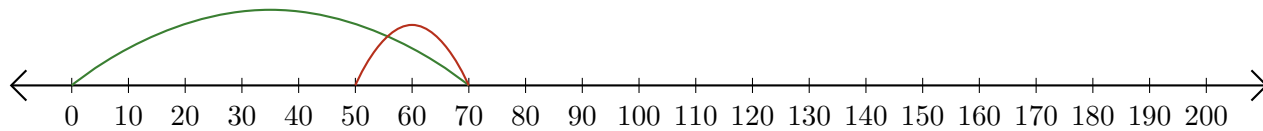
5. $170 - 130 = \underline{\quad}$



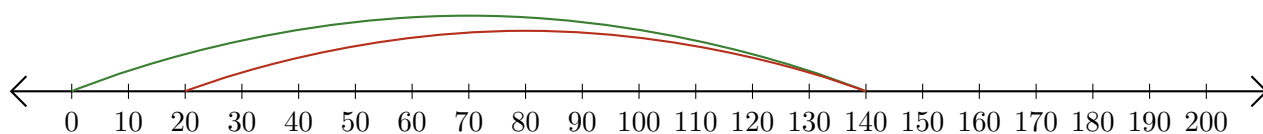
Soustraction de Nombres - Droite Graduée (E) Réponses

Utilisez la droite graduée pour calculer chaque différence.

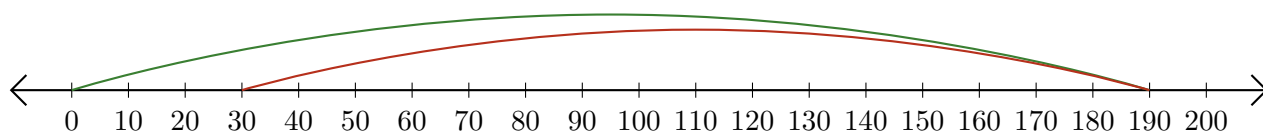
1. $70 - 20 = \underline{50}$



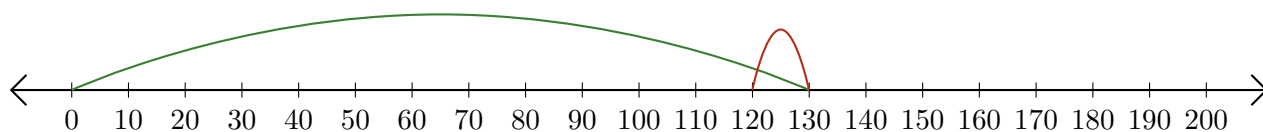
2. $140 - 120 = \underline{20}$



3. $190 - 160 = \underline{30}$



4. $130 - 10 = \underline{120}$



5. $170 - 130 = \underline{40}$

