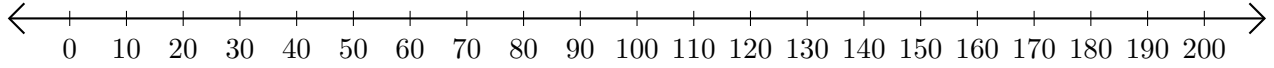


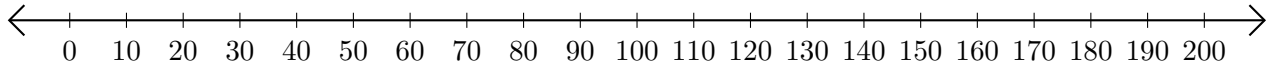
## Soustraction de Nombres - Droite Graduée (D)

Utilisez la droite graduée pour calculer chaque différence.

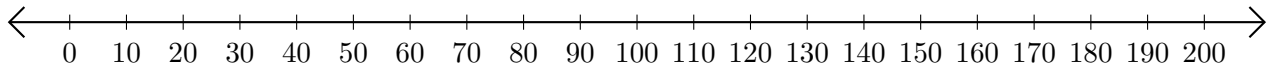
1.  $110 - 90 = \underline{\quad}$



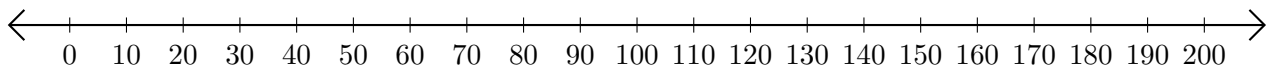
2.  $180 - 60 = \underline{\quad}$



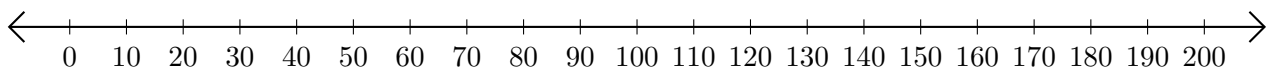
3.  $100 - 10 = \underline{\quad}$



4.  $180 - 150 = \underline{\quad}$



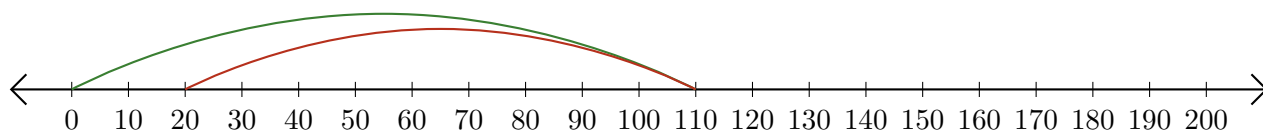
5.  $200 - 170 = \underline{\quad}$



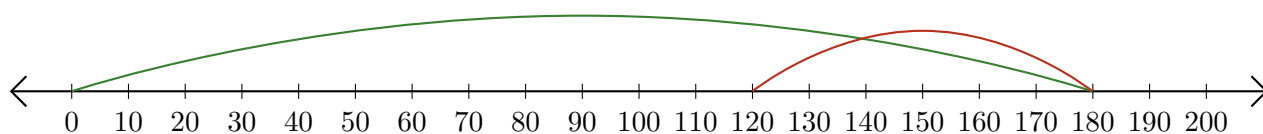
# Soustraction de Nombres - Droite Graduée (D) Réponses

Utilisez la droite graduée pour calculer chaque différence.

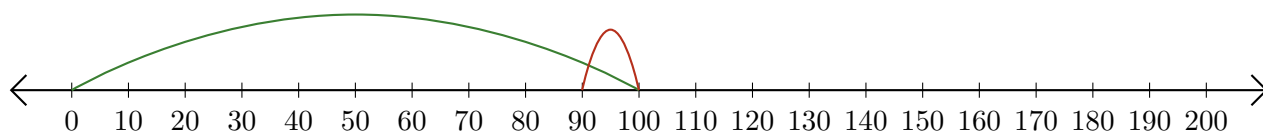
1.  $110 - 90 = \underline{20}$



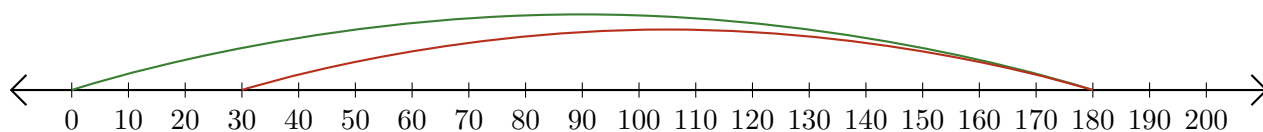
2.  $180 - 60 = \underline{120}$



3.  $100 - 10 = \underline{90}$



4.  $180 - 150 = \underline{30}$



5.  $200 - 170 = \underline{30}$

