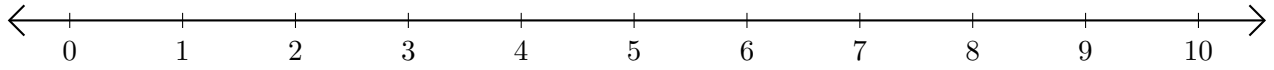


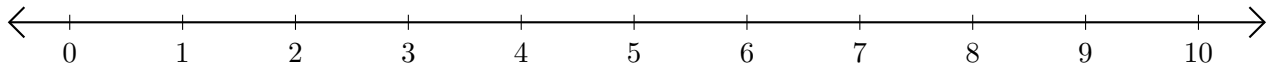
Soustraction de Nombres - Droite Graduée (E)

Utilisez la droite graduée pour calculer chaque différence.

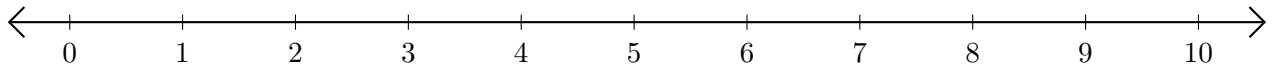
1. $6 - 5 = \underline{\quad}$



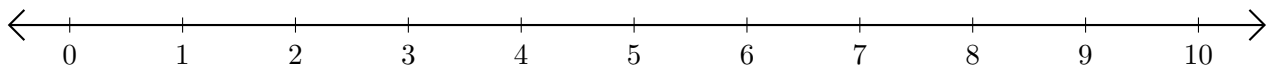
2. $8 - 6 = \underline{\quad}$



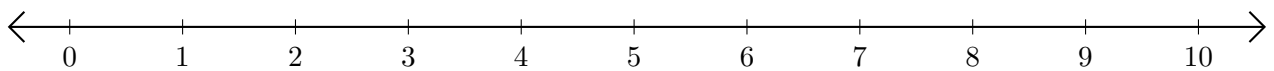
3. $10 - 7 = \underline{\quad}$



4. $4 - 1 = \underline{\quad}$



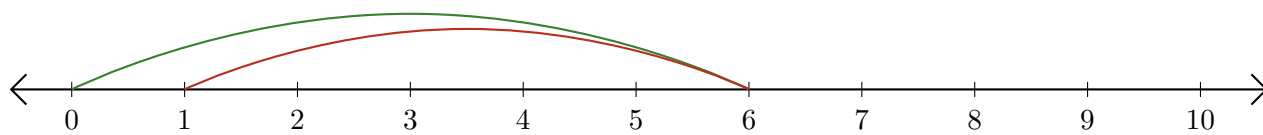
5. $6 - 4 = \underline{\quad}$



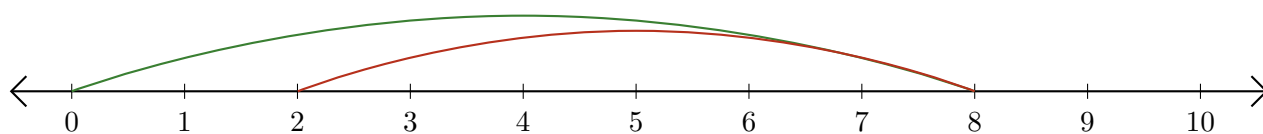
Soustraction de Nombres - Droite Graduée (E) Réponses

Utilisez la droite graduée pour calculer chaque différence.

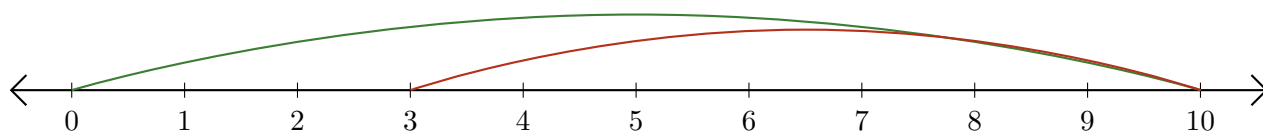
1. $6 - 5 = \underline{1}$



2. $8 - 6 = \underline{2}$



3. $10 - 7 = \underline{3}$



4. $4 - 1 = \underline{3}$



5. $6 - 4 = \underline{2}$

