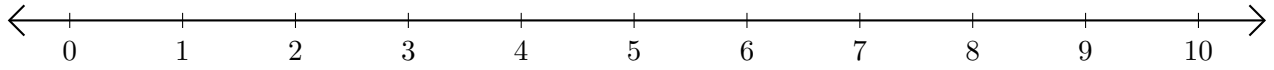


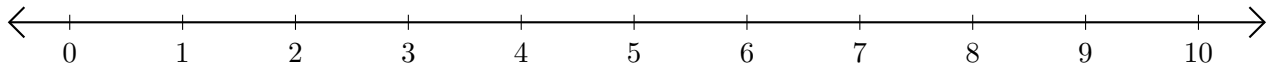
Soustraction de Nombres - Droite Graduée (C)

Utilisez la droite graduée pour calculer chaque différence.

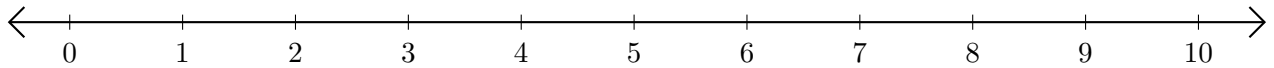
1. $9 - 8 = \underline{\quad}$



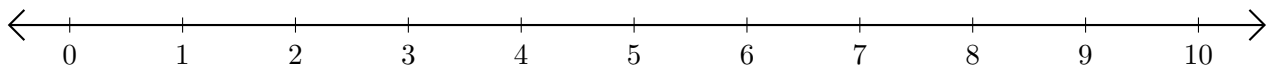
2. $10 - 9 = \underline{\quad}$



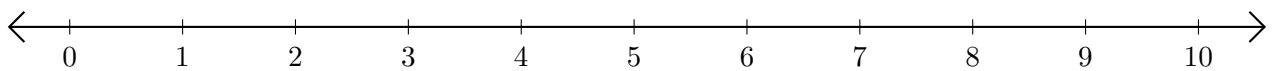
3. $6 - 3 = \underline{\quad}$



4. $7 - 1 = \underline{\quad}$



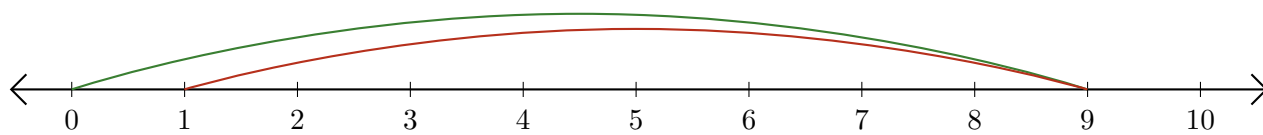
5. $9 - 2 = \underline{\quad}$



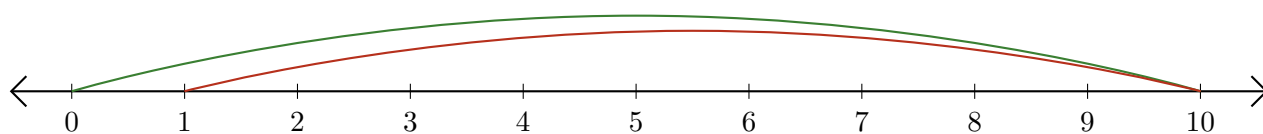
Soustraction de Nombres - Droite Graduée (C) Réponses

Utilisez la droite graduée pour calculer chaque différence.

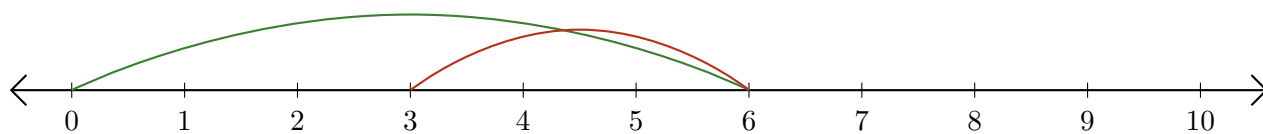
1. $9 - 8 = \underline{1}$



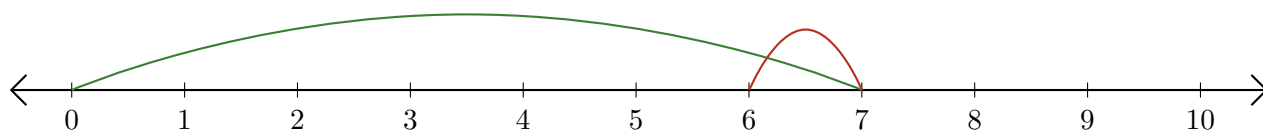
2. $10 - 9 = \underline{1}$



3. $6 - 3 = \underline{3}$



4. $7 - 1 = \underline{6}$



5. $9 - 2 = \underline{7}$

