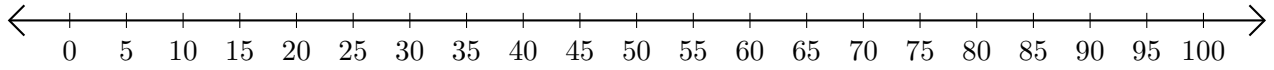


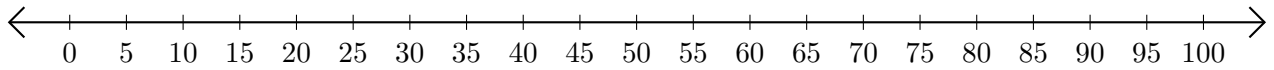
Soustraction de Nombres - Droite Graduée (G)

Utilisez la droite graduée pour calculer chaque différence.

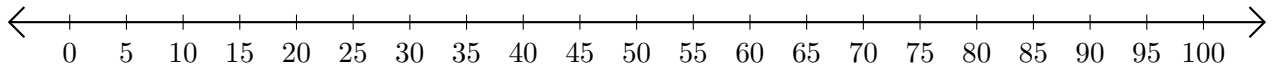
1. $30 - 20 = \underline{\quad}$



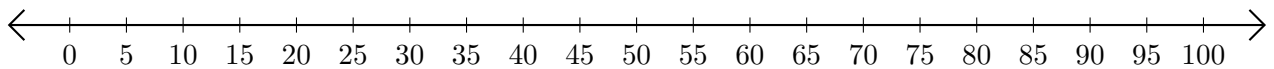
2. $90 - 80 = \underline{\quad}$



3. $70 - 35 = \underline{\quad}$



4. $100 - 95 = \underline{\quad}$



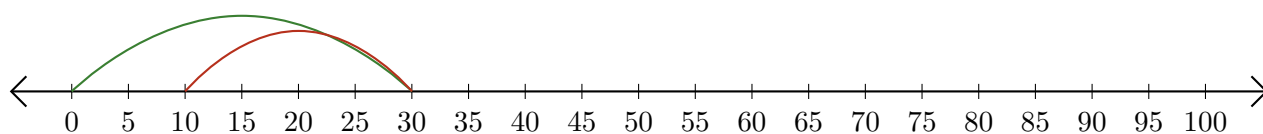
5. $100 - 60 = \underline{\quad}$



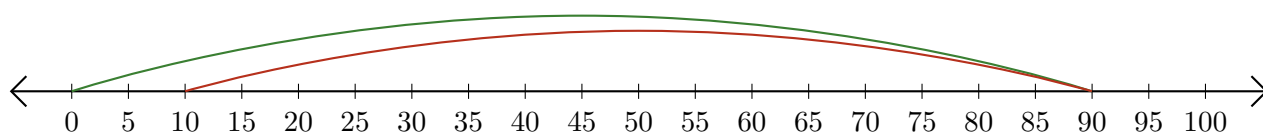
Soustraction de Nombres - Droite Graduée (G) Réponses

Utilisez la droite graduée pour calculer chaque différence.

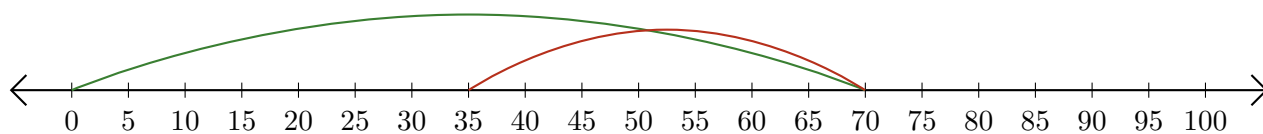
1. $30 - 20 = \underline{10}$



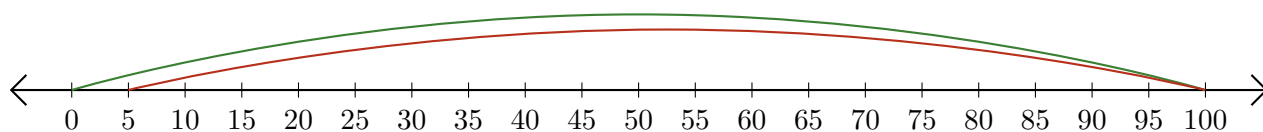
2. $90 - 80 = \underline{10}$



3. $70 - 35 = \underline{35}$



4. $100 - 95 = \underline{5}$



5. $100 - 60 = \underline{40}$

