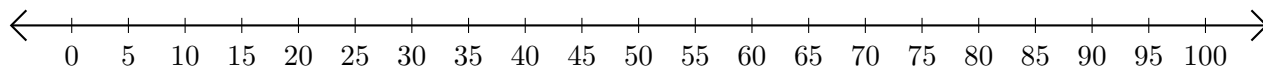


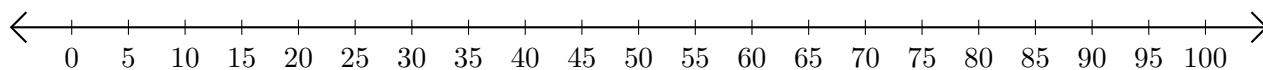
Soustraction de Nombres - Droite Graduée (E)

Utilisez la droite graduée pour calculer chaque différence.

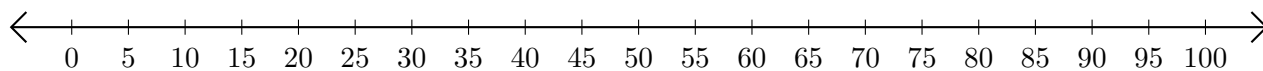
1. $95 - 5 = \underline{\quad}$



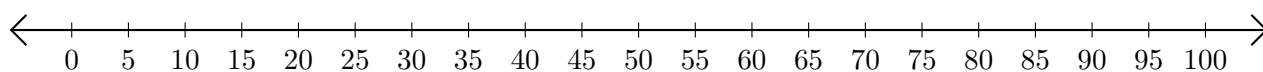
2. $80 - 55 = \underline{\quad}$



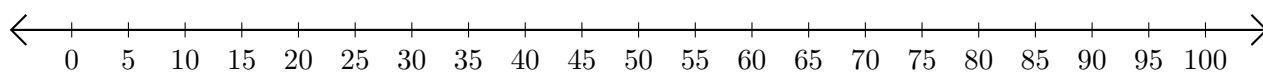
3. $95 - 90 = \underline{\quad}$



4. $70 - 30 = \underline{\quad}$



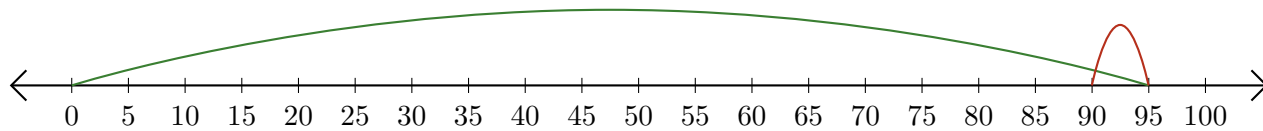
5. $100 - 95 = \underline{\quad}$



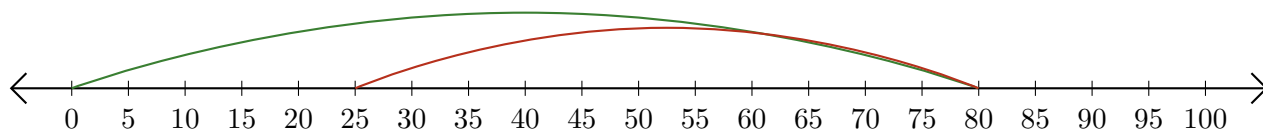
Soustraction de Nombres - Droite Graduée (E) Réponses

Utilisez la droite graduée pour calculer chaque différence.

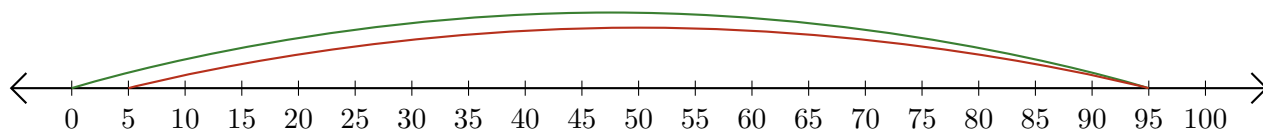
1. $95 - 5 = \underline{90}$



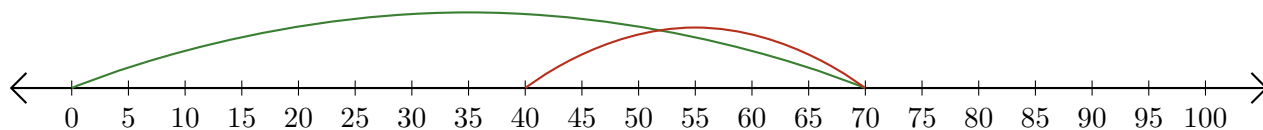
2. $80 - 55 = \underline{25}$



3. $95 - 90 = \underline{5}$



4. $70 - 30 = \underline{40}$



5. $100 - 95 = \underline{5}$

