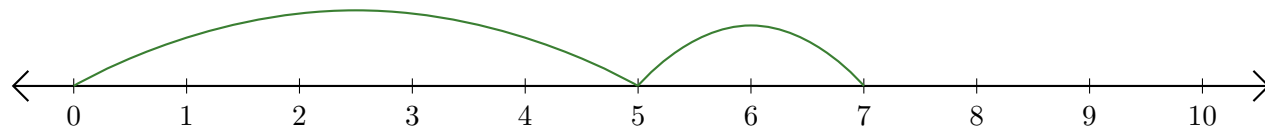


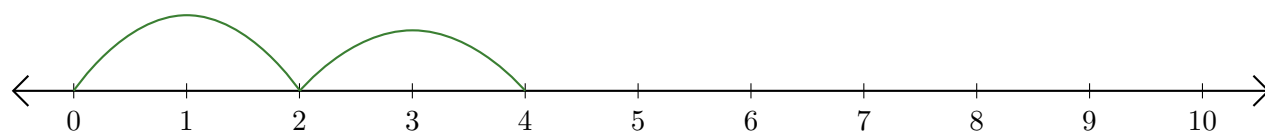
Lecture de Nombres sur une Droite Graduée (F)

Déterminez les termes et la somme (résultat) représentés sur chaque droite graduée.

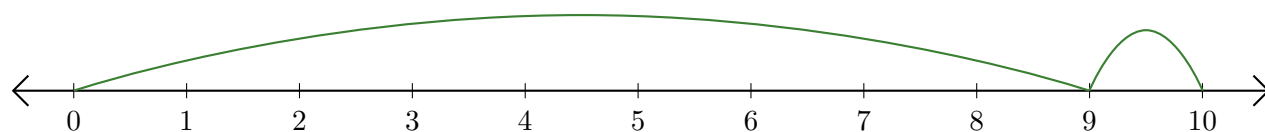
1. $\underline{\quad} + \underline{\quad} = \underline{\quad}$



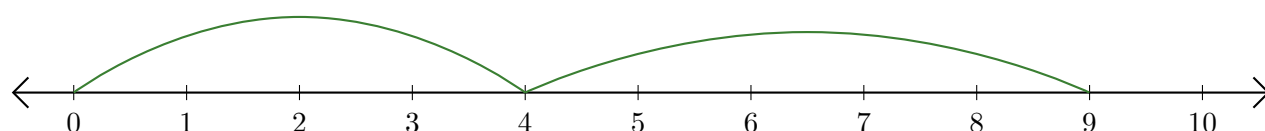
2. $\underline{\quad} + \underline{\quad} = \underline{\quad}$



3. $\underline{\quad} + \underline{\quad} = \underline{\quad}$



4. $\underline{\quad} + \underline{\quad} = \underline{\quad}$



5. $\underline{\quad} + \underline{\quad} = \underline{\quad}$

