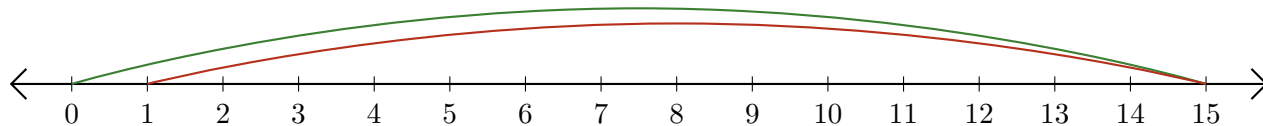


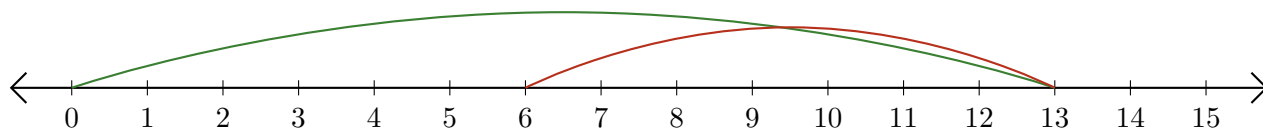
Lecture de Nombres sur une Droite Graduée (F)

Déterminez les termes et la différence (résultat) représentés sur chaque droite graduée.

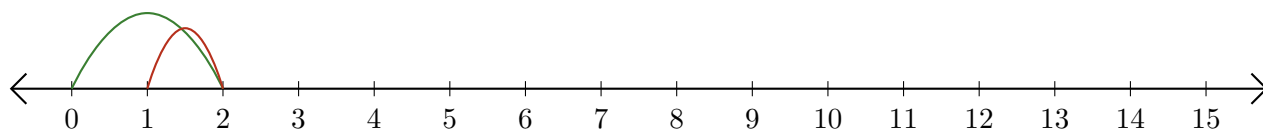
1. $\underline{\quad} - \underline{\quad} = \underline{\quad}$



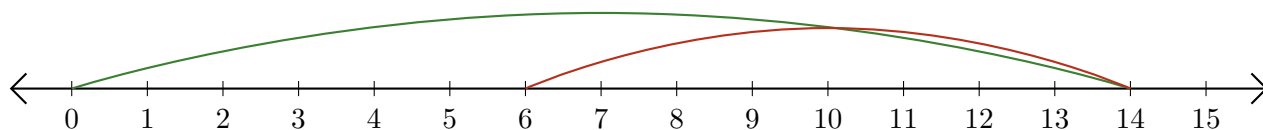
2. $\underline{\quad} - \underline{\quad} = \underline{\quad}$



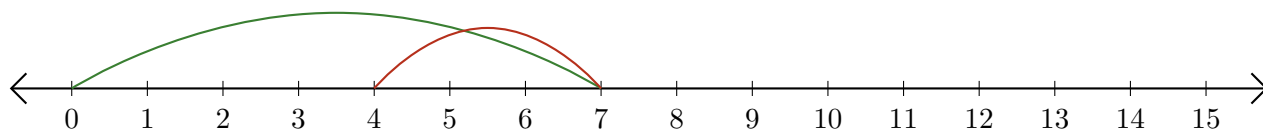
3. $\underline{\quad} - \underline{\quad} = \underline{\quad}$



4. $\underline{\quad} - \underline{\quad} = \underline{\quad}$



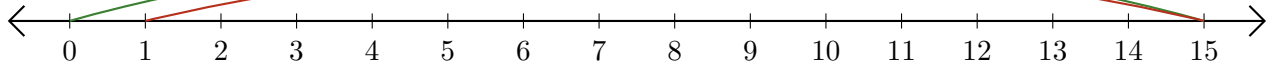
5. $\underline{\quad} - \underline{\quad} = \underline{\quad}$



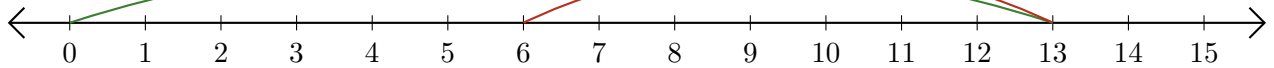
Lecture de Nombres sur une Droite Graduée (F) Réponses

Déterminez les termes et la différence (résultat) représentés sur chaque droite graduée.

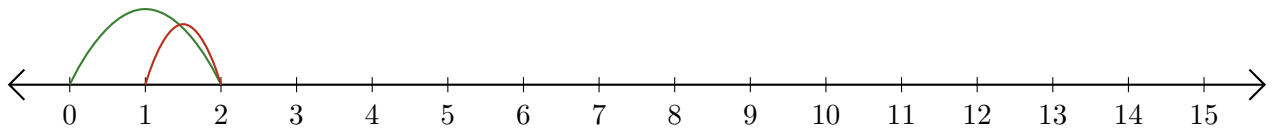
1. $\underline{15} - \underline{14} = \underline{1}$



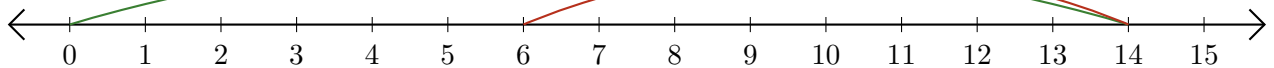
2. $\underline{13} - \underline{7} = \underline{6}$



3. $\underline{2} - \underline{1} = \underline{1}$



4. $\underline{14} - \underline{8} = \underline{6}$



5. $\underline{7} - \underline{3} = \underline{4}$

