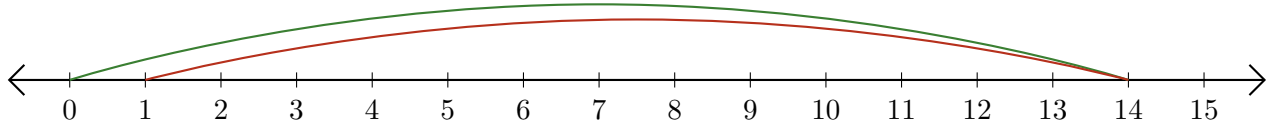


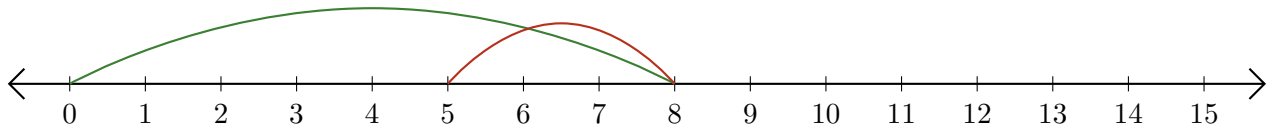
Lecture de Nombres sur une Droite Graduée (B)

Déterminez les termes et la différence (résultat) représentés sur chaque droite graduée.

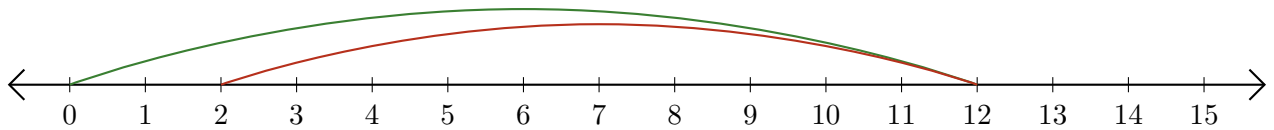
1. $\underline{\quad} - \underline{\quad} = \underline{\quad}$



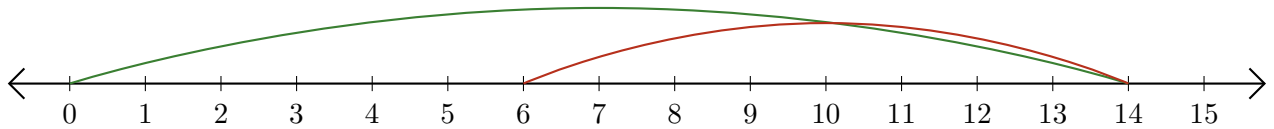
2. $\underline{\quad} - \underline{\quad} = \underline{\quad}$



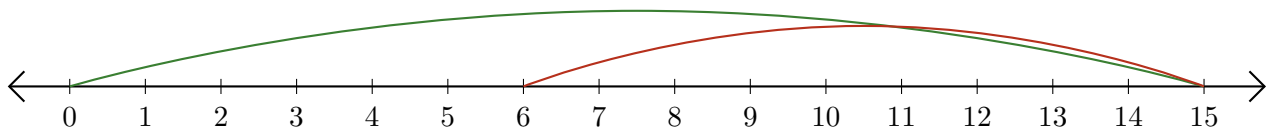
3. $\underline{\quad} - \underline{\quad} = \underline{\quad}$



4. $\underline{\quad} - \underline{\quad} = \underline{\quad}$



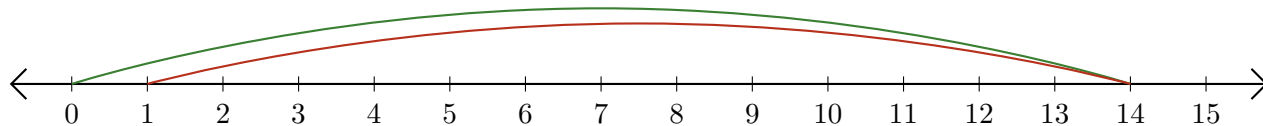
5. $\underline{\quad} - \underline{\quad} = \underline{\quad}$



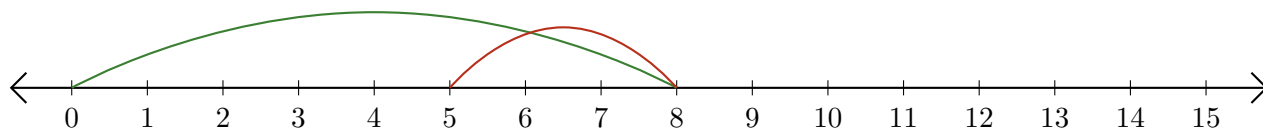
Lecture de Nombres sur une Droite Graduée (B) Réponses

Déterminez les termes et la différence (résultat) représentés sur chaque droite graduée.

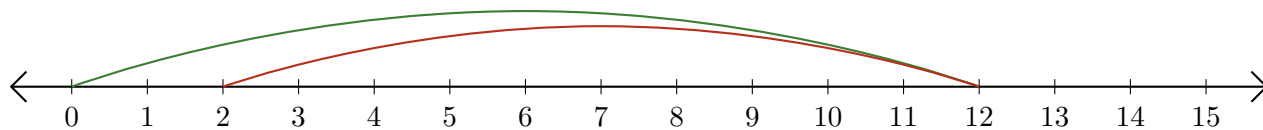
1. $\underline{14} - \underline{13} = \underline{1}$



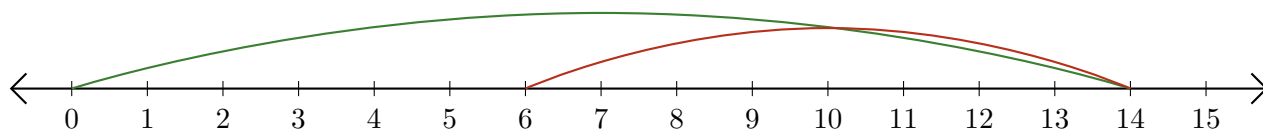
2. $\underline{8} - \underline{3} = \underline{5}$



3. $\underline{12} - \underline{10} = \underline{2}$



4. $\underline{14} - \underline{8} = \underline{6}$



5. $\underline{15} - \underline{9} = \underline{6}$

