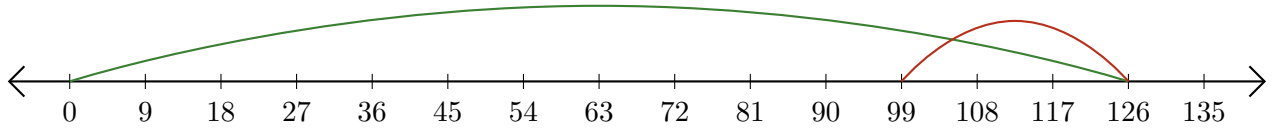


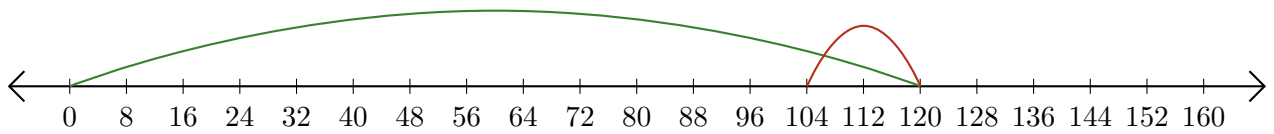
Lecture de Nombres sur une Droite Graduée (E)

Déterminez la question que chaque droite graduée démontre.


1. _____ - _____ = _____



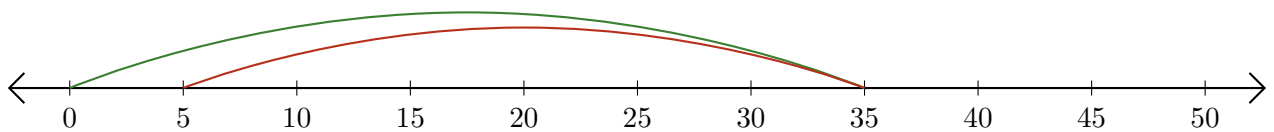
2. _____ - _____ = _____



3. _____ - _____ = _____



4. _____ - _____ = _____



5. _____ - _____ = _____

