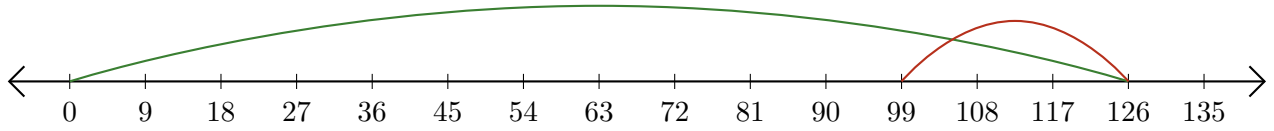


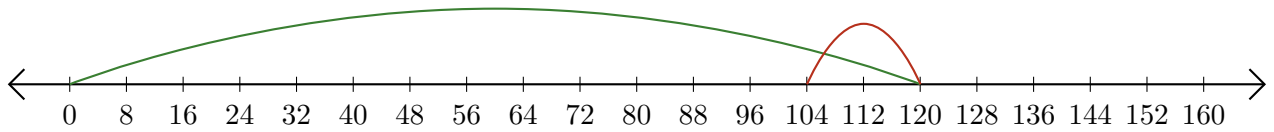
Lecture de Nombres sur une Droite Graduée (E)

Déterminez la question que chaque droite graduée démontre.


1. _____ - _____ = _____



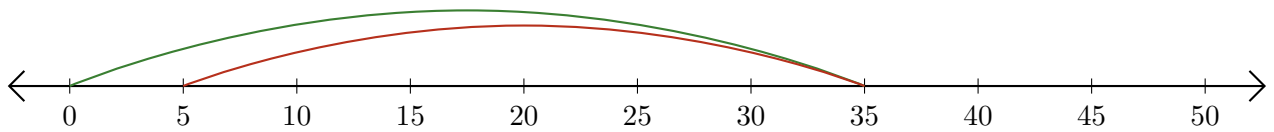
2. _____ - _____ = _____



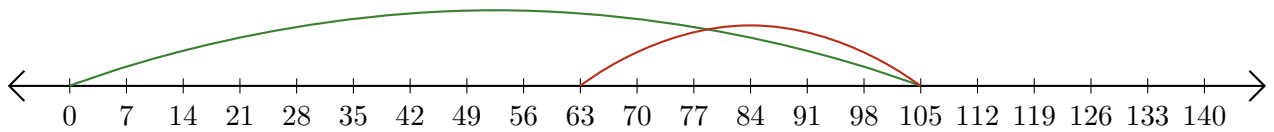
3. _____ - _____ = _____



4. _____ - _____ = _____



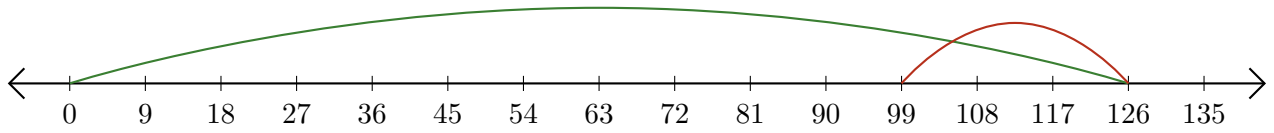
5. _____ - _____ = _____



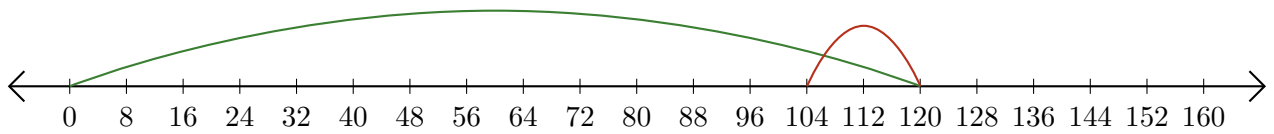
Lecture de Nombres sur une Droite Graduée (E) Réponses

Déterminez la question que chaque droite graduée démontre.


1. $\underline{126} - \underline{27} = \underline{99}$



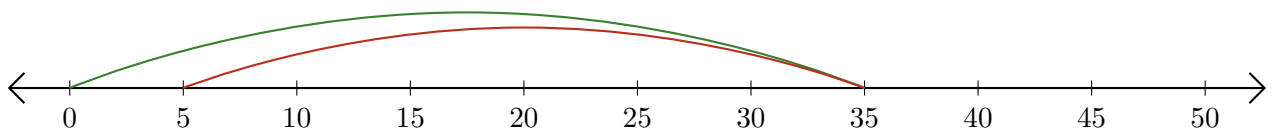
2. $\underline{120} - \underline{16} = \underline{104}$



3. $\underline{9} - \underline{3} = \underline{6}$



4. $\underline{35} - \underline{30} = \underline{5}$



5. $\underline{105} - \underline{42} = \underline{63}$

