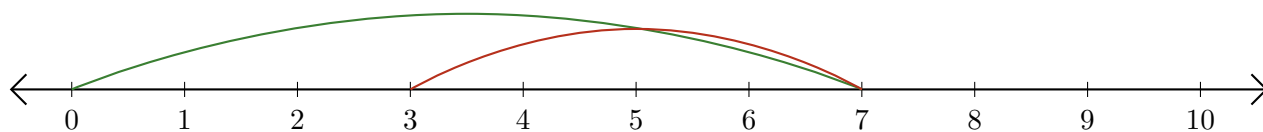


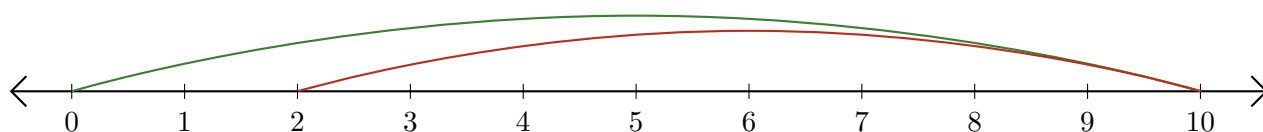
Lecture de Nombres sur une Droite Graduée (C)

Déterminez la question que chaque droite graduée démontre.

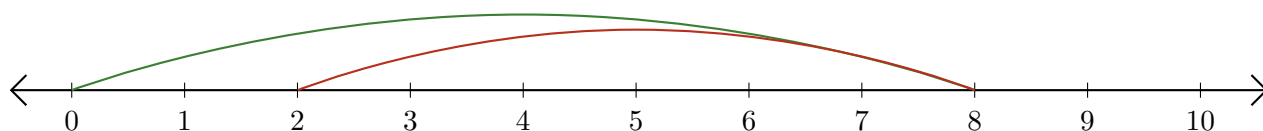
1. $\underline{\quad} - \underline{\quad} = \underline{\quad}$



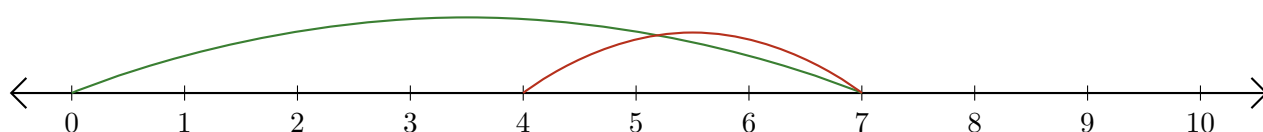
2. $\underline{\quad} - \underline{\quad} = \underline{\quad}$



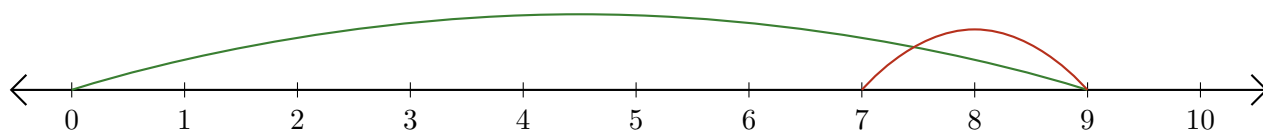
3. $\underline{\quad} - \underline{\quad} = \underline{\quad}$



4. $\underline{\quad} - \underline{\quad} = \underline{\quad}$



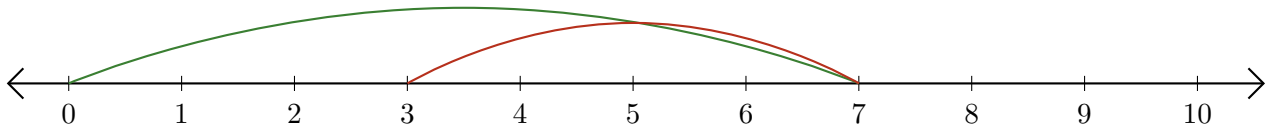
5. $\underline{\quad} - \underline{\quad} = \underline{\quad}$



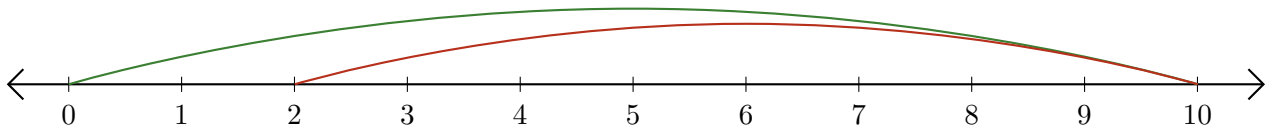
Lecture de Nombres sur une Droite Graduée (C) Réponses

Déterminez la question que chaque droite graduée démontre.

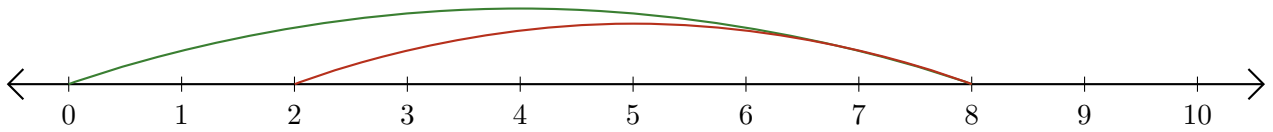
1. $\underline{7} - \underline{4} = \underline{3}$



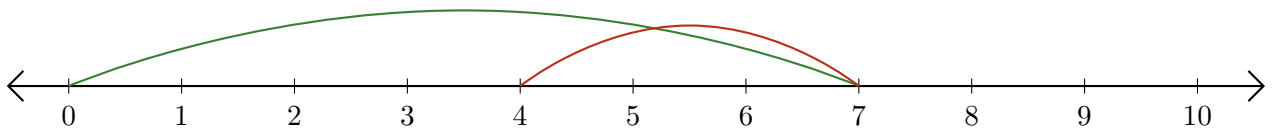
2. $\underline{10} - \underline{8} = \underline{2}$



3. $\underline{8} - \underline{6} = \underline{2}$



4. $\underline{7} - \underline{3} = \underline{4}$



5. $\underline{9} - \underline{2} = \underline{7}$

