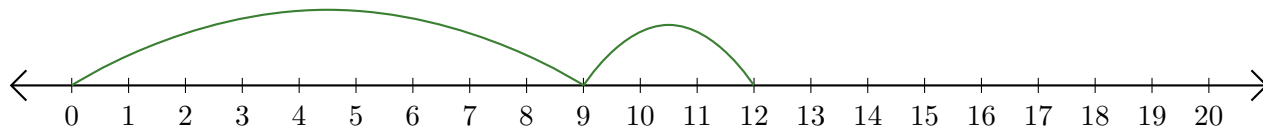


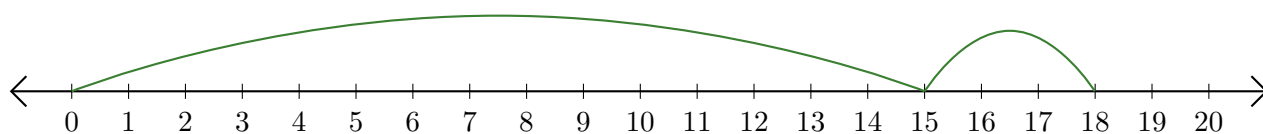
Lecture de Nombres sur une Droite Graduée (A)

Déterminez la question que chaque droite graduée démontre.

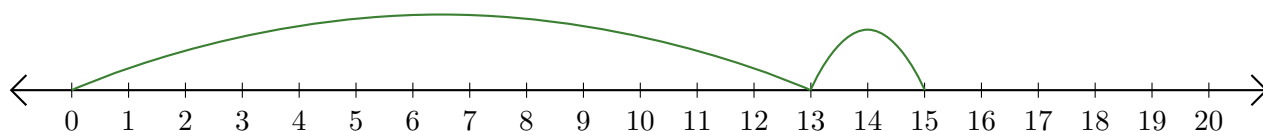
1. $\underline{\quad} + \underline{\quad} = \underline{\quad}$



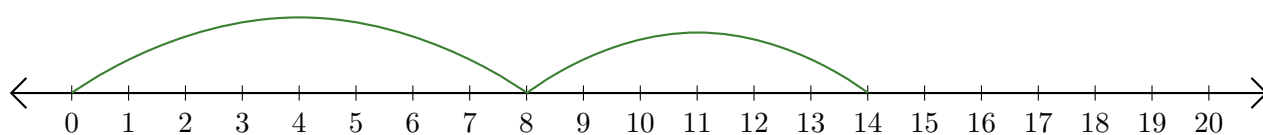
2. $\underline{\quad} + \underline{\quad} = \underline{\quad}$



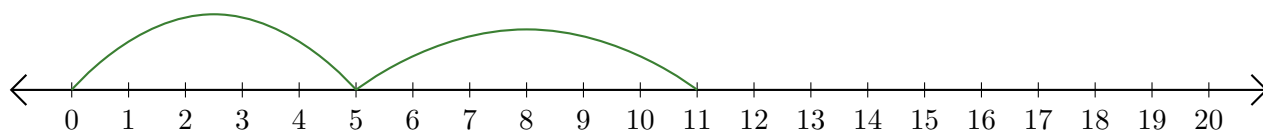
3. $\underline{\quad} + \underline{\quad} = \underline{\quad}$



4. $\underline{\quad} + \underline{\quad} = \underline{\quad}$



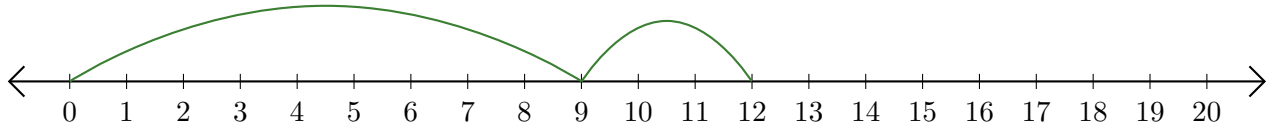
5. $\underline{\quad} + \underline{\quad} = \underline{\quad}$



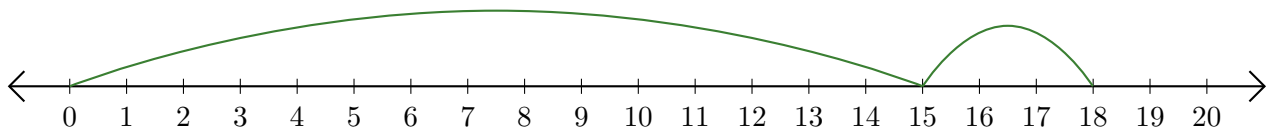
Lecture de Nombres sur une Droite Graduée (A) Réponses

Déterminez la question que chaque droite graduée démontre.

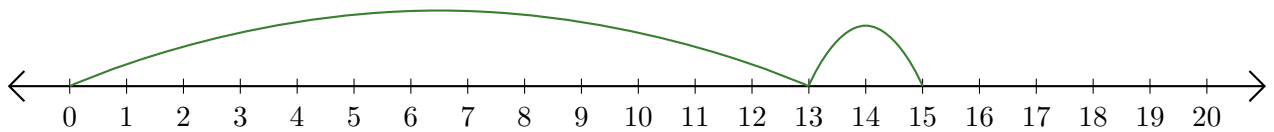
1. $\underline{9} + \underline{3} = \underline{12}$



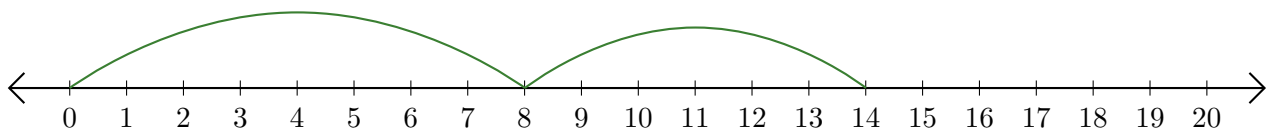
2. $\underline{15} + \underline{3} = \underline{18}$



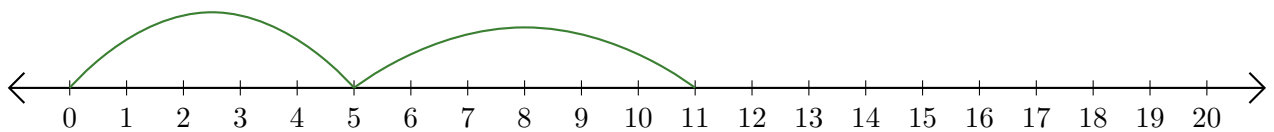
3. $\underline{13} + \underline{2} = \underline{15}$



4. $\underline{8} + \underline{6} = \underline{14}$



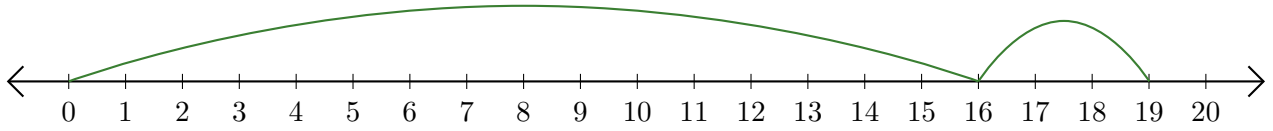
5. $\underline{5} + \underline{6} = \underline{11}$



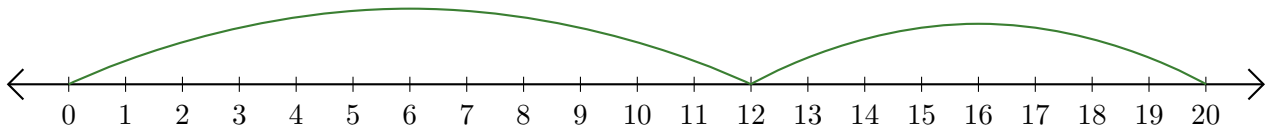
Lecture de Nombres sur une Droite Graduée (B)

Déterminez la question que chaque droite graduée démontre.

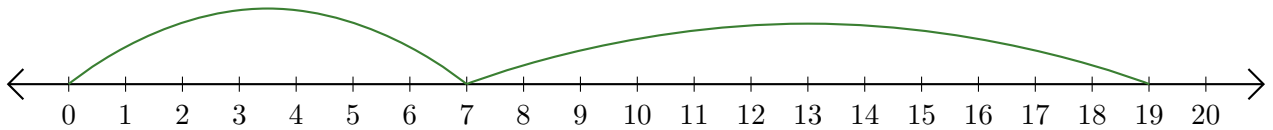
1. $\underline{\quad} + \underline{\quad} = \underline{\quad}$



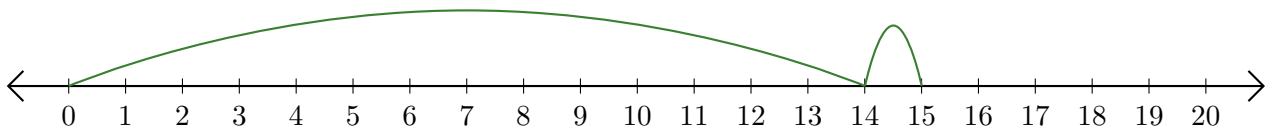
2. $\underline{\quad} + \underline{\quad} = \underline{\quad}$



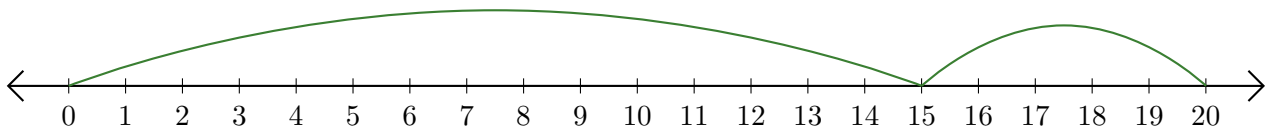
3. $\underline{\quad} + \underline{\quad} = \underline{\quad}$



4. $\underline{\quad} + \underline{\quad} = \underline{\quad}$



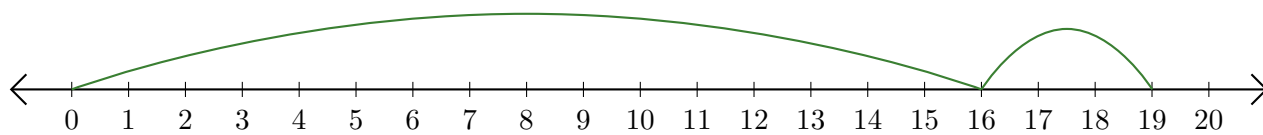
5. $\underline{\quad} + \underline{\quad} = \underline{\quad}$



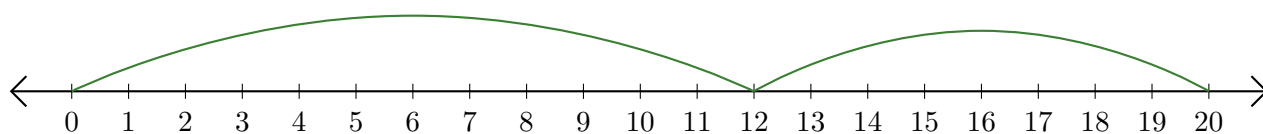
Lecture de Nombres sur une Droite Graduée (B) Réponses

Déterminez la question que chaque droite graduée démontre.

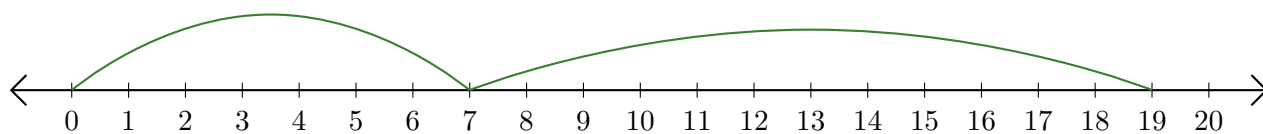
1. $\underline{16} + \underline{3} = \underline{19}$



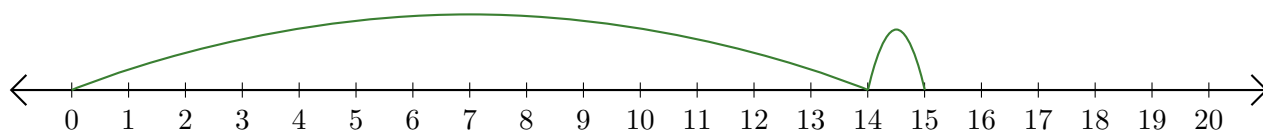
2. $\underline{12} + \underline{8} = \underline{20}$



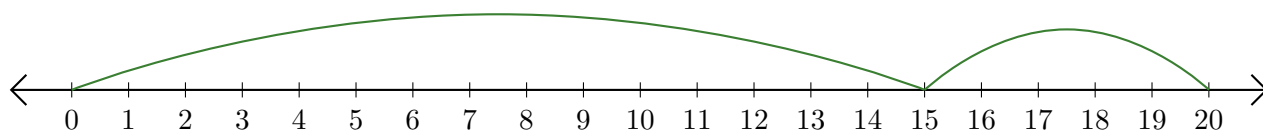
3. $\underline{7} + \underline{12} = \underline{19}$



4. $\underline{14} + \underline{1} = \underline{15}$



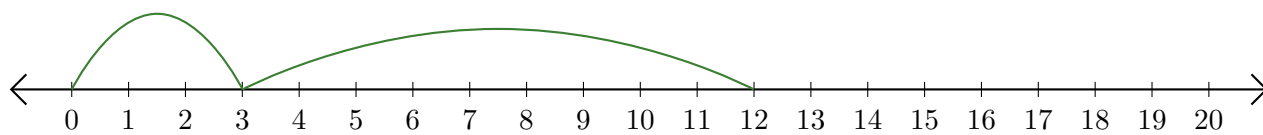
5. $\underline{15} + \underline{5} = \underline{20}$



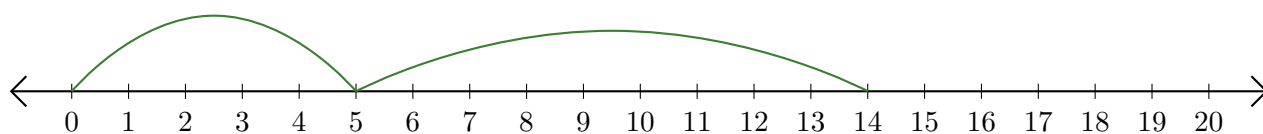
Lecture de Nombres sur une Droite Graduée (C)

Déterminez la question que chaque droite graduée démontre.

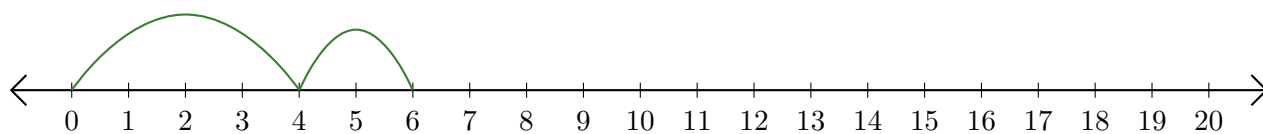
1. $\underline{\quad} + \underline{\quad} = \underline{\quad}$



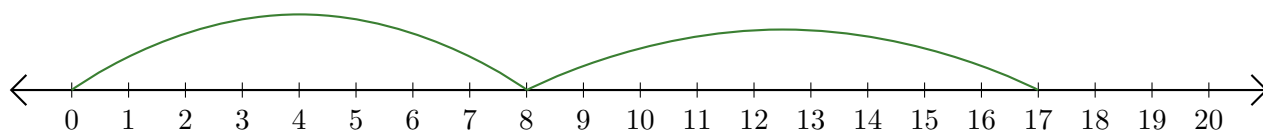
2. $\underline{\quad} + \underline{\quad} = \underline{\quad}$



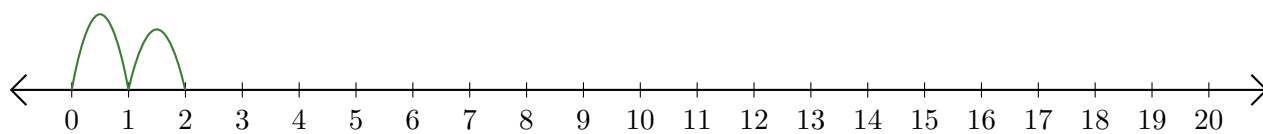
3. $\underline{\quad} + \underline{\quad} = \underline{\quad}$



4. $\underline{\quad} + \underline{\quad} = \underline{\quad}$



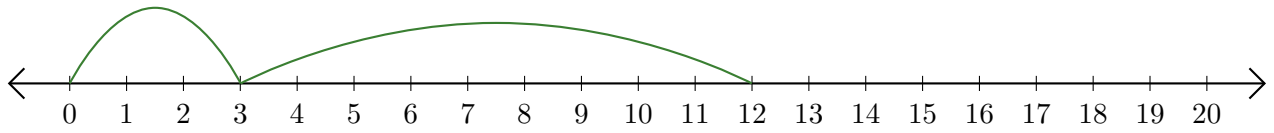
5. $\underline{\quad} + \underline{\quad} = \underline{\quad}$



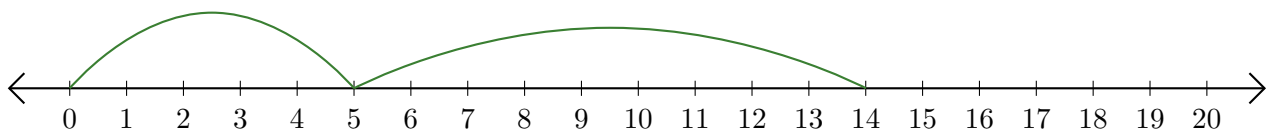
Lecture de Nombres sur une Droite Graduée (C) Réponses

Déterminez la question que chaque droite graduée démontre.

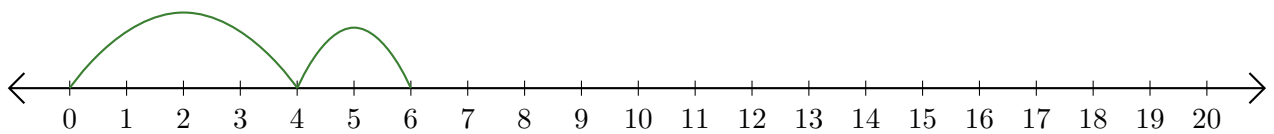
1. $\underline{3} + \underline{9} = \underline{12}$



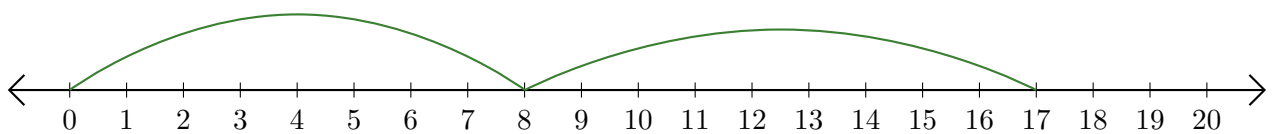
2. $\underline{5} + \underline{9} = \underline{14}$



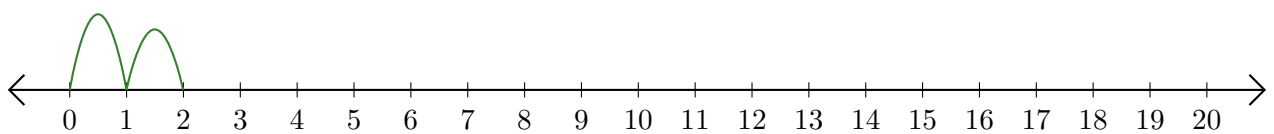
3. $\underline{4} + \underline{2} = \underline{6}$



4. $\underline{8} + \underline{9} = \underline{17}$



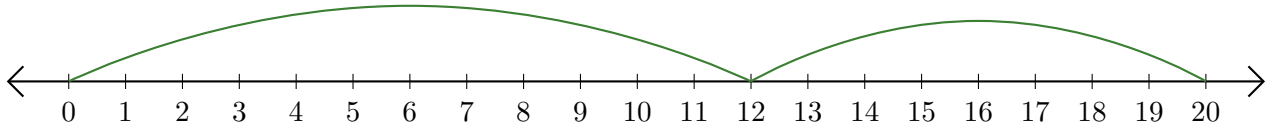
5. $\underline{1} + \underline{1} = \underline{2}$



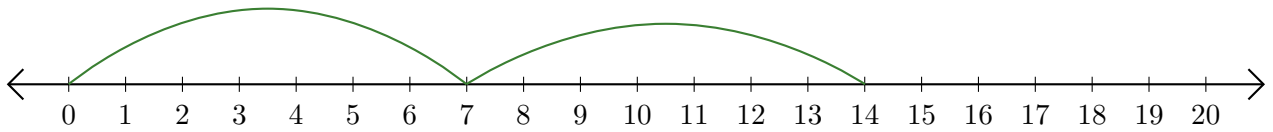
Lecture de Nombres sur une Droite Graduée (D)

Déterminez la question que chaque droite graduée démontre.

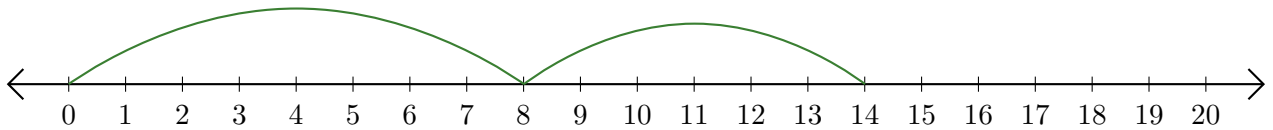
1. $\underline{\quad} + \underline{\quad} = \underline{\quad}$



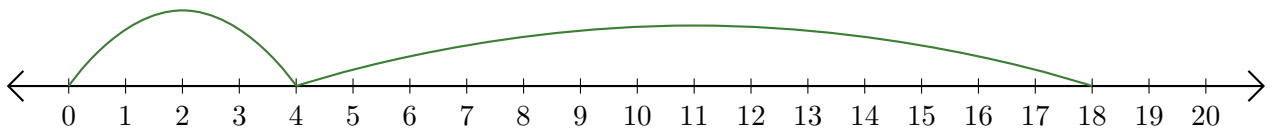
2. $\underline{\quad} + \underline{\quad} = \underline{\quad}$



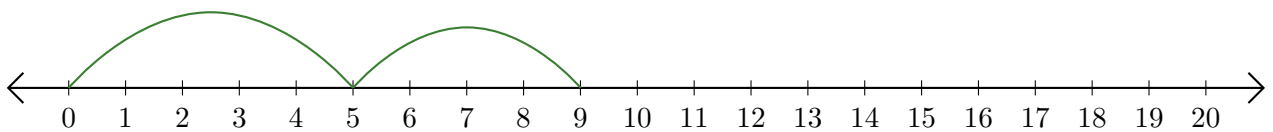
3. $\underline{\quad} + \underline{\quad} = \underline{\quad}$



4. $\underline{\quad} + \underline{\quad} = \underline{\quad}$



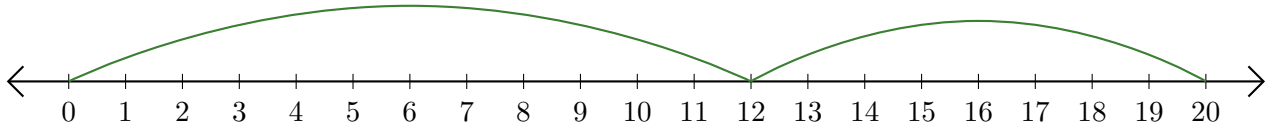
5. $\underline{\quad} + \underline{\quad} = \underline{\quad}$



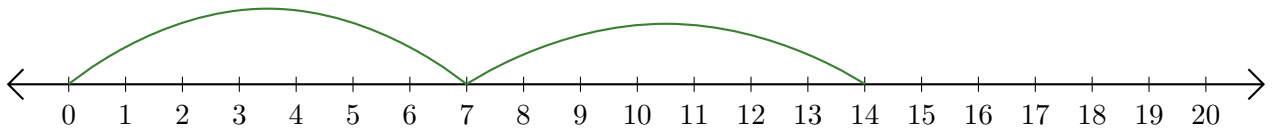
Lecture de Nombres sur une Droite Graduée (D) Réponses

Déterminez la question que chaque droite graduée démontre.

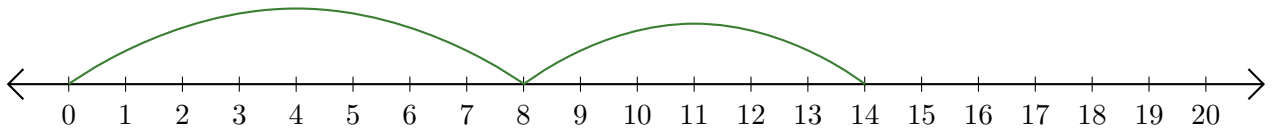
1. $\underline{12} + \underline{8} = \underline{20}$



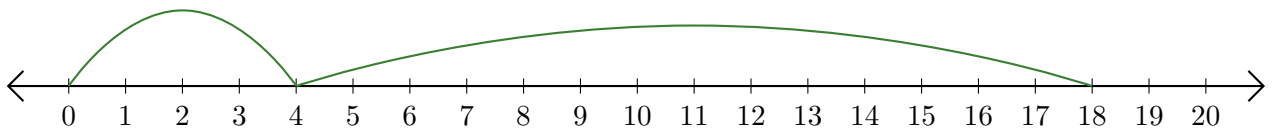
2. $\underline{7} + \underline{7} = \underline{14}$



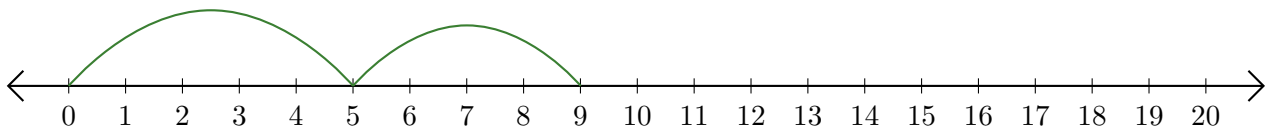
3. $\underline{8} + \underline{6} = \underline{14}$



4. $\underline{4} + \underline{14} = \underline{18}$



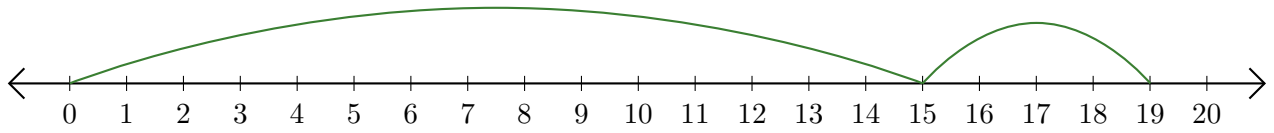
5. $\underline{5} + \underline{4} = \underline{9}$



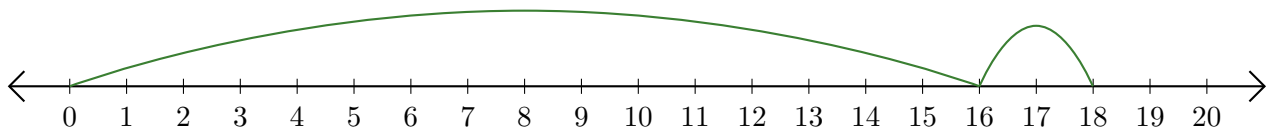
Lecture de Nombres sur une Droite Graduée (E)

Déterminez la question que chaque droite graduée démontre.

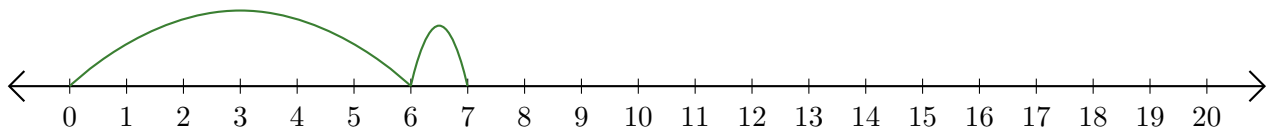
1. $\underline{\quad} + \underline{\quad} = \underline{\quad}$



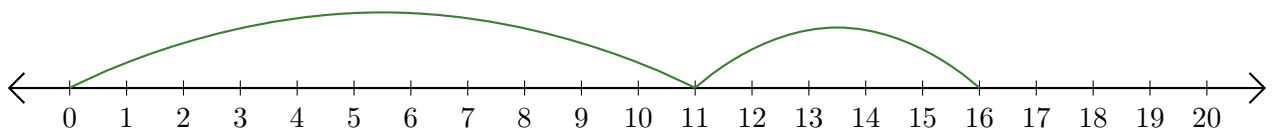
2. $\underline{\quad} + \underline{\quad} = \underline{\quad}$



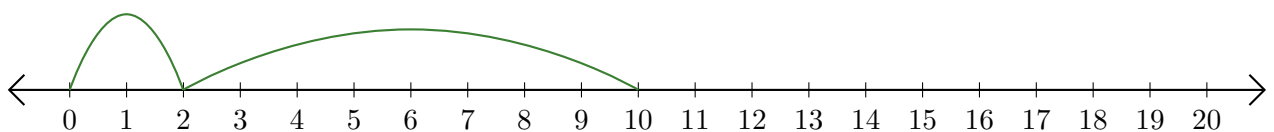
3. $\underline{\quad} + \underline{\quad} = \underline{\quad}$



4. $\underline{\quad} + \underline{\quad} = \underline{\quad}$



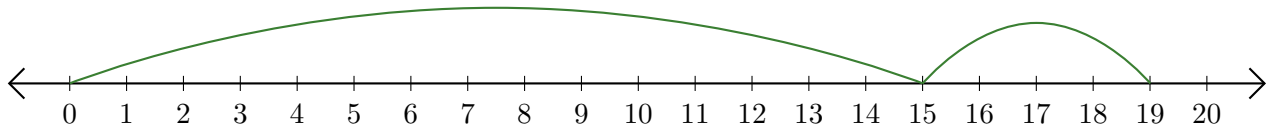
5. $\underline{\quad} + \underline{\quad} = \underline{\quad}$



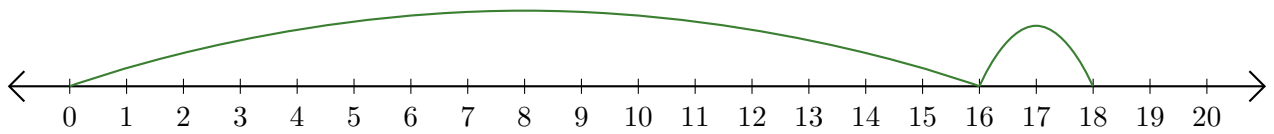
Lecture de Nombres sur une Droite Graduée (E) Réponses

Déterminez la question que chaque droite graduée démontre.

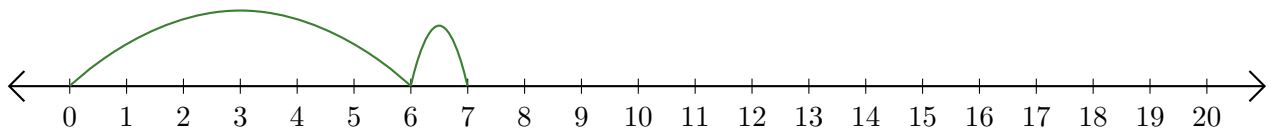
1. $\underline{15} + \underline{4} = \underline{19}$



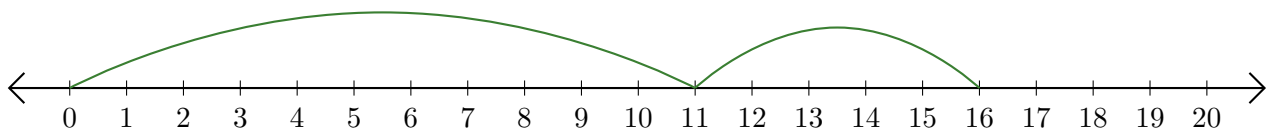
2. $\underline{16} + \underline{2} = \underline{18}$



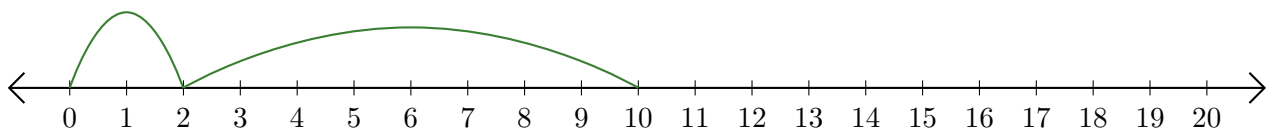
3. $\underline{6} + \underline{1} = \underline{7}$



4. $\underline{11} + \underline{5} = \underline{16}$



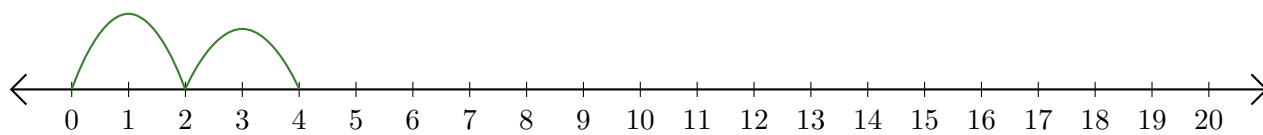
5. $\underline{2} + \underline{8} = \underline{10}$



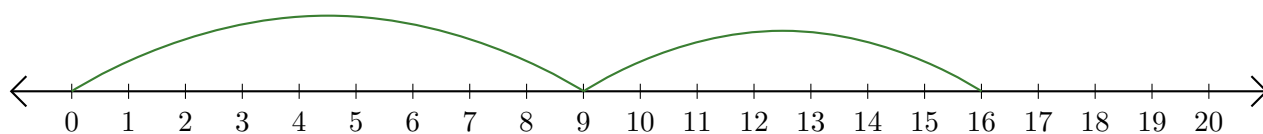
Lecture de Nombres sur une Droite Graduée (F)

Déterminez la question que chaque droite graduée démontre.

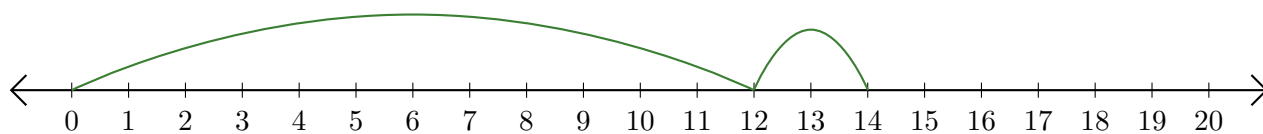
1. $\underline{\quad} + \underline{\quad} = \underline{\quad}$



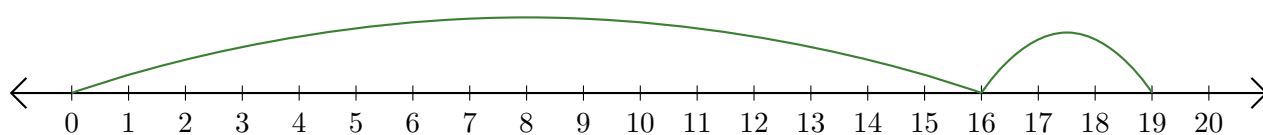
2. $\underline{\quad} + \underline{\quad} = \underline{\quad}$



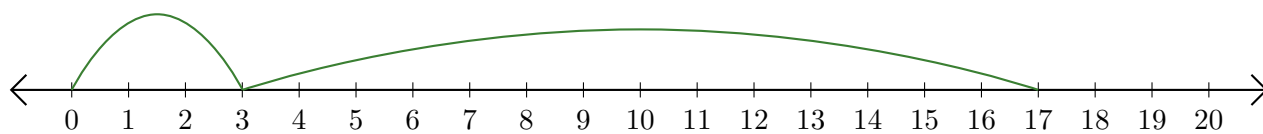
3. $\underline{\quad} + \underline{\quad} = \underline{\quad}$



4. $\underline{\quad} + \underline{\quad} = \underline{\quad}$




5. $\underline{\quad} + \underline{\quad} = \underline{\quad}$



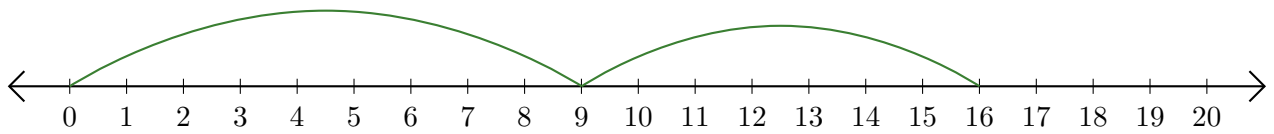
Lecture de Nombres sur une Droite Graduée (F) Réponses

Déterminez la question que chaque droite graduée démontre.

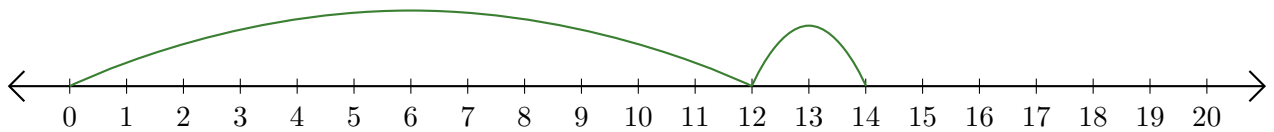
1. $\underline{2} + \underline{2} = \underline{4}$



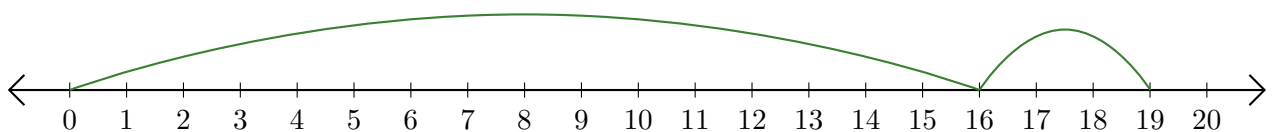
2. $\underline{9} + \underline{7} = \underline{16}$



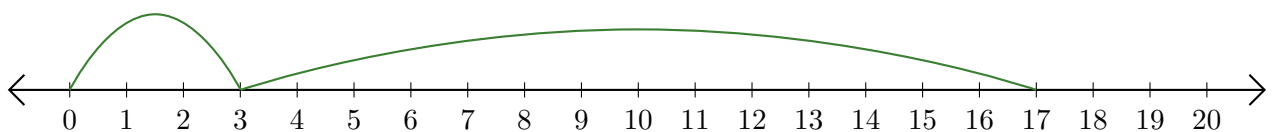
3. $\underline{12} + \underline{2} = \underline{14}$



4. $\underline{16} + \underline{3} = \underline{19}$



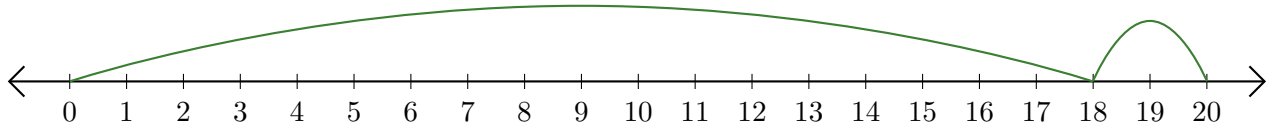
5. $\underline{3} + \underline{14} = \underline{17}$



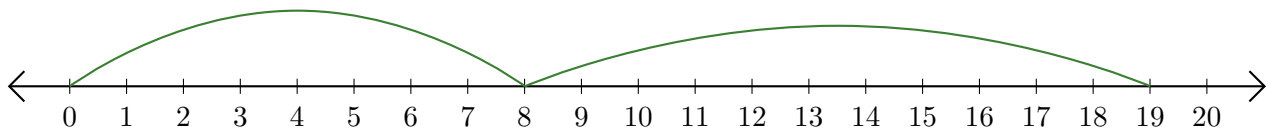
Lecture de Nombres sur une Droite Graduée (G)

Déterminez la question que chaque droite graduée démontre.

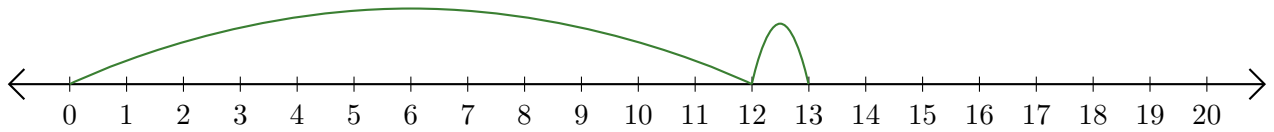
1. $\underline{\quad} + \underline{\quad} = \underline{\quad}$



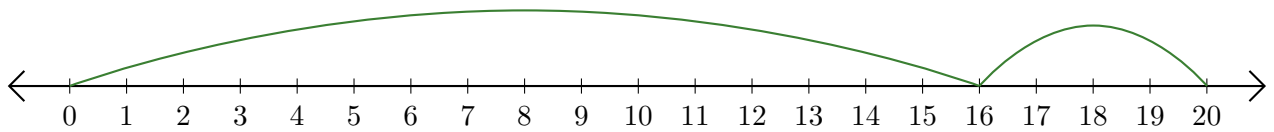
2. $\underline{\quad} + \underline{\quad} = \underline{\quad}$



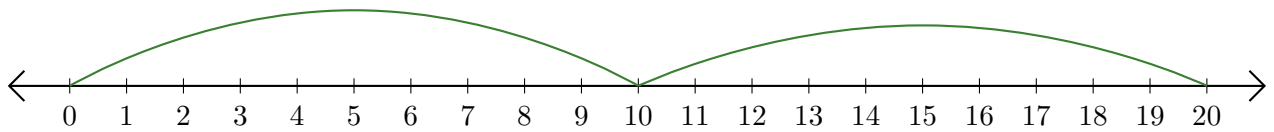
3. $\underline{\quad} + \underline{\quad} = \underline{\quad}$



4. $\underline{\quad} + \underline{\quad} = \underline{\quad}$



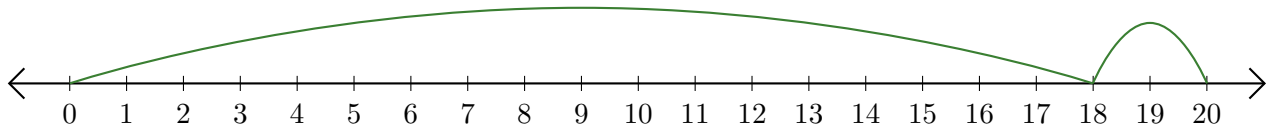
5. $\underline{\quad} + \underline{\quad} = \underline{\quad}$



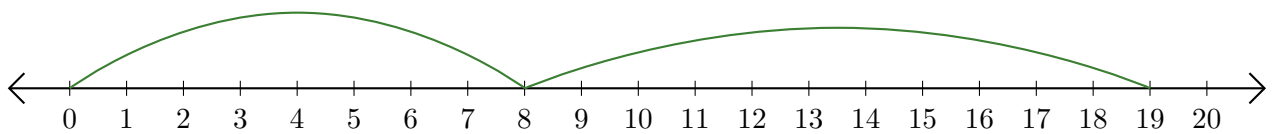
Lecture de Nombres sur une Droite Graduée (G) Réponses

Déterminez la question que chaque droite graduée démontre.

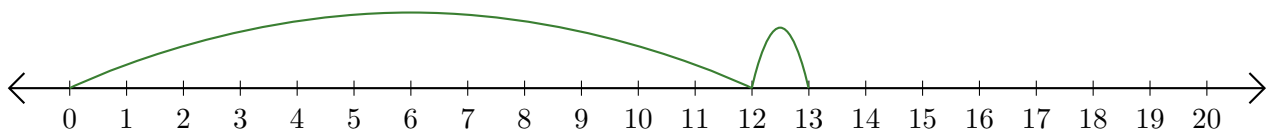
1. $\underline{18} + \underline{2} = \underline{20}$



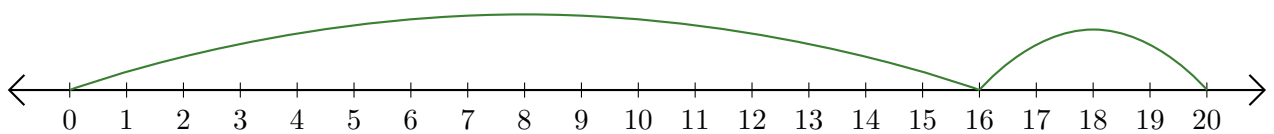
2. $\underline{8} + \underline{11} = \underline{19}$



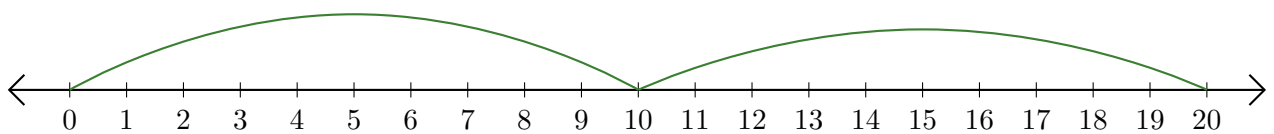
3. $\underline{12} + \underline{1} = \underline{13}$



4. $\underline{16} + \underline{4} = \underline{20}$



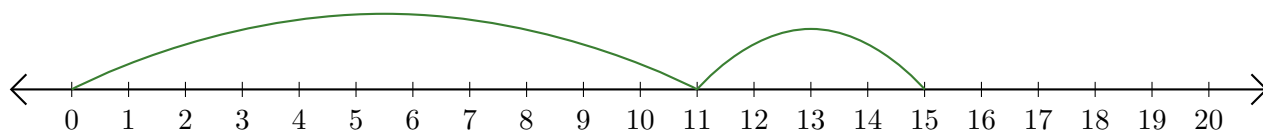
5. $\underline{10} + \underline{10} = \underline{20}$




Lecture de Nombres sur une Droite Graduée (H)

Déterminez la question que chaque droite graduée démontre.

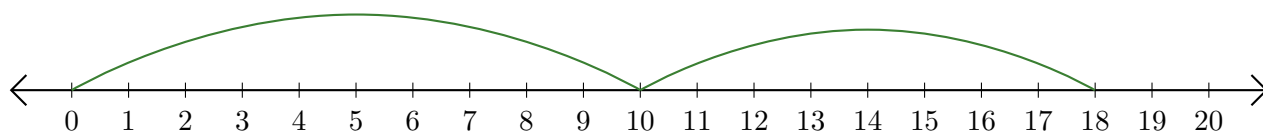
1. $\underline{\quad} + \underline{\quad} = \underline{\quad}$



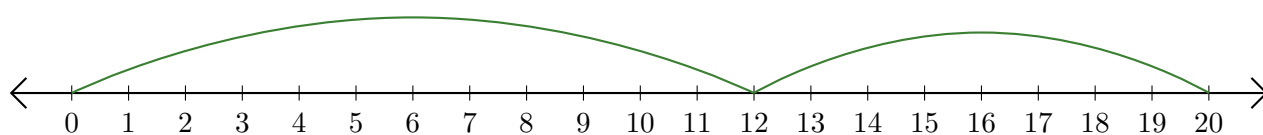
2. $\underline{\quad} + \underline{\quad} = \underline{\quad}$



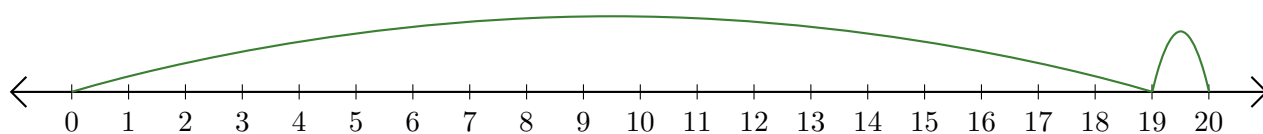
3. $\underline{\quad} + \underline{\quad} = \underline{\quad}$



4. $\underline{\quad} + \underline{\quad} = \underline{\quad}$



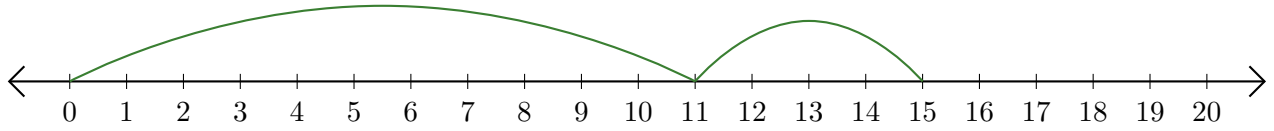
5. $\underline{\quad} + \underline{\quad} = \underline{\quad}$



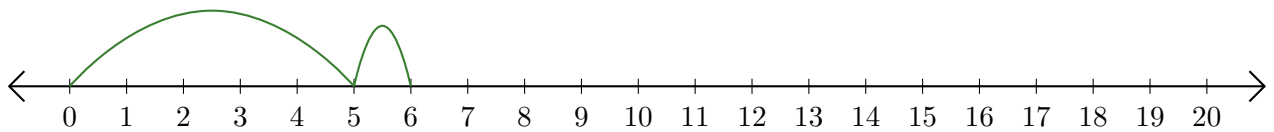
Lecture de Nombres sur une Droite Graduée (H) Réponses

Déterminez la question que chaque droite graduée démontre.

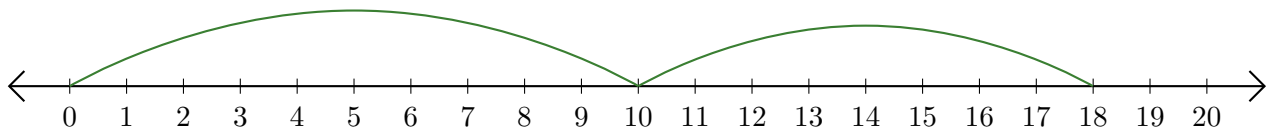
1. $\underline{11} + \underline{4} = \underline{15}$



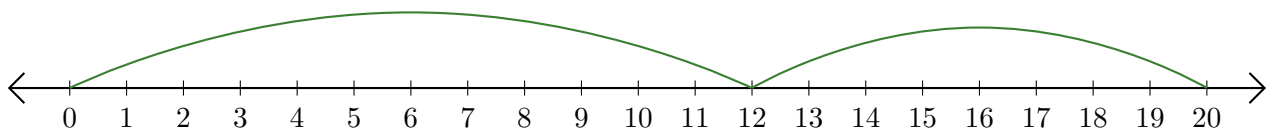
2. $\underline{5} + \underline{1} = \underline{6}$



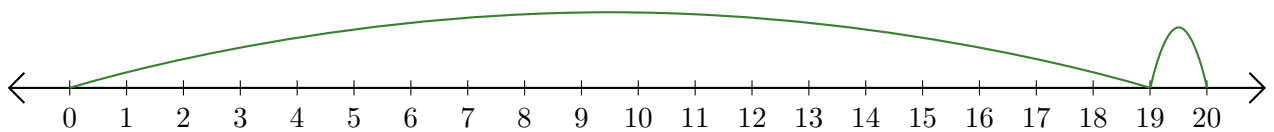
3. $\underline{10} + \underline{8} = \underline{18}$



4. $\underline{12} + \underline{8} = \underline{20}$



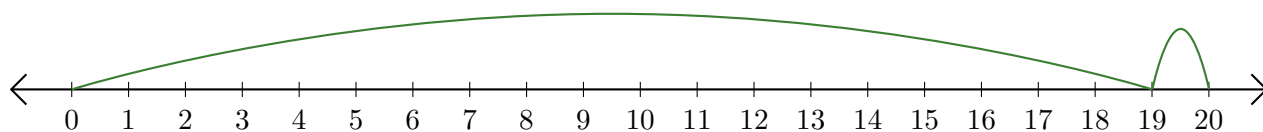
5. $\underline{19} + \underline{1} = \underline{20}$



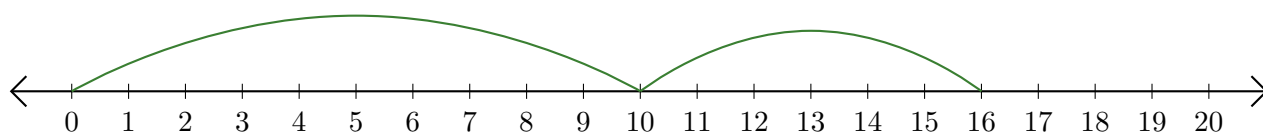
Lecture de Nombres sur une Droite Graduée (I)

Déterminez la question que chaque droite graduée démontre.

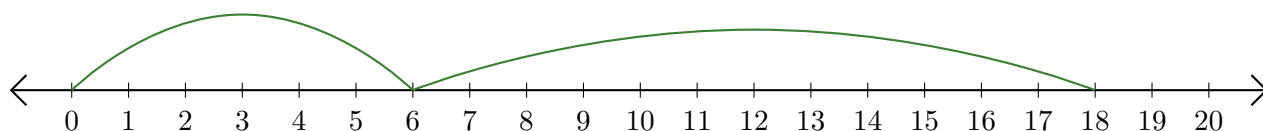
1. $\underline{\quad} + \underline{\quad} = \underline{\quad}$



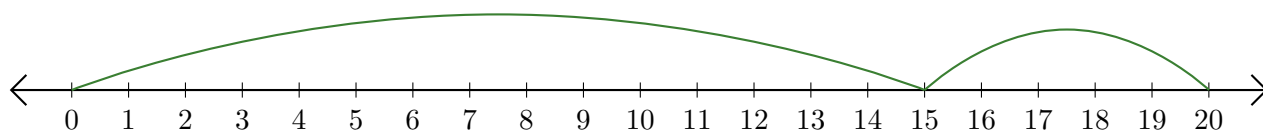
2. $\underline{\quad} + \underline{\quad} = \underline{\quad}$



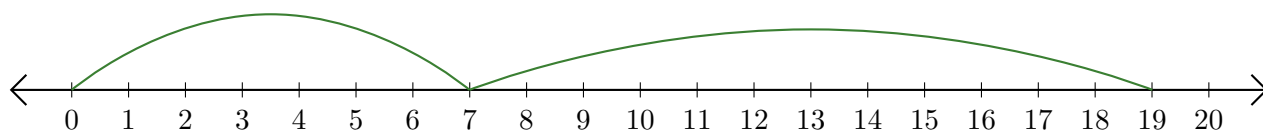
3. $\underline{\quad} + \underline{\quad} = \underline{\quad}$



4. $\underline{\quad} + \underline{\quad} = \underline{\quad}$



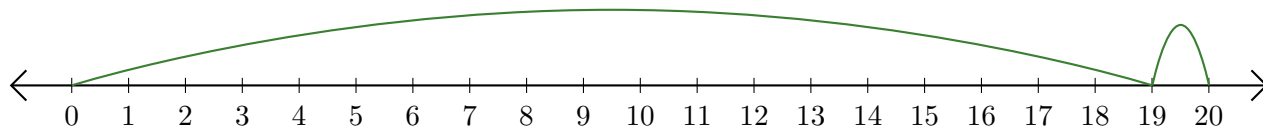
5. $\underline{\quad} + \underline{\quad} = \underline{\quad}$



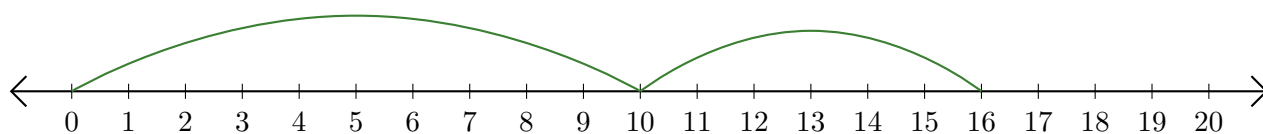
Lecture de Nombres sur une Droite Graduée (I) Réponses

Déterminez la question que chaque droite graduée démontre.

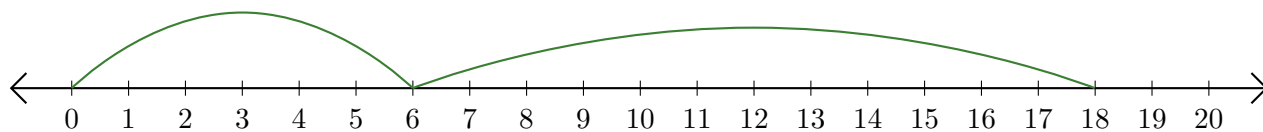
1. $\underline{19} + \underline{1} = \underline{20}$



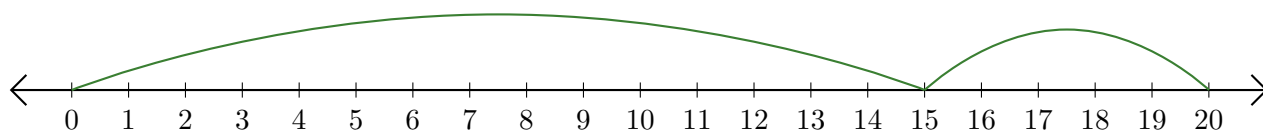
2. $\underline{10} + \underline{6} = \underline{16}$



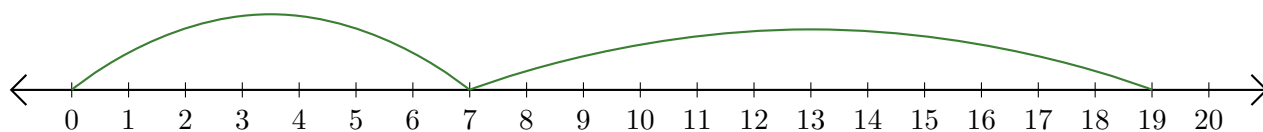
3. $\underline{6} + \underline{12} = \underline{18}$



4. $\underline{15} + \underline{5} = \underline{20}$



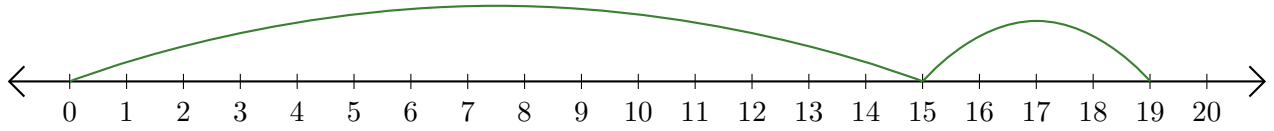
5. $\underline{7} + \underline{12} = \underline{19}$



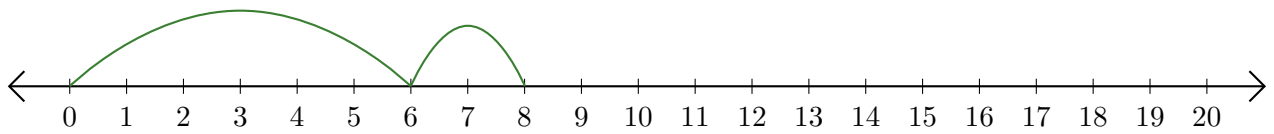
Lecture de Nombres sur une Droite Graduée (J)

Déterminez la question que chaque droite graduée démontre.

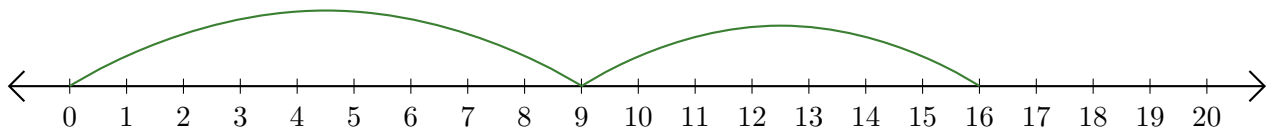
1. $\underline{\quad} + \underline{\quad} = \underline{\quad}$



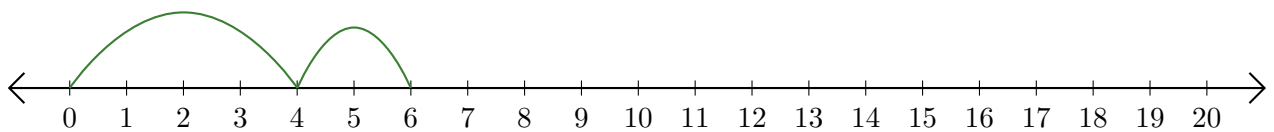
2. $\underline{\quad} + \underline{\quad} = \underline{\quad}$



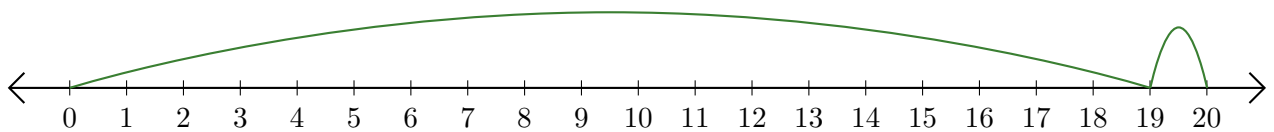
3. $\underline{\quad} + \underline{\quad} = \underline{\quad}$



4. $\underline{\quad} + \underline{\quad} = \underline{\quad}$



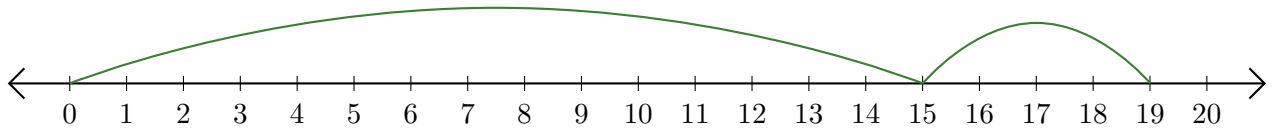
5. $\underline{\quad} + \underline{\quad} = \underline{\quad}$



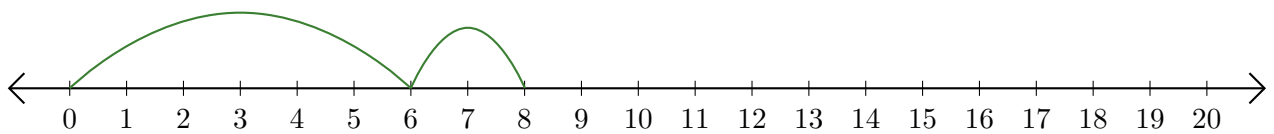
Lecture de Nombres sur une Droite Graduée (J) Réponses

Déterminez la question que chaque droite graduée démontre.

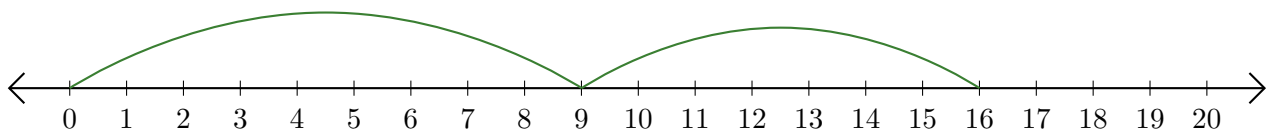
1. $\underline{15} + \underline{4} = \underline{19}$



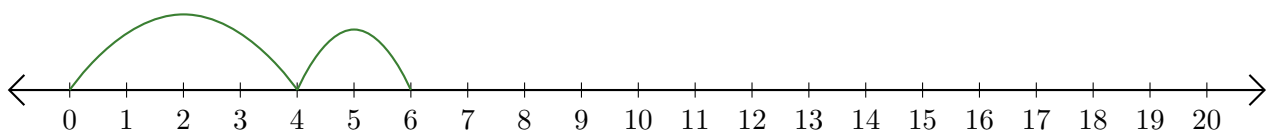
2. $\underline{6} + \underline{2} = \underline{8}$



3. $\underline{9} + \underline{7} = \underline{16}$



4. $\underline{4} + \underline{2} = \underline{6}$



5. $\underline{19} + \underline{1} = \underline{20}$

