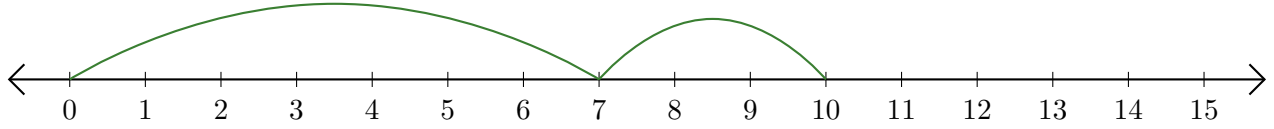


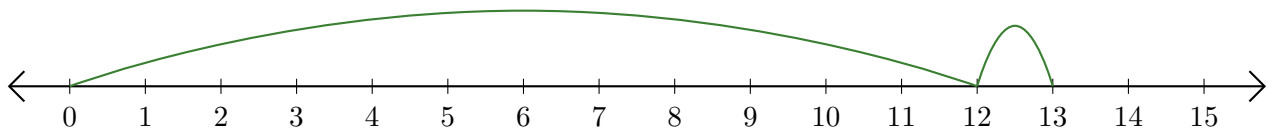
Lecture de Nombres sur une Droite Graduée (A)

Déterminez la question que chaque droite graduée démontre.

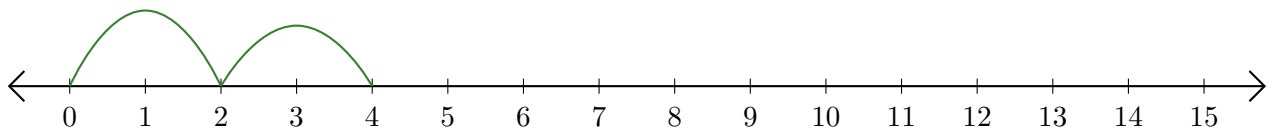
1. $\underline{\quad} + \underline{\quad} = \underline{\quad}$



2. $\underline{\quad} + \underline{\quad} = \underline{\quad}$



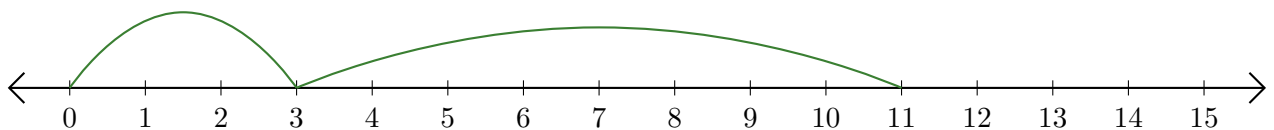
3. $\underline{\quad} + \underline{\quad} = \underline{\quad}$



4. $\underline{\quad} + \underline{\quad} = \underline{\quad}$



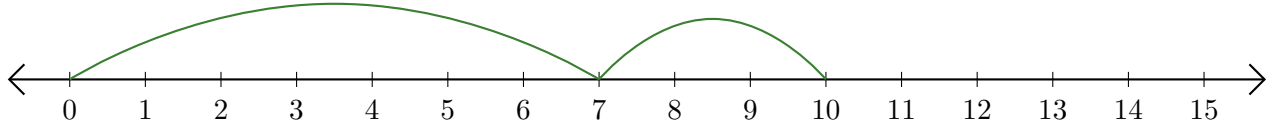
5. $\underline{\quad} + \underline{\quad} = \underline{\quad}$



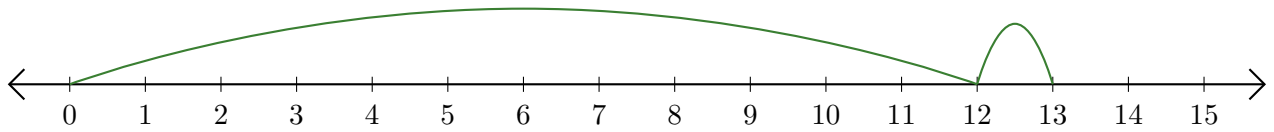
Lecture de Nombres sur une Droite Graduée (A) Réponses

Déterminez la question que chaque droite graduée démontre.

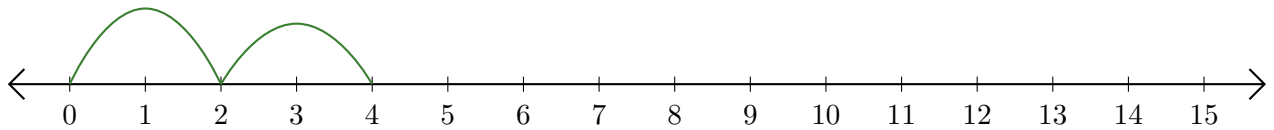
1. $\underline{7} + \underline{3} = \underline{10}$



2. $\underline{12} + \underline{1} = \underline{13}$



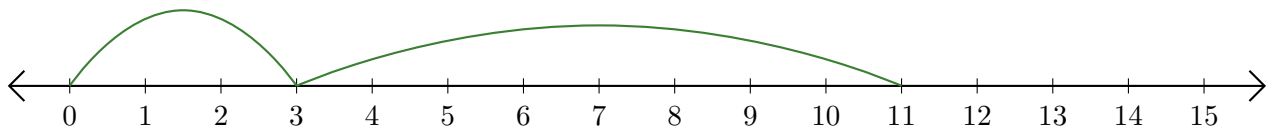
3. $\underline{2} + \underline{2} = \underline{4}$



4. $\underline{1} + \underline{3} = \underline{4}$



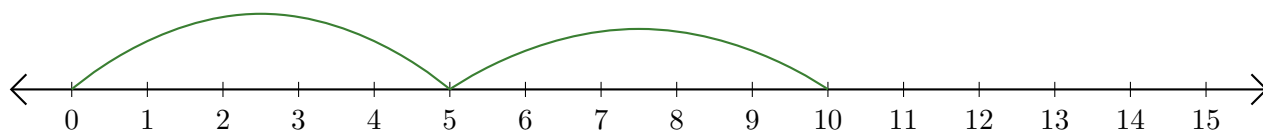
5. $\underline{3} + \underline{8} = \underline{11}$



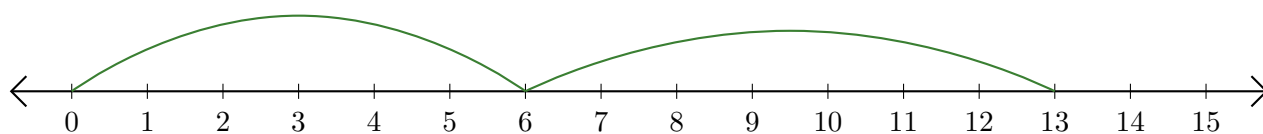
Lecture de Nombres sur une Droite Graduée (B)

Déterminez la question que chaque droite graduée démontre.

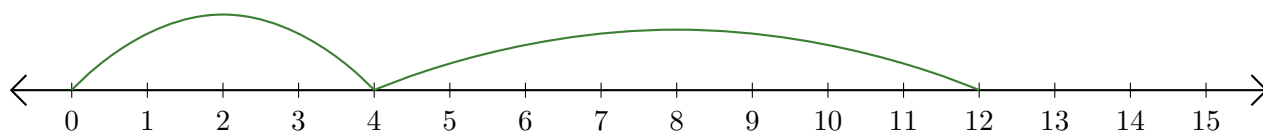
1. $\underline{\quad} + \underline{\quad} = \underline{\quad}$



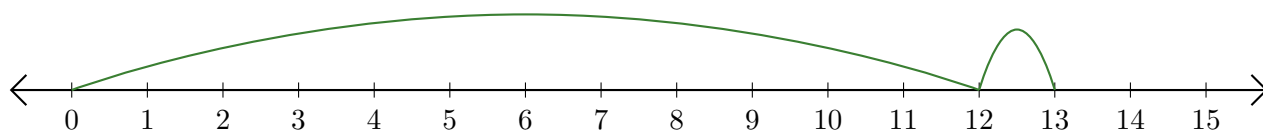
2. $\underline{\quad} + \underline{\quad} = \underline{\quad}$



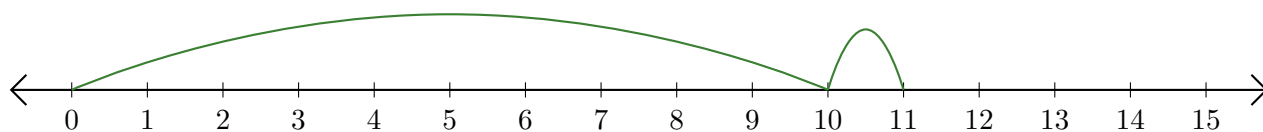
3. $\underline{\quad} + \underline{\quad} = \underline{\quad}$



4. $\underline{\quad} + \underline{\quad} = \underline{\quad}$



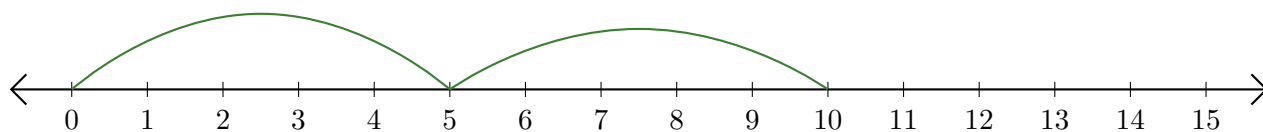
5. $\underline{\quad} + \underline{\quad} = \underline{\quad}$



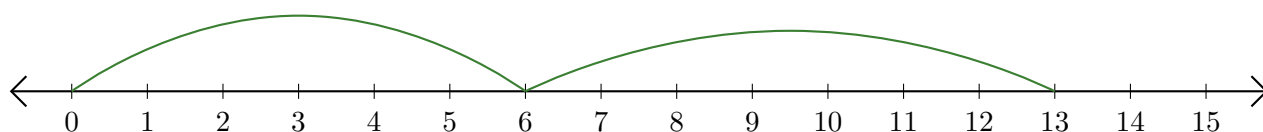
Lecture de Nombres sur une Droite Graduée (B) Réponses

Déterminez la question que chaque droite graduée démontre.

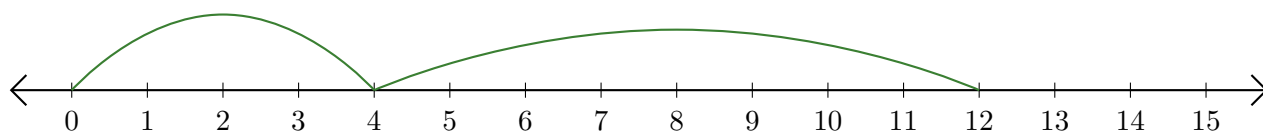
1. $\underline{5} + \underline{5} = \underline{10}$



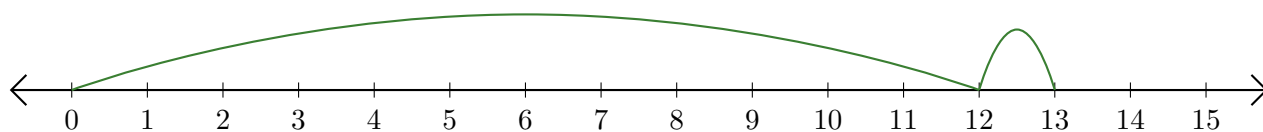
2. $\underline{6} + \underline{7} = \underline{13}$



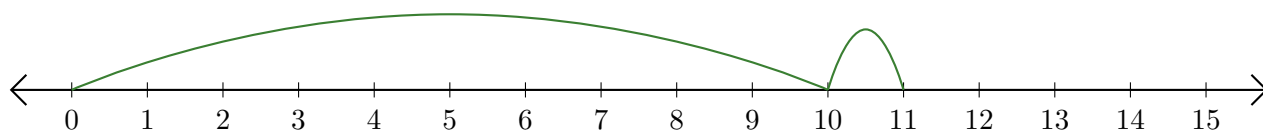
3. $\underline{4} + \underline{8} = \underline{12}$



4. $\underline{12} + \underline{1} = \underline{13}$



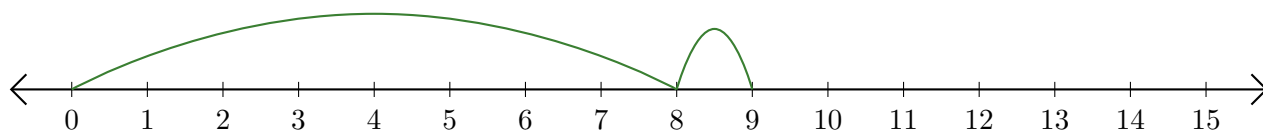
5. $\underline{10} + \underline{1} = \underline{11}$



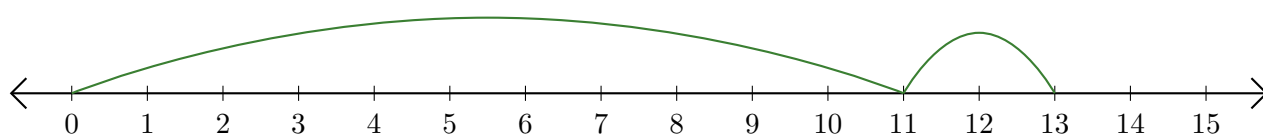
Lecture de Nombres sur une Droite Graduée (C)

Déterminez la question que chaque droite graduée démontre.

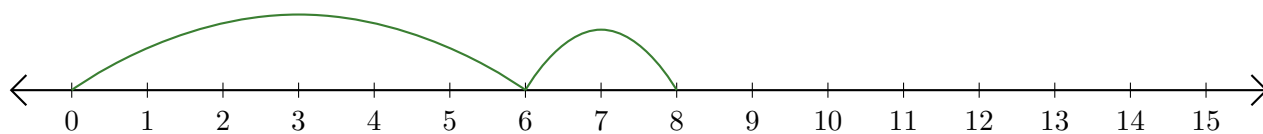
1. $\underline{\quad} + \underline{\quad} = \underline{\quad}$



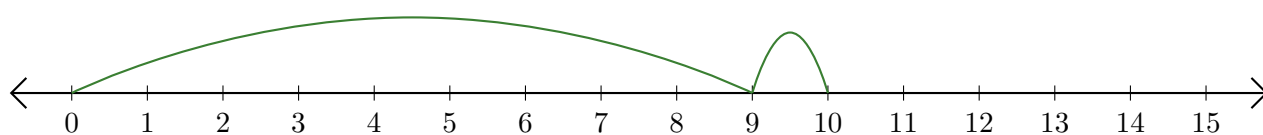
2. $\underline{\quad} + \underline{\quad} = \underline{\quad}$



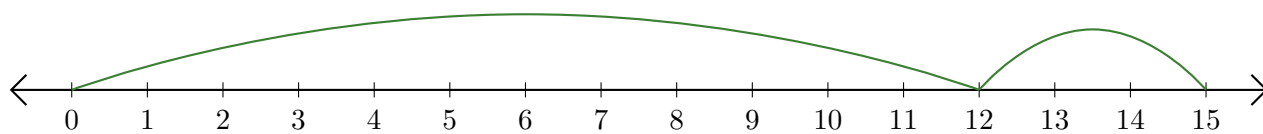
3. $\underline{\quad} + \underline{\quad} = \underline{\quad}$



4. $\underline{\quad} + \underline{\quad} = \underline{\quad}$



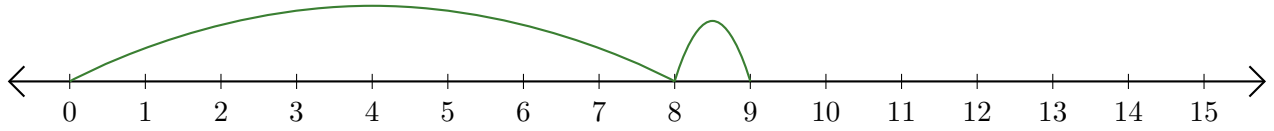
5. $\underline{\quad} + \underline{\quad} = \underline{\quad}$



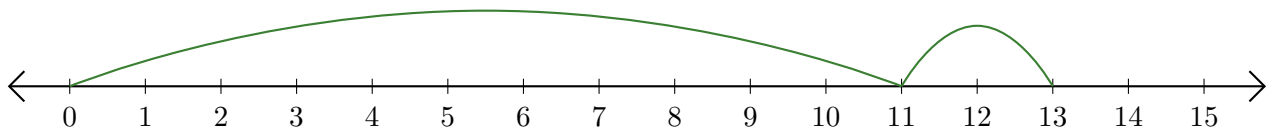
Lecture de Nombres sur une Droite Graduée (C) Réponses

Déterminez la question que chaque droite graduée démontre.

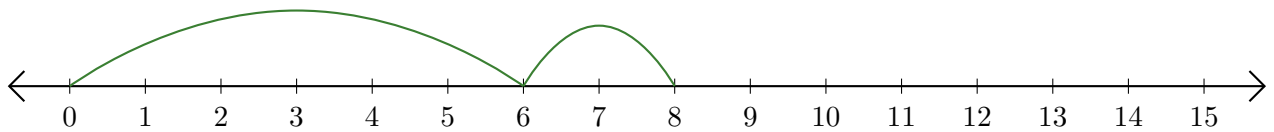
1. $\underline{8} + \underline{1} = \underline{9}$



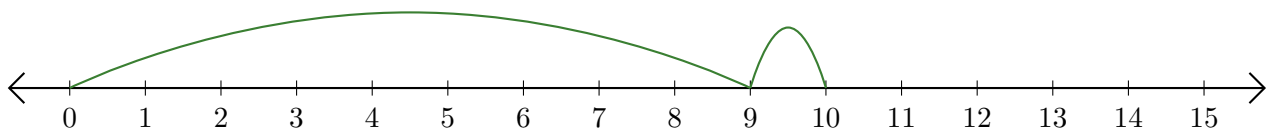
2. $\underline{11} + \underline{2} = \underline{13}$



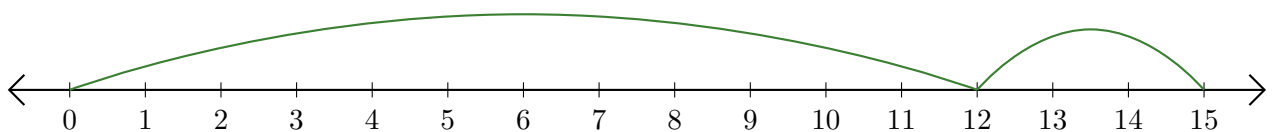
3. $\underline{6} + \underline{2} = \underline{8}$



4. $\underline{9} + \underline{1} = \underline{10}$



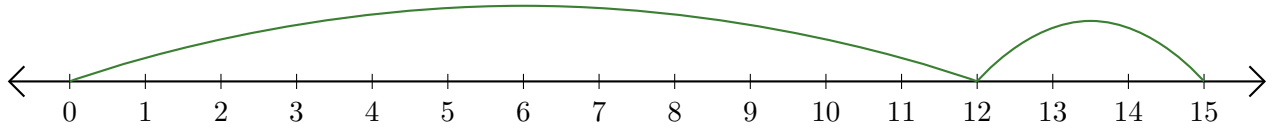
5. $\underline{12} + \underline{3} = \underline{15}$



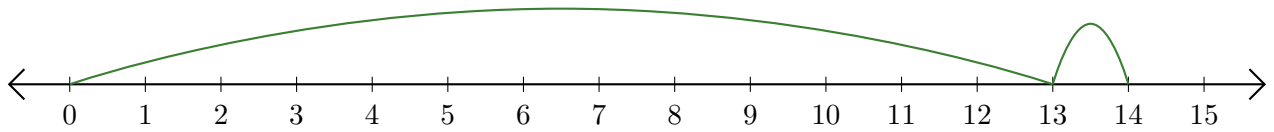
Lecture de Nombres sur une Droite Graduée (D)

Déterminez la question que chaque droite graduée démontre.

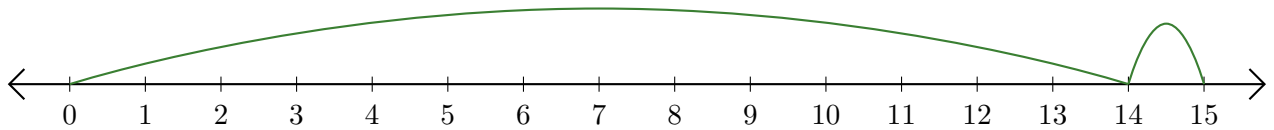
1. $\underline{\quad} + \underline{\quad} = \underline{\quad}$



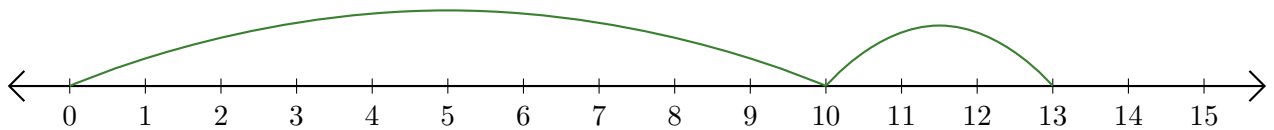
2. $\underline{\quad} + \underline{\quad} = \underline{\quad}$



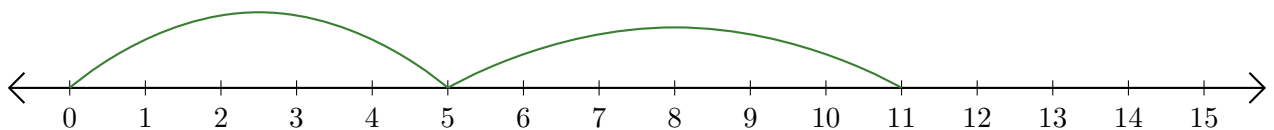
3. $\underline{\quad} + \underline{\quad} = \underline{\quad}$



4. $\underline{\quad} + \underline{\quad} = \underline{\quad}$



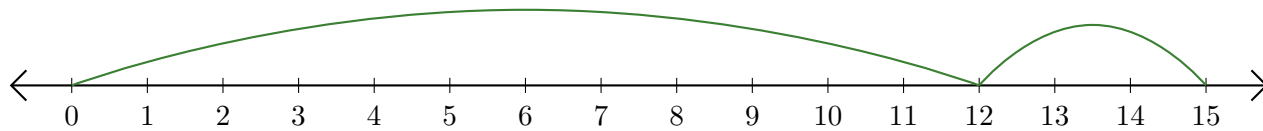
5. $\underline{\quad} + \underline{\quad} = \underline{\quad}$



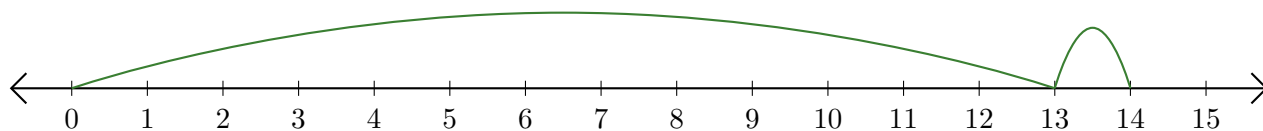
Lecture de Nombres sur une Droite Graduée (D) Réponses

Déterminez la question que chaque droite graduée démontre.

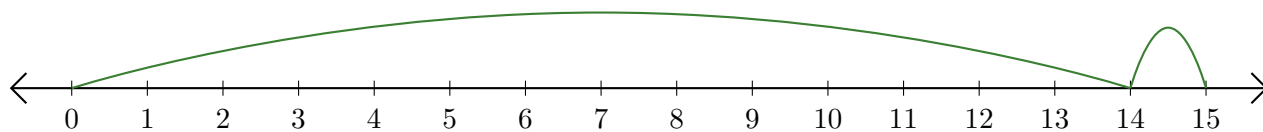
1. $\underline{12} + \underline{3} = \underline{15}$



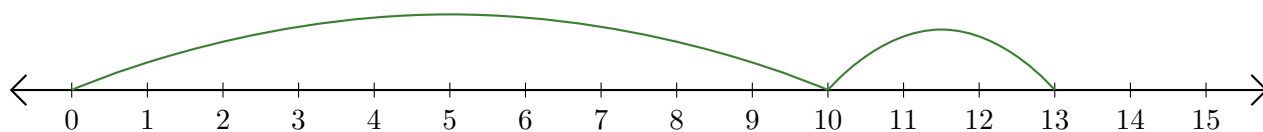
2. $\underline{13} + \underline{1} = \underline{14}$



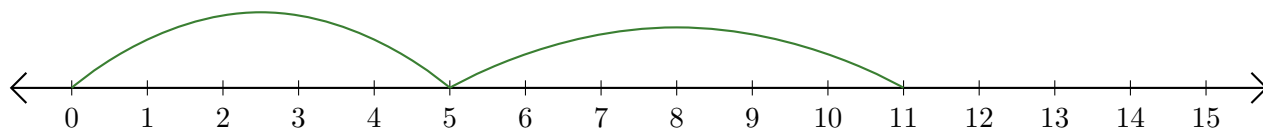
3. $\underline{14} + \underline{1} = \underline{15}$



4. $\underline{10} + \underline{3} = \underline{13}$



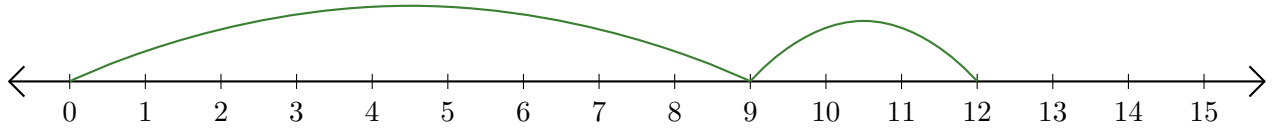
5. $\underline{5} + \underline{6} = \underline{11}$



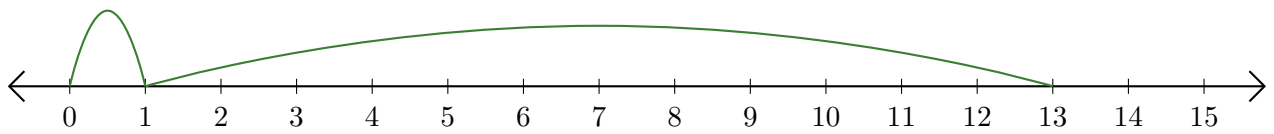
Lecture de Nombres sur une Droite Graduée (E)

Déterminez la question que chaque droite graduée démontre.

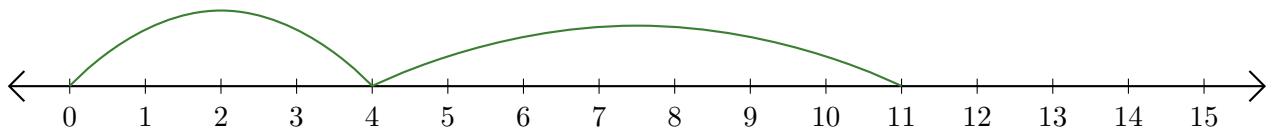
1. $\underline{\quad} + \underline{\quad} = \underline{\quad}$



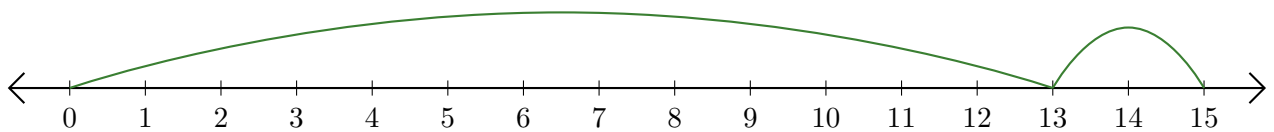
2. $\underline{\quad} + \underline{\quad} = \underline{\quad}$



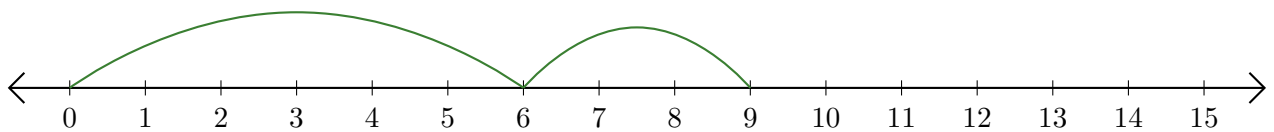
3. $\underline{\quad} + \underline{\quad} = \underline{\quad}$



4. $\underline{\quad} + \underline{\quad} = \underline{\quad}$



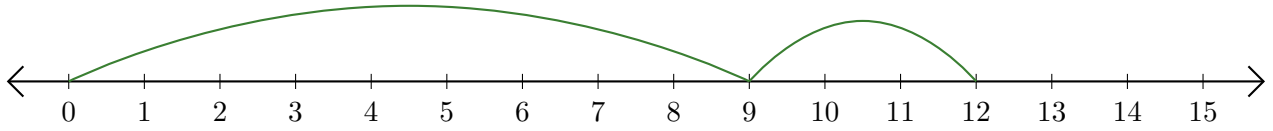
5. $\underline{\quad} + \underline{\quad} = \underline{\quad}$



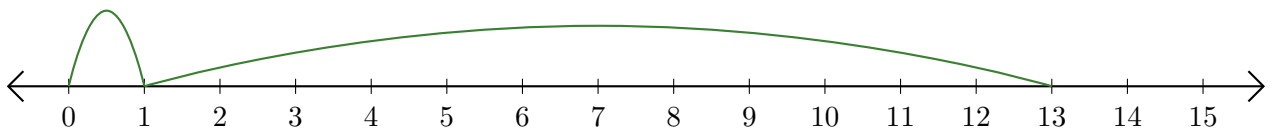
Lecture de Nombres sur une Droite Graduée (E) Réponses

Déterminez la question que chaque droite graduée démontre.

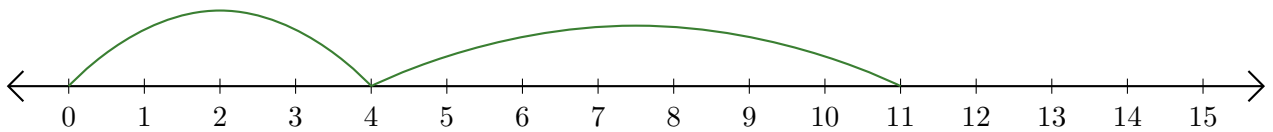
1. $\underline{9} + \underline{3} = \underline{12}$



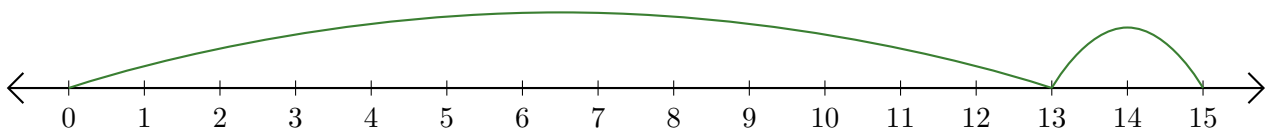
2. $\underline{1} + \underline{12} = \underline{13}$



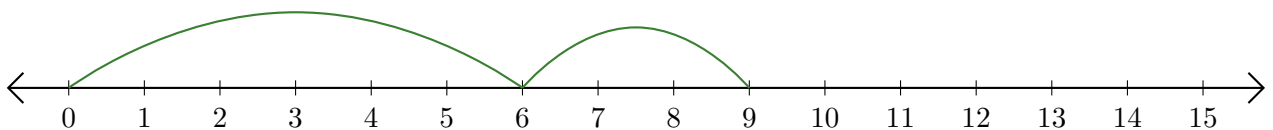
3. $\underline{4} + \underline{7} = \underline{11}$



4. $\underline{13} + \underline{2} = \underline{15}$



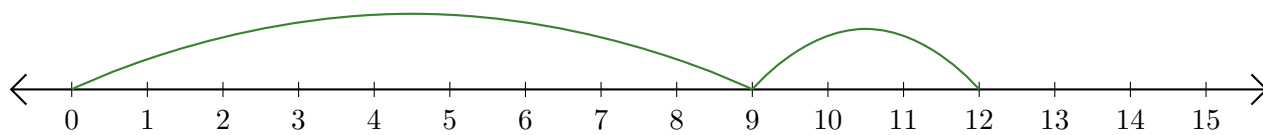
5. $\underline{6} + \underline{3} = \underline{9}$



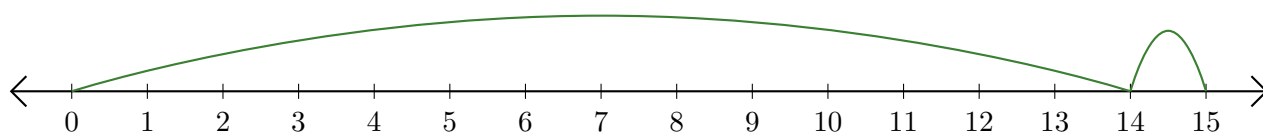
Lecture de Nombres sur une Droite Graduée (F)

Déterminez la question que chaque droite graduée démontre.

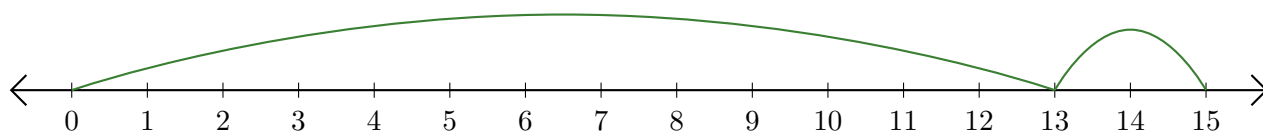
1. $\underline{\quad} + \underline{\quad} = \underline{\quad}$



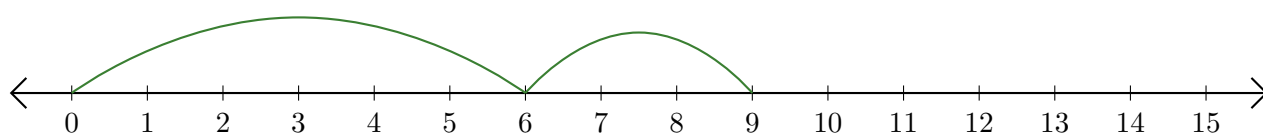
2. $\underline{\quad} + \underline{\quad} = \underline{\quad}$



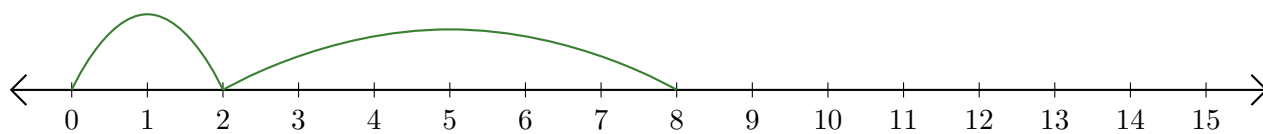
3. $\underline{\quad} + \underline{\quad} = \underline{\quad}$



4. $\underline{\quad} + \underline{\quad} = \underline{\quad}$



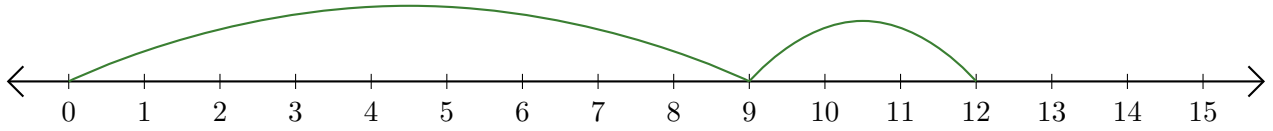
5. $\underline{\quad} + \underline{\quad} = \underline{\quad}$



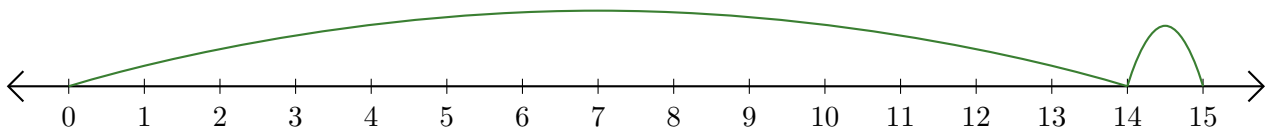
Lecture de Nombres sur une Droite Graduée (F) Réponses

Déterminez la question que chaque droite graduée démontre.

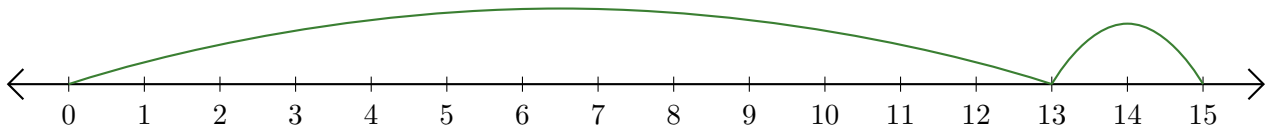
1. $\underline{9} + \underline{3} = \underline{12}$



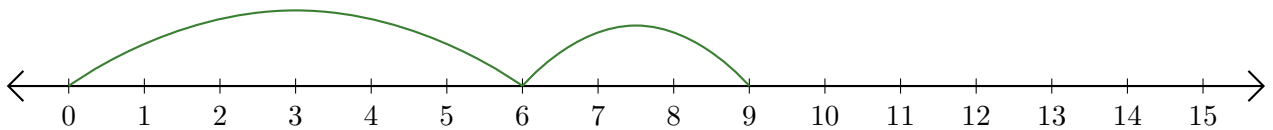
2. $\underline{14} + \underline{1} = \underline{15}$



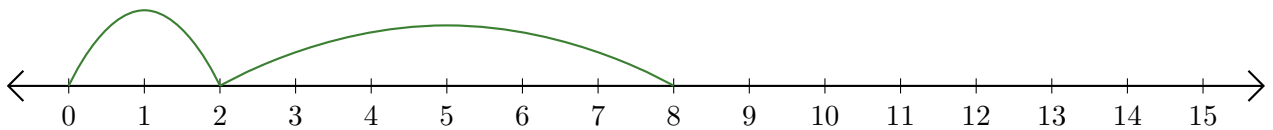
3. $\underline{13} + \underline{2} = \underline{15}$



4. $\underline{6} + \underline{3} = \underline{9}$



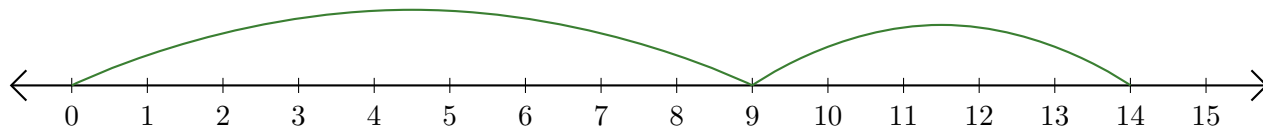
5. $\underline{2} + \underline{6} = \underline{8}$



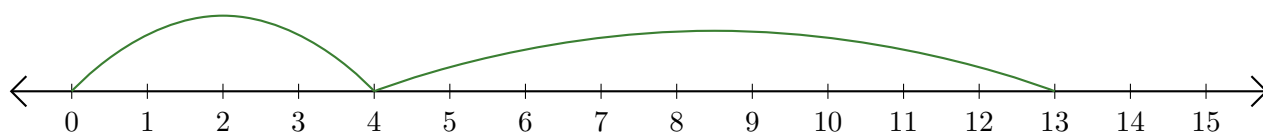
Lecture de Nombres sur une Droite Graduée (G)

Déterminez la question que chaque droite graduée démontre.

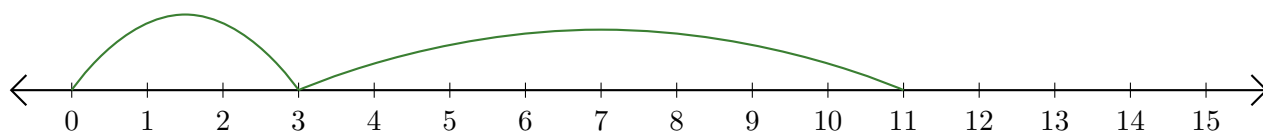
1. $\underline{\quad} + \underline{\quad} = \underline{\quad}$



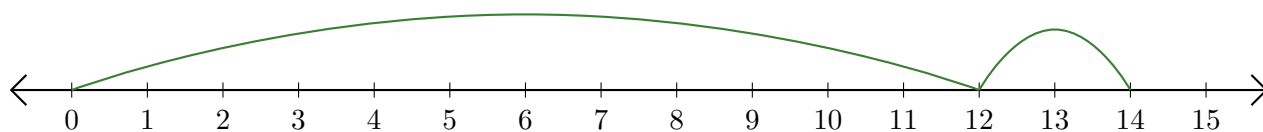
2. $\underline{\quad} + \underline{\quad} = \underline{\quad}$



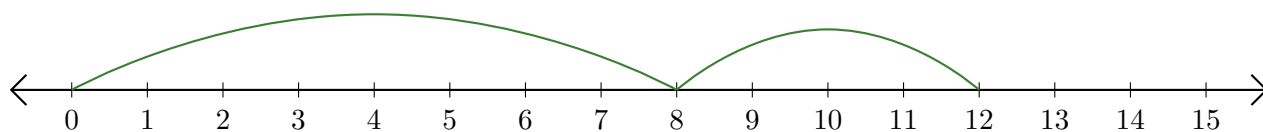
3. $\underline{\quad} + \underline{\quad} = \underline{\quad}$



4. $\underline{\quad} + \underline{\quad} = \underline{\quad}$



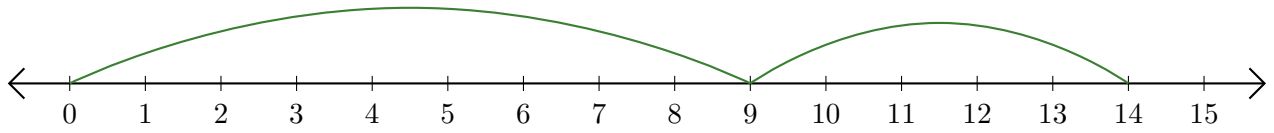
5. $\underline{\quad} + \underline{\quad} = \underline{\quad}$



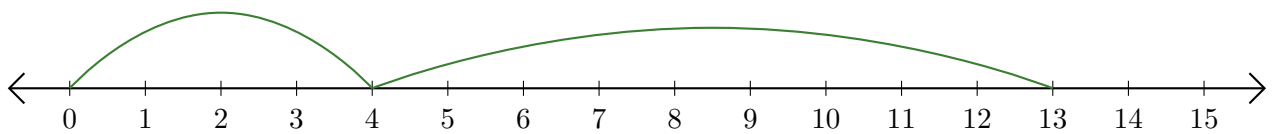
Lecture de Nombres sur une Droite Graduée (G) Réponses

Déterminez la question que chaque droite graduée démontre.

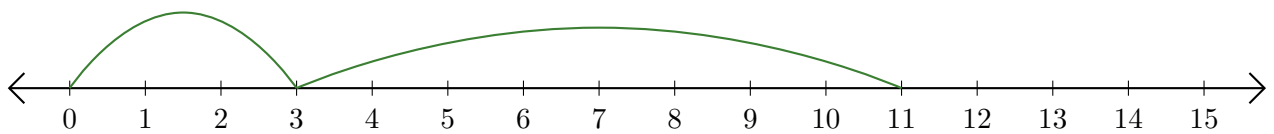
1. $\underline{9} + \underline{5} = \underline{14}$



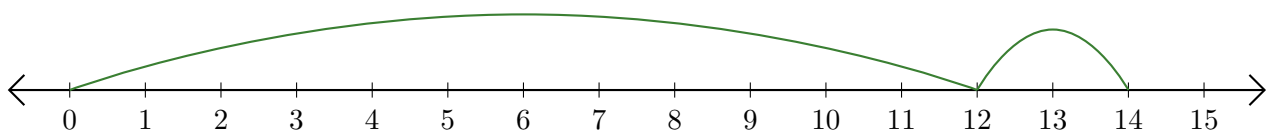
2. $\underline{4} + \underline{9} = \underline{13}$



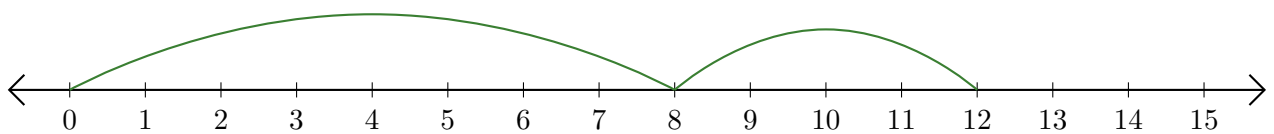
3. $\underline{3} + \underline{8} = \underline{11}$



4. $\underline{12} + \underline{2} = \underline{14}$



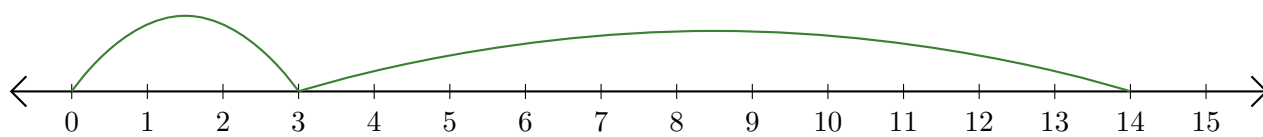
5. $\underline{8} + \underline{4} = \underline{12}$



Lecture de Nombres sur une Droite Graduée (H)

Déterminez la question que chaque droite graduée démontre.

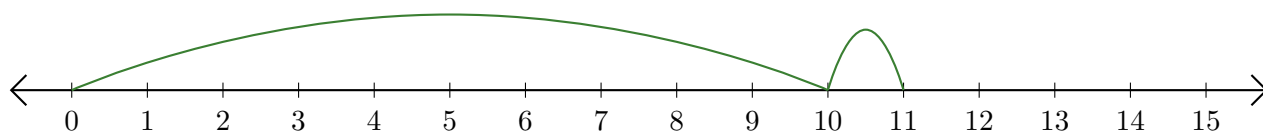
1. $\underline{\quad} + \underline{\quad} = \underline{\quad}$



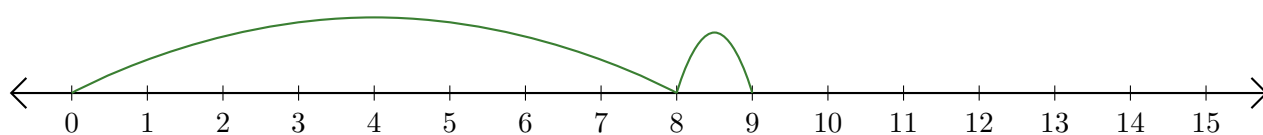
2. $\underline{\quad} + \underline{\quad} = \underline{\quad}$



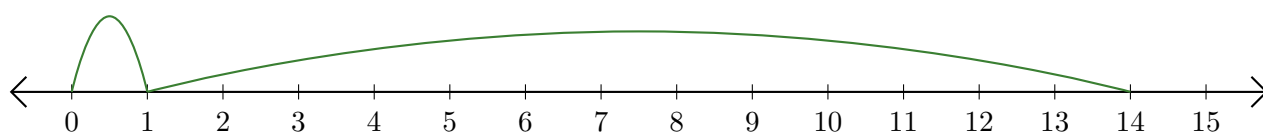
3. $\underline{\quad} + \underline{\quad} = \underline{\quad}$



4. $\underline{\quad} + \underline{\quad} = \underline{\quad}$



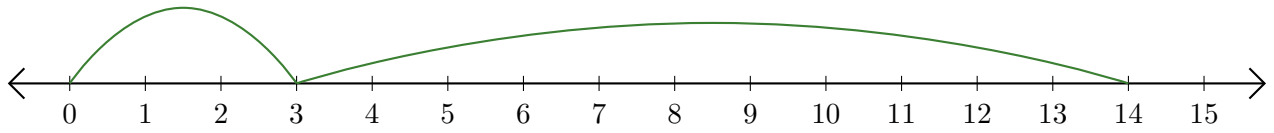
5. $\underline{\quad} + \underline{\quad} = \underline{\quad}$



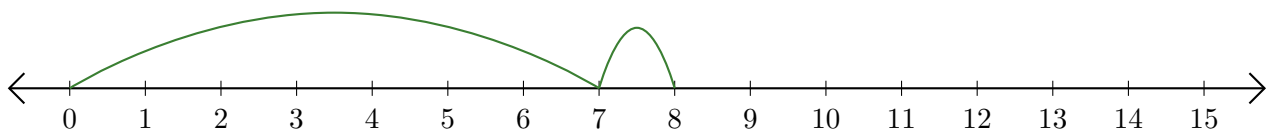
Lecture de Nombres sur une Droite Graduée (H) Réponses

Déterminez la question que chaque droite graduée démontre.

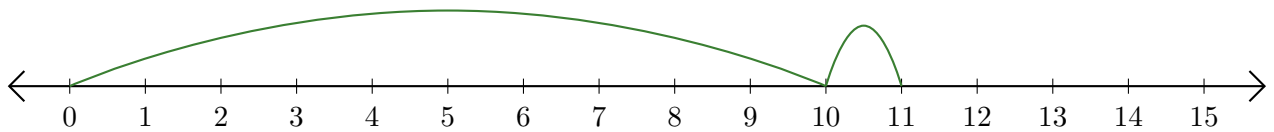
1. $\underline{3} + \underline{11} = \underline{14}$



2. $\underline{7} + \underline{1} = \underline{8}$



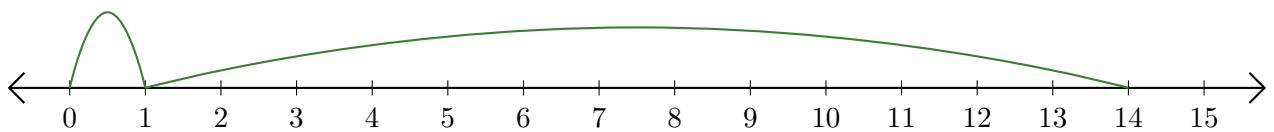
3. $\underline{10} + \underline{1} = \underline{11}$



4. $\underline{8} + \underline{1} = \underline{9}$



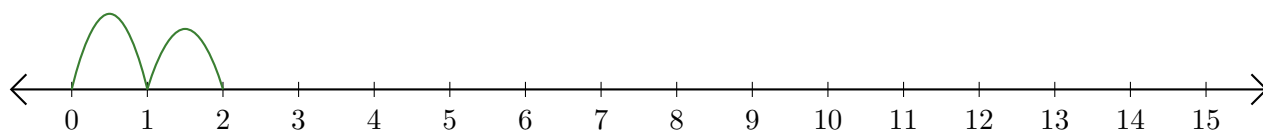
5. $\underline{1} + \underline{13} = \underline{14}$



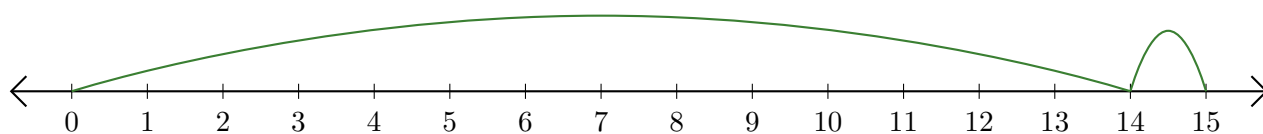
Lecture de Nombres sur une Droite Graduée (I)

Déterminez la question que chaque droite graduée démontre.

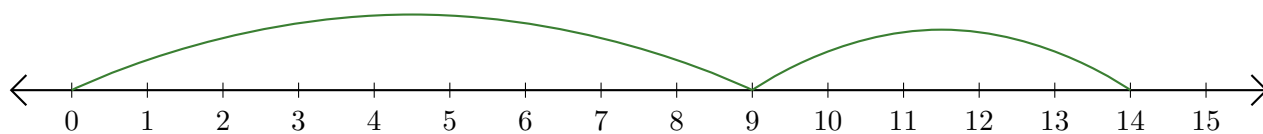
1. $\underline{\quad} + \underline{\quad} = \underline{\quad}$



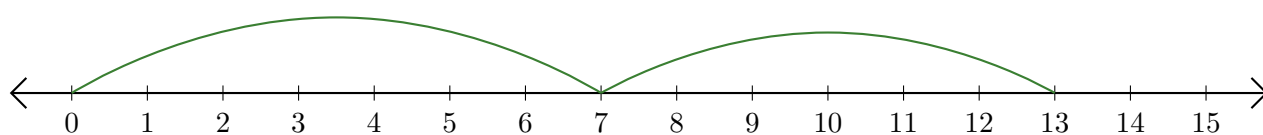
2. $\underline{\quad} + \underline{\quad} = \underline{\quad}$



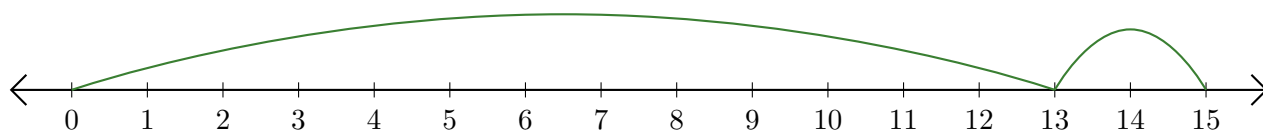
3. $\underline{\quad} + \underline{\quad} = \underline{\quad}$



4. $\underline{\quad} + \underline{\quad} = \underline{\quad}$



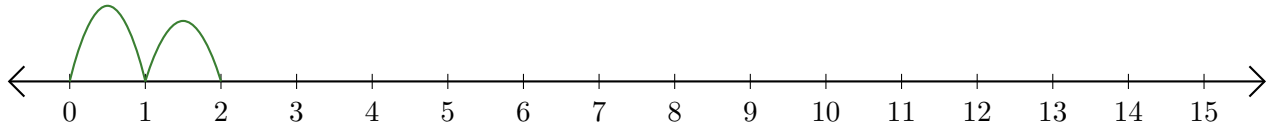
5. $\underline{\quad} + \underline{\quad} = \underline{\quad}$



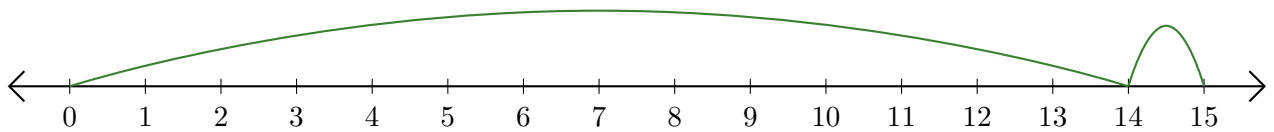
Lecture de Nombres sur une Droite Graduée (I) Réponses

Déterminez la question que chaque droite graduée démontre.

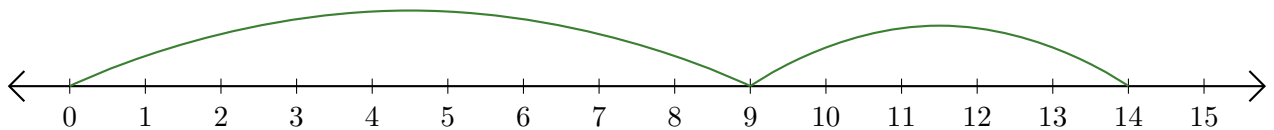
1. $\underline{1} + \underline{1} = \underline{2}$



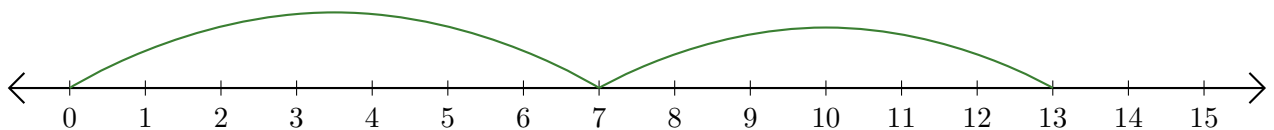
2. $\underline{14} + \underline{1} = \underline{15}$



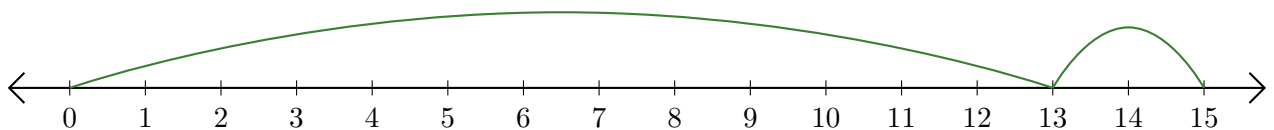
3. $\underline{9} + \underline{5} = \underline{14}$



4. $\underline{7} + \underline{6} = \underline{13}$



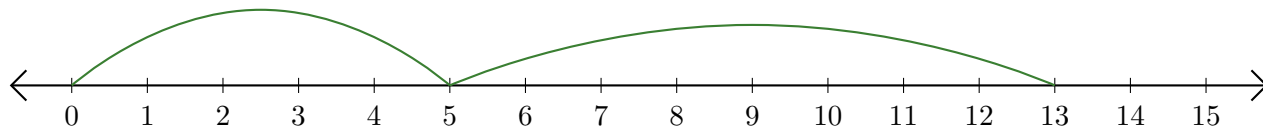
5. $\underline{13} + \underline{2} = \underline{15}$



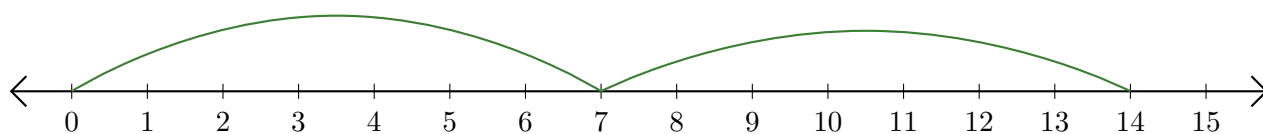
Lecture de Nombres sur une Droite Graduée (J)

Déterminez la question que chaque droite graduée démontre.

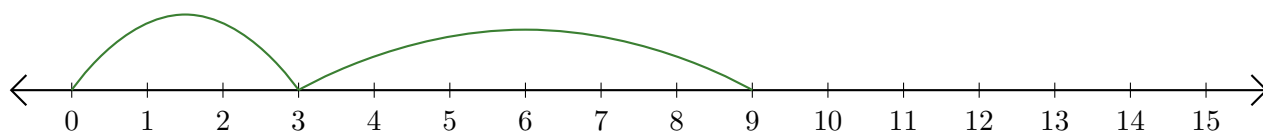
1. $\underline{\quad} + \underline{\quad} = \underline{\quad}$



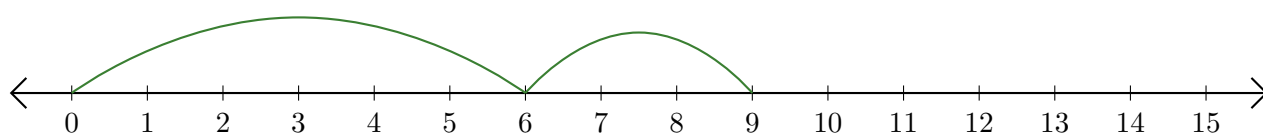
2. $\underline{\quad} + \underline{\quad} = \underline{\quad}$



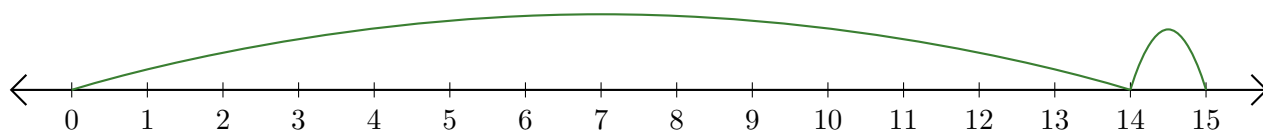
3. $\underline{\quad} + \underline{\quad} = \underline{\quad}$



4. $\underline{\quad} + \underline{\quad} = \underline{\quad}$



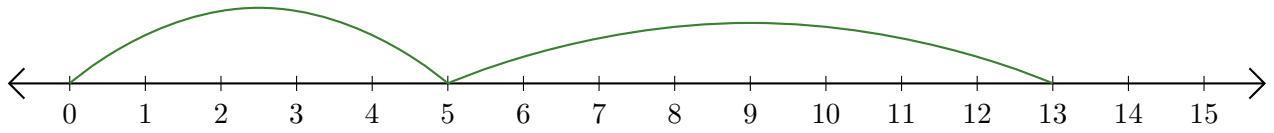
5. $\underline{\quad} + \underline{\quad} = \underline{\quad}$



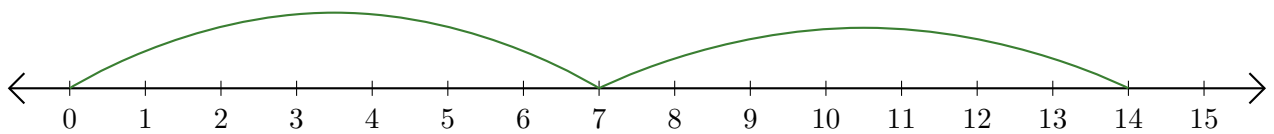
Lecture de Nombres sur une Droite Graduée (J) Réponses

Déterminez la question que chaque droite graduée démontre.

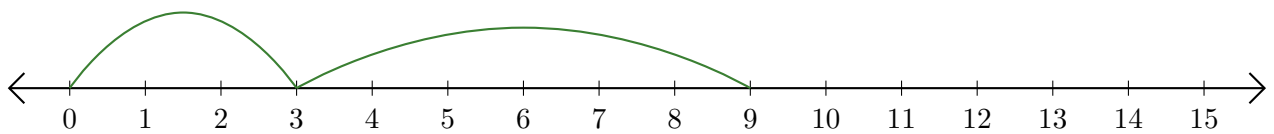
1. $\underline{5} + \underline{8} = \underline{13}$



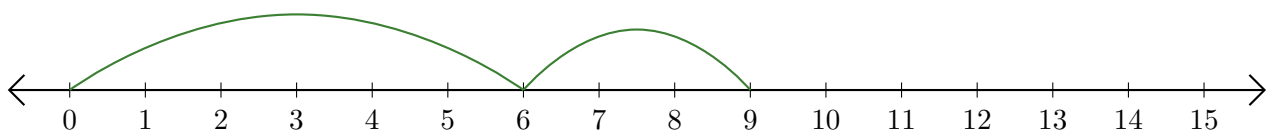
2. $\underline{7} + \underline{7} = \underline{14}$



3. $\underline{3} + \underline{6} = \underline{9}$



4. $\underline{6} + \underline{3} = \underline{9}$



5. $\underline{14} + \underline{1} = \underline{15}$

