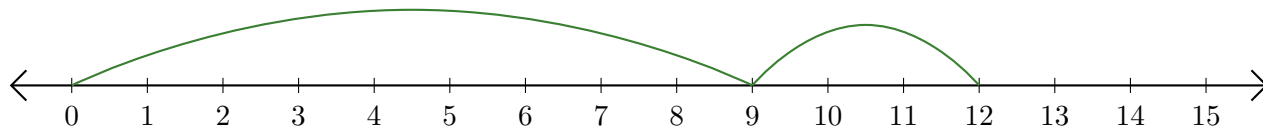


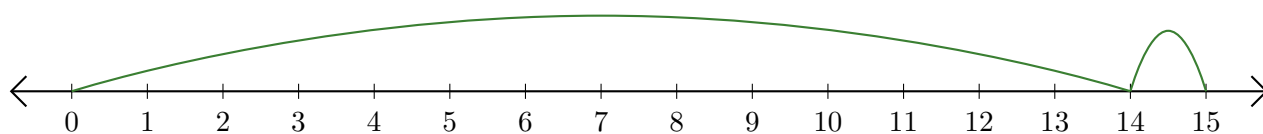
Lecture de Nombres sur une Droite Graduée (F)

Déterminez la question que chaque droite graduée démontre.

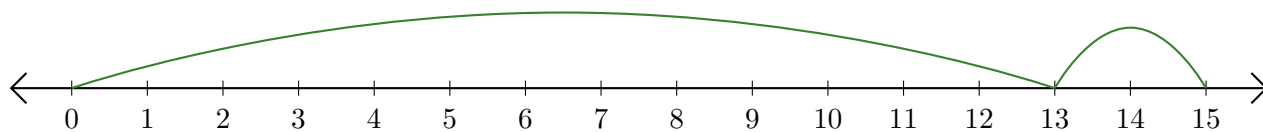
1. $\underline{\quad} + \underline{\quad} = \underline{\quad}$



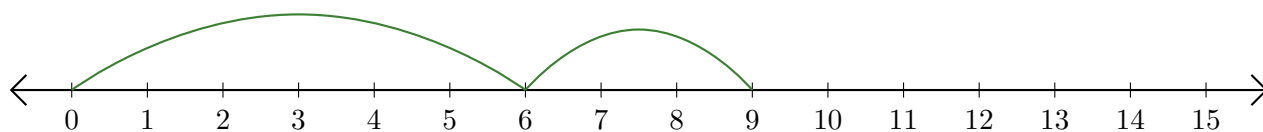
2. $\underline{\quad} + \underline{\quad} = \underline{\quad}$



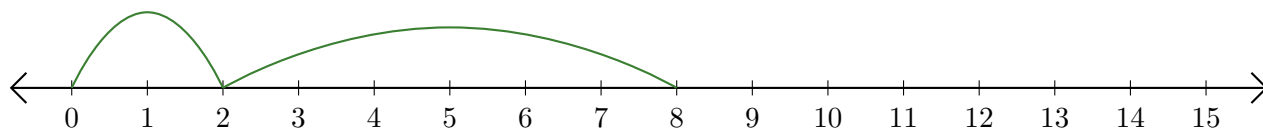
3. $\underline{\quad} + \underline{\quad} = \underline{\quad}$



4. $\underline{\quad} + \underline{\quad} = \underline{\quad}$



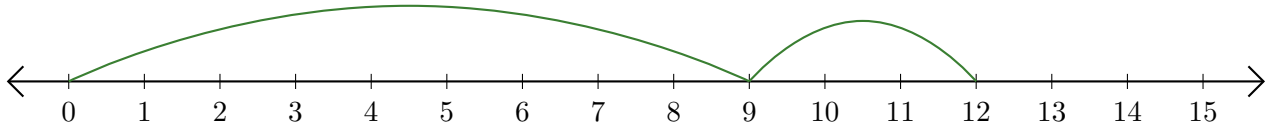
5. $\underline{\quad} + \underline{\quad} = \underline{\quad}$



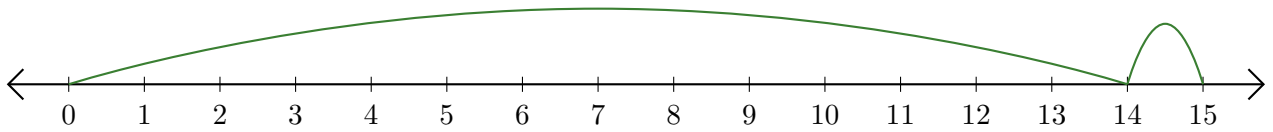
Lecture de Nombres sur une Droite Graduée (F) Réponses

Déterminez la question que chaque droite graduée démontre.

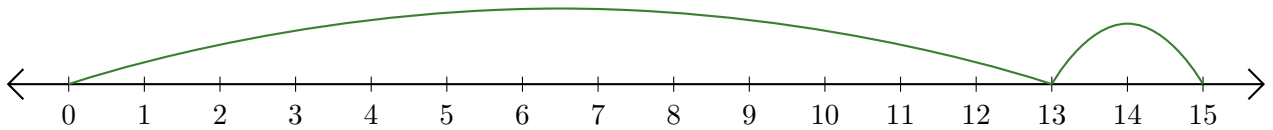
1. $\underline{9} + \underline{3} = \underline{12}$



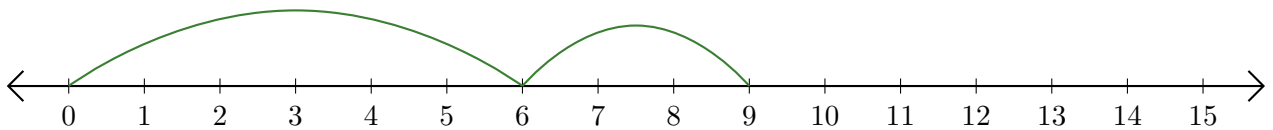
2. $\underline{14} + \underline{1} = \underline{15}$



3. $\underline{13} + \underline{2} = \underline{15}$



4. $\underline{6} + \underline{3} = \underline{9}$



5. $\underline{2} + \underline{6} = \underline{8}$

