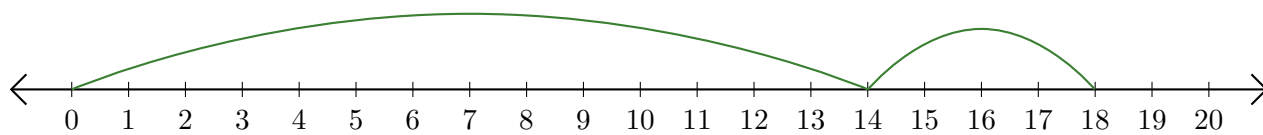


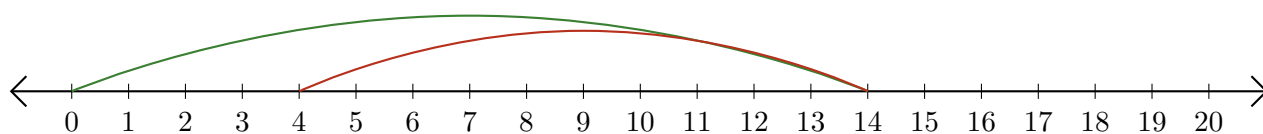
Lecture de Nombres sur une Droite Graduée (C)

Déterminez la question que chaque droite graduée démontre.

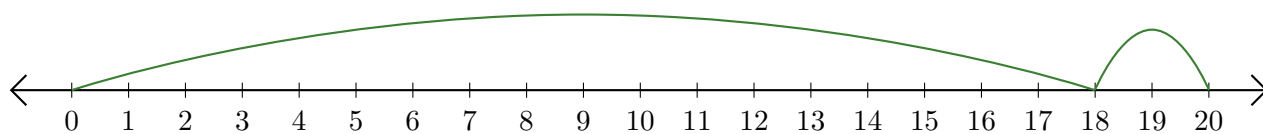
1. $\underline{\quad} + \underline{\quad} = \underline{\quad}$



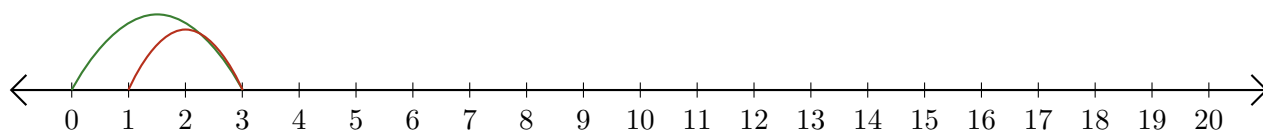
2. $\underline{\quad} - \underline{\quad} = \underline{\quad}$



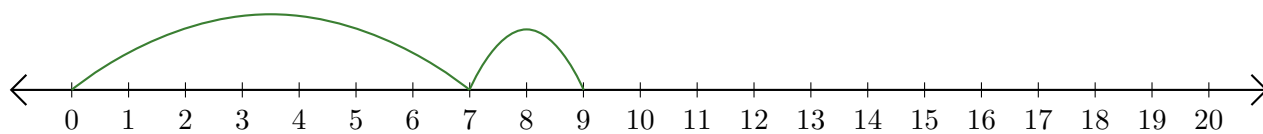
3. $\underline{\quad} + \underline{\quad} = \underline{\quad}$



4. $\underline{\quad} - \underline{\quad} = \underline{\quad}$



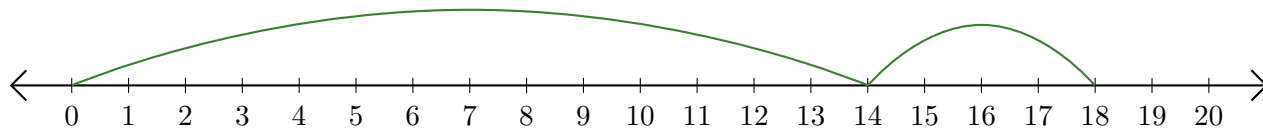
5. $\underline{\quad} + \underline{\quad} = \underline{\quad}$



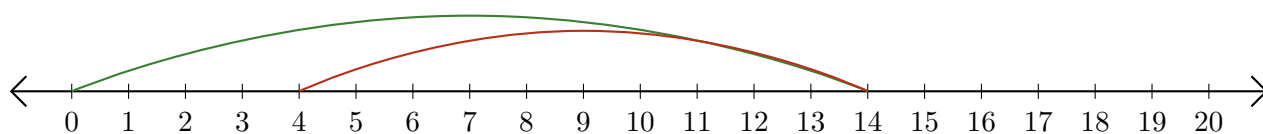
Lecture de Nombres sur une Droite Graduée (C) Réponses

Déterminez la question que chaque droite graduée démontre.

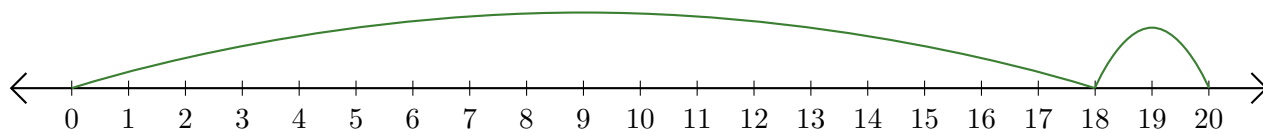
1. $\underline{14} + \underline{4} = \underline{18}$



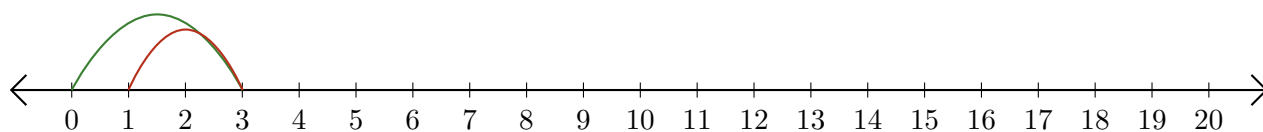
2. $\underline{14} - \underline{10} = \underline{4}$



3. $\underline{18} + \underline{2} = \underline{20}$



4. $\underline{3} - \underline{2} = \underline{1}$



5. $\underline{7} + \underline{2} = \underline{9}$

