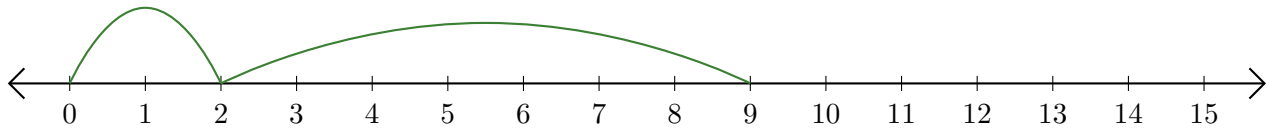


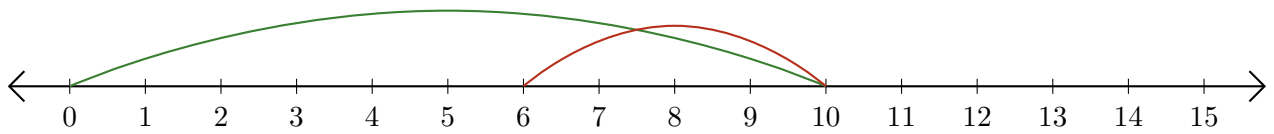
# Lecture de Nombres sur une Droite Graduée (D)

Déterminez la question que chaque droite graduée démontre.

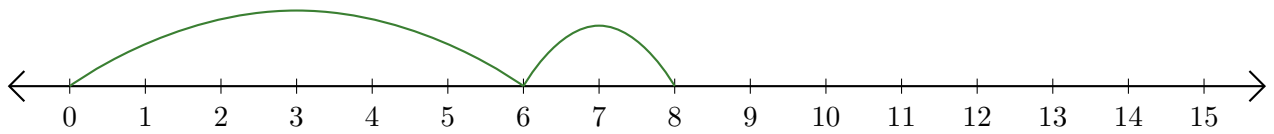
1.  $\underline{\quad} + \underline{\quad} = \underline{\quad}$



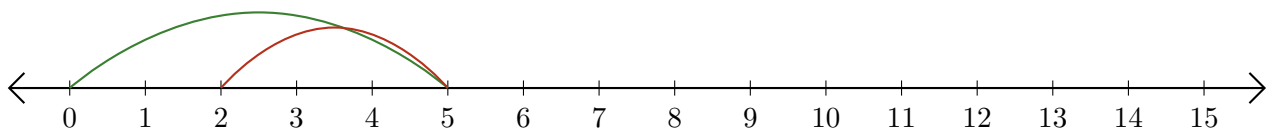
2.  $\underline{\quad} - \underline{\quad} = \underline{\quad}$



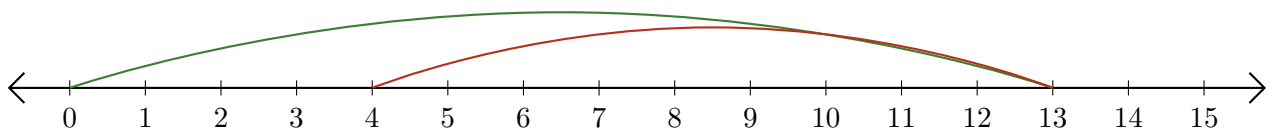
3.  $\underline{\quad} + \underline{\quad} = \underline{\quad}$



4.  $\underline{\quad} - \underline{\quad} = \underline{\quad}$



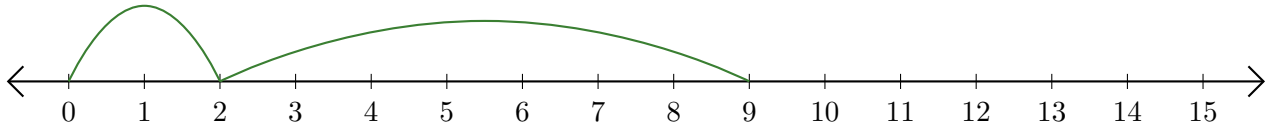
5.  $\underline{\quad} - \underline{\quad} = \underline{\quad}$



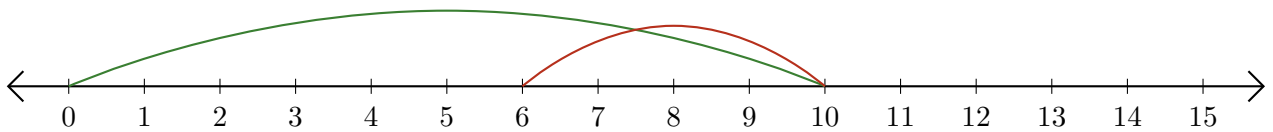
# Lecture de Nombres sur une Droite Graduée (D) Réponses

Déterminez la question que chaque droite graduée démontre.

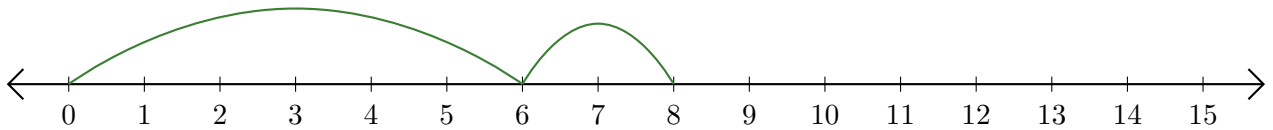
1.  $\underline{2} + \underline{7} = \underline{9}$



2.  $\underline{10} - \underline{4} = \underline{6}$



3.  $\underline{6} + \underline{2} = \underline{8}$



4.  $\underline{5} - \underline{3} = \underline{2}$



5.  $\underline{13} - \underline{9} = \underline{4}$

