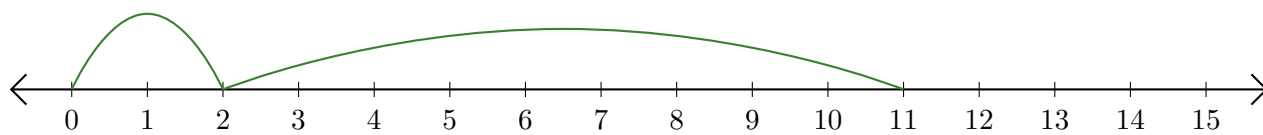


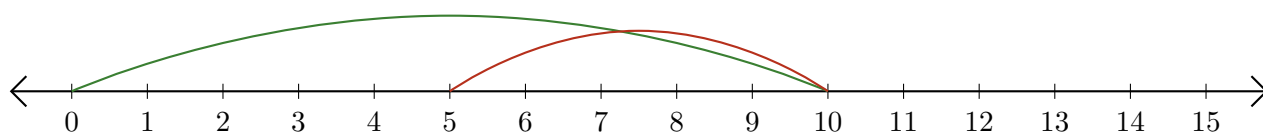
Lecture de Nombres sur une Droite Graduée (A)

Déterminez la question que chaque droite graduée démontre.

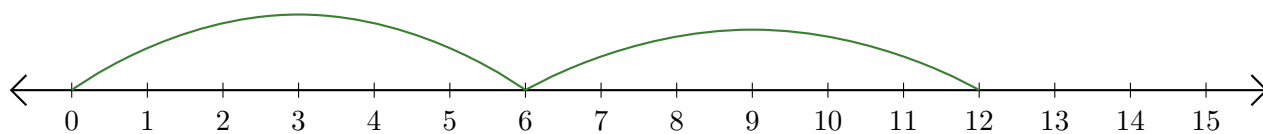
1. $\underline{\quad} + \underline{\quad} = \underline{\quad}$



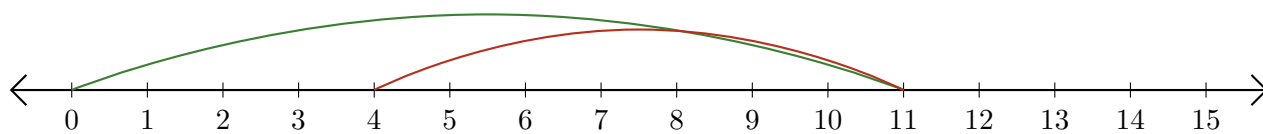
2. $\underline{\quad} - \underline{\quad} = \underline{\quad}$



3. $\underline{\quad} + \underline{\quad} = \underline{\quad}$



4. $\underline{\quad} - \underline{\quad} = \underline{\quad}$



5. $\underline{\quad} - \underline{\quad} = \underline{\quad}$

