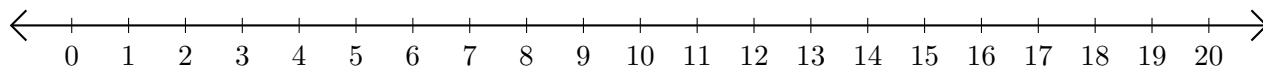


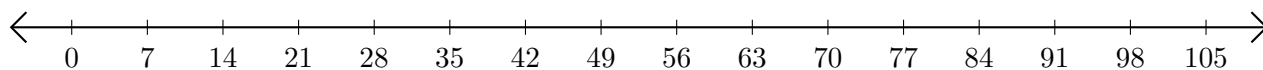
# Addition de Nombres sur une Droite Graduée (G)

Utilisez la droite graduée pour calculer chaque somme.

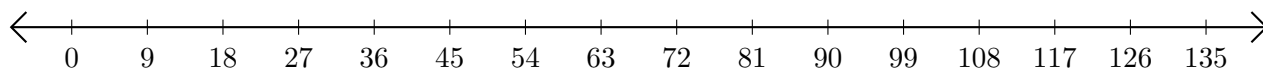
1.  $17 + 2 = \underline{\quad}$



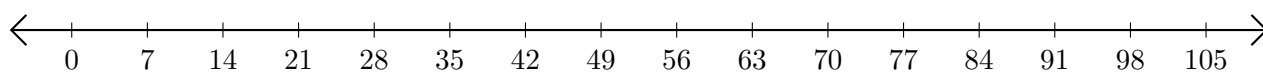
2.  $7 + 84 = \underline{\quad}$



3.  $117 + 9 = \underline{\quad}$



4.  $84 + 21 = \underline{\quad}$



5.  $30 + 25 = \underline{\quad}$

