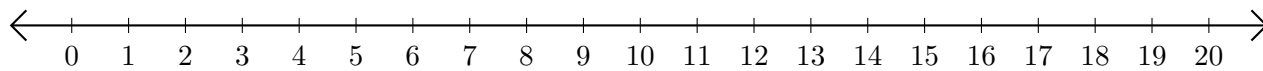


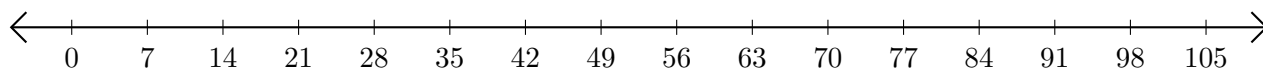
Addition de Nombres sur une Droite Graduée (G)

Utilisez la droite graduée pour calculer chaque somme.

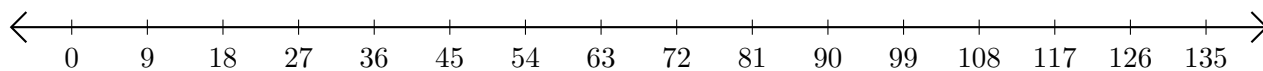
1. $17 + 2 = \underline{\hspace{2cm}}$



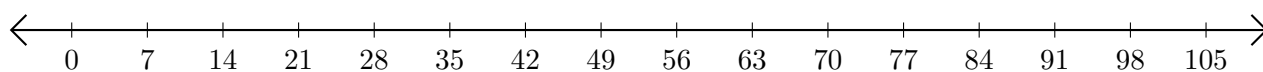
2. $7 + 84 = \underline{\hspace{2cm}}$



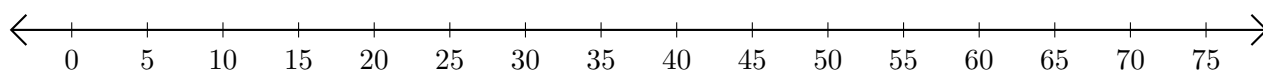
3. $117 + 9 = \underline{\hspace{2cm}}$



4. $84 + 21 = \underline{\hspace{2cm}}$



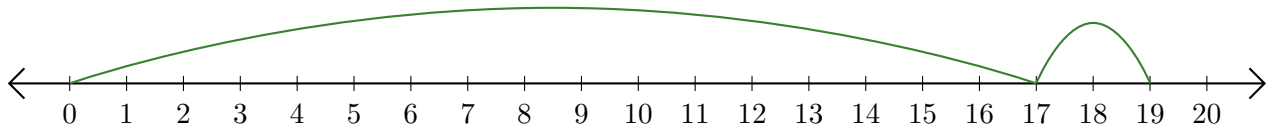
5. $30 + 25 = \underline{\hspace{2cm}}$



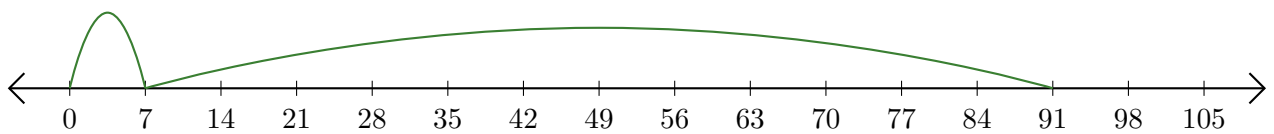
Addition de Nombres sur une Droite Graduée (G) Réponses

Utilisez la droite graduée pour calculer chaque somme.

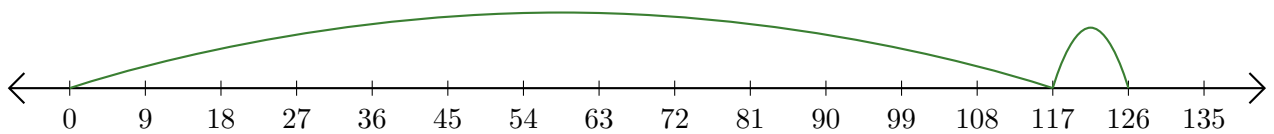
1. $17 + 2 = \underline{19}$



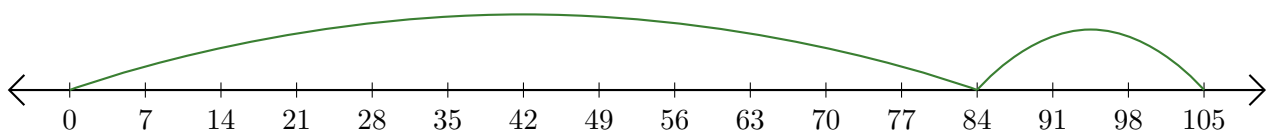
2. $7 + 84 = \underline{91}$



3. $117 + 9 = \underline{126}$



4. $84 + 21 = \underline{105}$



5. $30 + 25 = \underline{55}$

