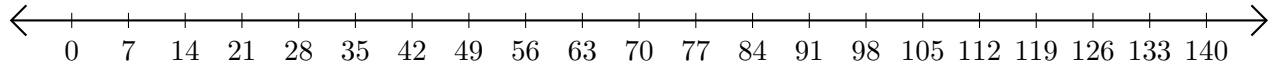


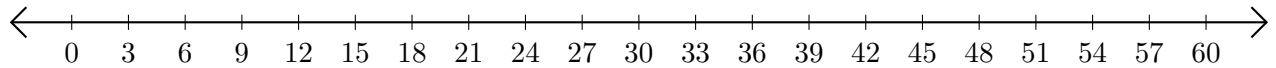
Addition de Nombres sur une Droite Graduée (F)

Utilisez la droite graduée pour calculer chaque somme.

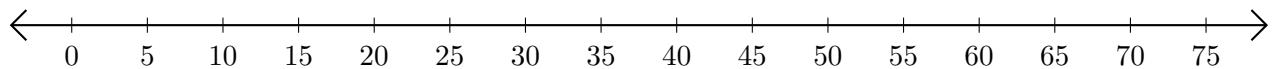
1. $77 + 14 = \underline{\quad}$



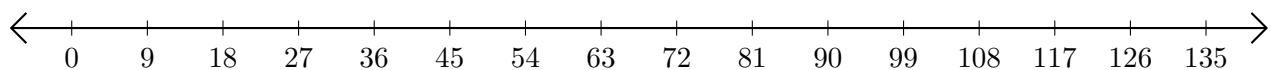
2. $3 + 54 = \underline{\quad}$



3. $60 + 10 = \underline{\quad}$



4. $54 + 54 = \underline{\quad}$



5. $42 + 36 = \underline{\quad}$

