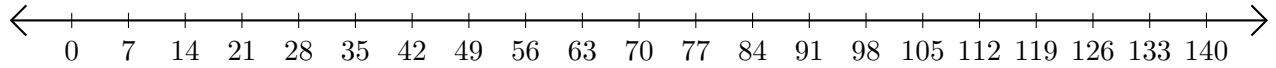


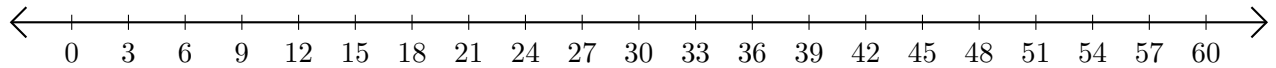
Addition de Nombres sur une Droite Graduée (F)

Utilisez la droite graduée pour calculer chaque somme.

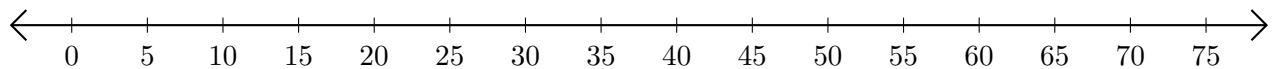
1. $77 + 14 = \underline{\hspace{2cm}}$



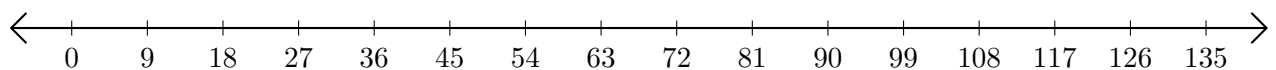
2. $3 + 54 = \underline{\hspace{2cm}}$



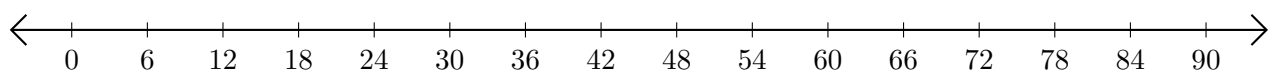
3. $60 + 10 = \underline{\hspace{2cm}}$



4. $54 + 54 = \underline{\hspace{2cm}}$



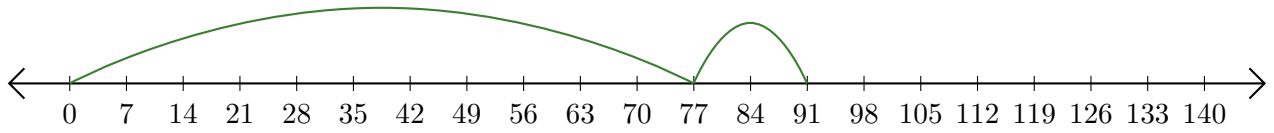
5. $42 + 36 = \underline{\hspace{2cm}}$



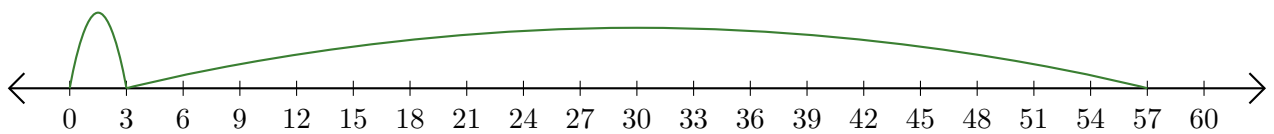
Addition de Nombres sur une Droite Graduée (F) Réponses

Utilisez la droite graduée pour calculer chaque somme.

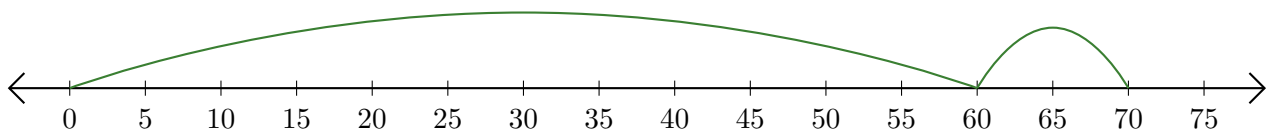
1. $77 + 14 = \underline{91}$



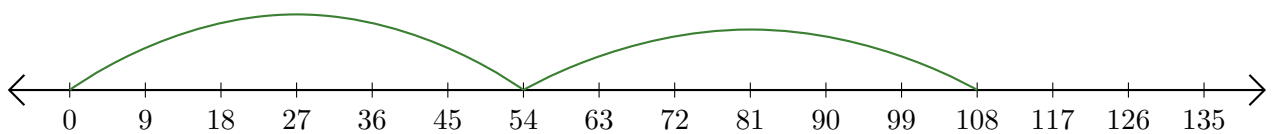
2. $3 + 54 = \underline{57}$



3. $60 + 10 = \underline{70}$



4. $54 + 54 = \underline{108}$



5. $42 + 36 = \underline{78}$

