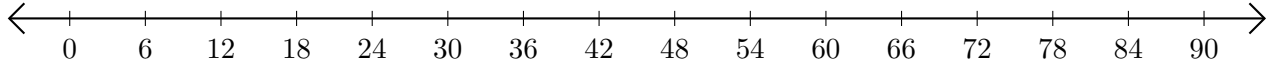


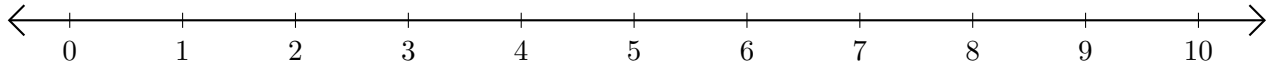
# Addition de Nombres sur une Droite Graduée (E)

Utilisez la droite graduée pour calculer chaque somme.

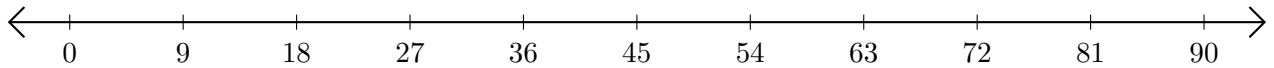
1.  $42 + 42 = \underline{\hspace{2cm}}$



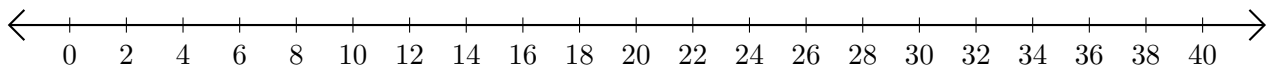
2.  $4 + 6 = \underline{\hspace{2cm}}$



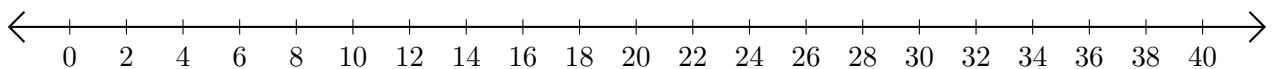
3.  $81 + 9 = \underline{\hspace{2cm}}$



4.  $8 + 2 = \underline{\hspace{2cm}}$



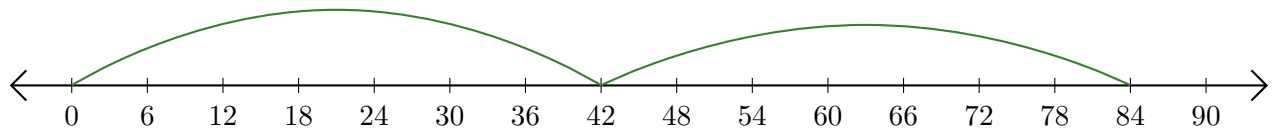
5.  $26 + 12 = \underline{\hspace{2cm}}$



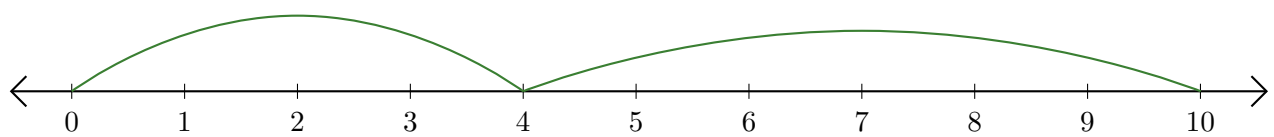
# Addition de Nombres sur une Droite Graduée (E) Réponses

Utilisez la droite graduée pour calculer chaque somme.

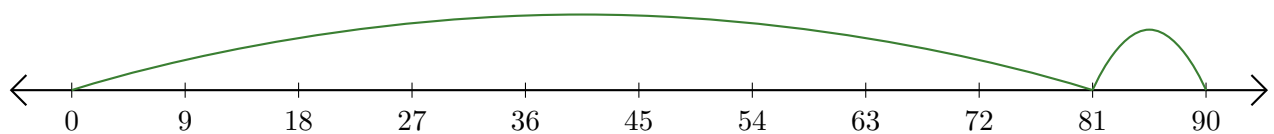
1.  $42 + 42 = \underline{84}$




2.  $4 + 6 = \underline{10}$



3.  $81 + 9 = \underline{90}$



4.  $8 + 2 = \underline{10}$



5.  $26 + 12 = \underline{38}$

